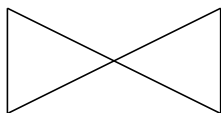


Classifying Quadrilaterals (A)

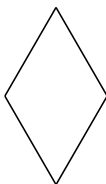
Identify each quadrilateral.

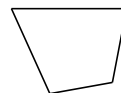





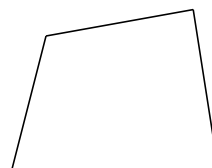




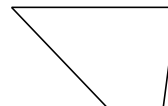












Classifying Quadrilaterals (A) Answers

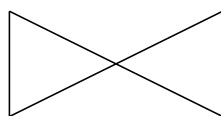
Identify each quadrilateral.



rectangle



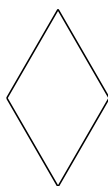
right-angled trapezoid



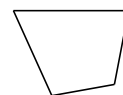
bowtie



isosceles trapezoid



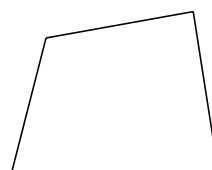
rhombus



quadrilateral



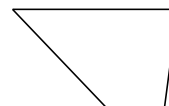
square



quadrilateral



kite

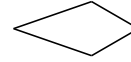


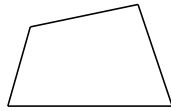
trapezoid

Classifying Quadrilaterals (B)

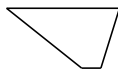
Identify each quadrilateral.

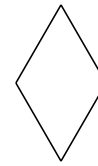







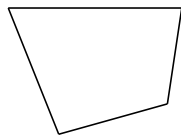













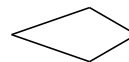


Classifying Quadrilaterals (B) Answers

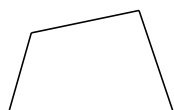
Identify each quadrilateral.



dart



kite



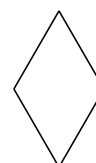
quadrilateral




parallelogram



trapezoid



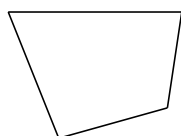
rhombus



square



bowtie



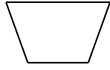
quadrilateral




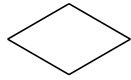
right-angled trapezoid

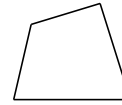
Classifying Quadrilaterals (C)

Identify each quadrilateral.



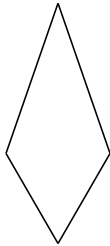


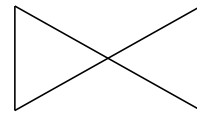


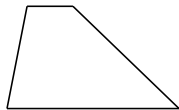








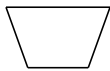






Classifying Quadrilaterals (C) Answers

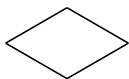
Identify each quadrilateral.



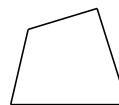
isosceles trapezoid



right-angled trapezoid




rhombus



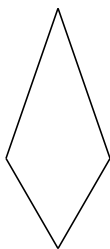
quadrilateral



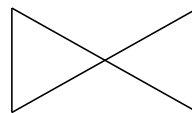
dart



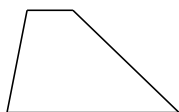
parallelogram



kite



bowtie




trapezoid



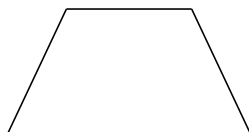
rhombus

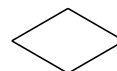
Classifying Quadrilaterals (D)

Identify each quadrilateral.

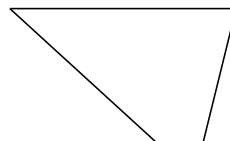






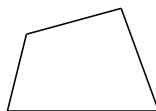















Classifying Quadrilaterals (D) Answers

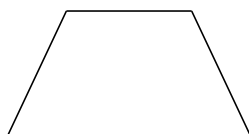
Identify each quadrilateral.



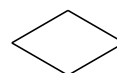
bowtie



square



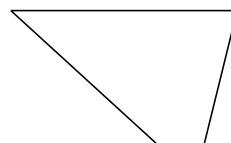
isosceles trapezoid



rhombus



right-angled trapezoid



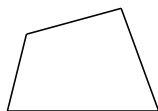
trapezoid




parallelogram



rhombus




quadrilateral

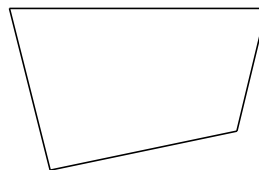


rectangle

Classifying Quadrilaterals (E)

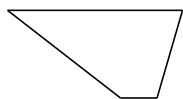
Identify each quadrilateral.




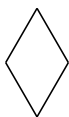


















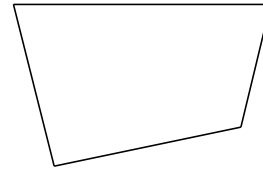


Classifying Quadrilaterals (E) Answers

Identify each quadrilateral.



parallelogram



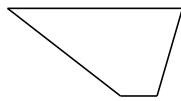
quadrilateral




right-angled trapezoid



dart



trapezoid




bowtie



rhombus



rectangle




square




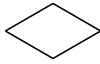
rectangle

Classifying Quadrilaterals (F)

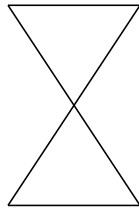
Identify each quadrilateral.



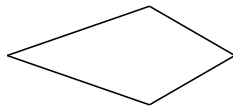





















Classifying Quadrilaterals (F) Answers

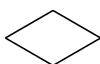
Identify each quadrilateral.



rectangle



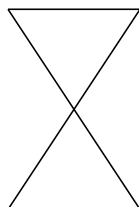
square



rhombus



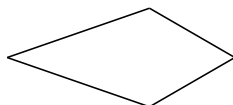
dart



bowtie




rhombus



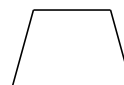
kite



trapezoid



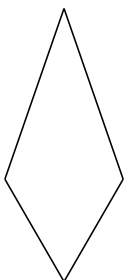
right-angled trapezoid



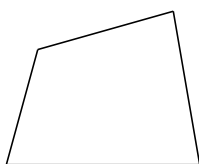
isosceles trapezoid

Classifying Quadrilaterals (G)

Identify each quadrilateral.



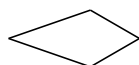


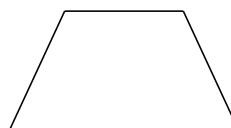




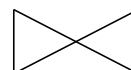






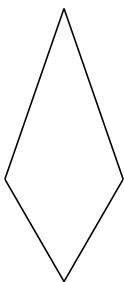






Classifying Quadrilaterals (G) Answers

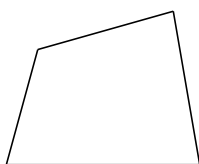
Identify each quadrilateral.



kite



dart



quadrilateral



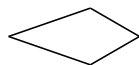
square



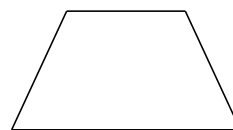
parallelogram



rhombus



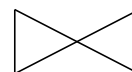
kite



isosceles trapezoid



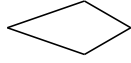
right-angled trapezoid

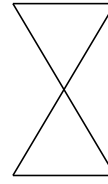


bowtie


Classifying Quadrilaterals (H)

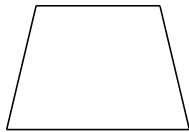
Identify each quadrilateral.

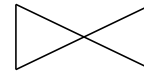





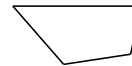


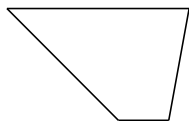








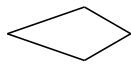




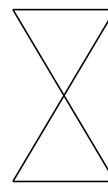


Classifying Quadrilaterals (H) Answers

Identify each quadrilateral.



kite



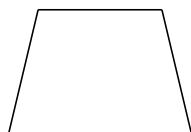
bowtie



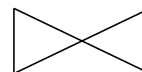
square



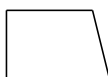
rectangle



isosceles trapezoid



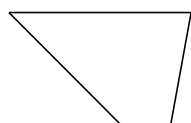
bowtie



right-angled trapezoid



quadrilateral



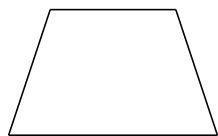
trapezoid




dart

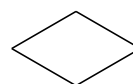
Classifying Quadrilaterals (I)

Identify each quadrilateral.



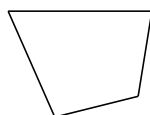


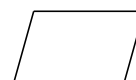




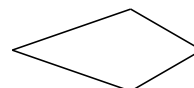






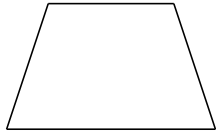







Classifying Quadrilaterals (I) Answers

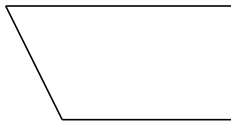
Identify each quadrilateral.



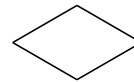
isosceles trapezoid



square



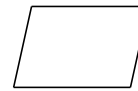
right-angled trapezoid



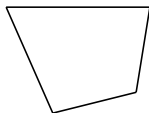
rhombus



dart




parallelogram



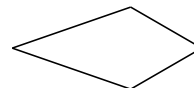
quadrilateral



parallelogram



rectangle




kite

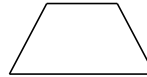
Classifying Quadrilaterals (J)

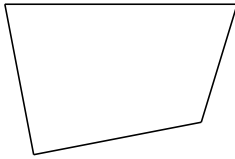
Identify each quadrilateral.

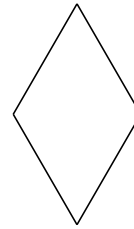




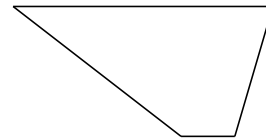


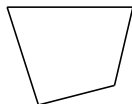


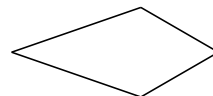













Classifying Quadrilaterals (J) Answers

Identify each quadrilateral.



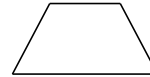
parallelogram



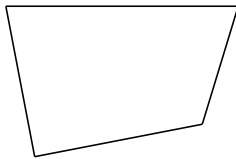
bowtie



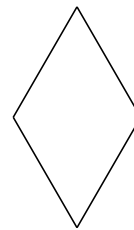
right-angled trapezoid



isosceles trapezoid



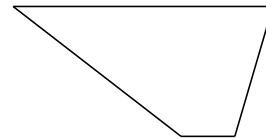
quadrilateral



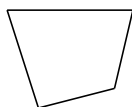
rhombus



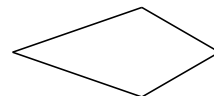
square



trapezoid



quadrilateral



kite