



# Classifying Quadrilaterals (B)

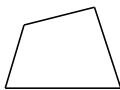
Identify each quadrilateral.



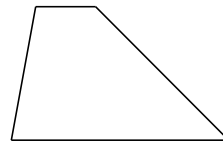
\_\_\_\_\_



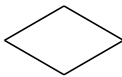
\_\_\_\_\_




\_\_\_\_\_




\_\_\_\_\_



\_\_\_\_\_



\_\_\_\_\_




\_\_\_\_\_



\_\_\_\_\_



\_\_\_\_\_



\_\_\_\_\_

## Classifying Quadrilaterals (B) Answers

Identify each quadrilateral.



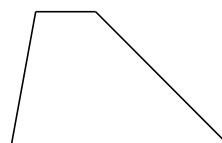
square



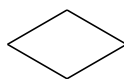
square




quadrilateral




trapezoid



rhombus



rectangle




square



square



parallelogram



square