



Classifying Quadrilaterals (F)


Identify each quadrilateral.

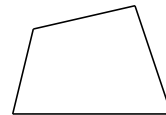


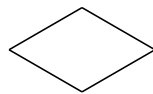


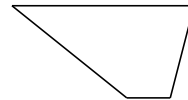





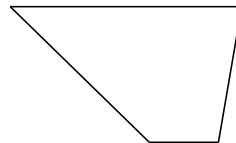













Classifying Quadrilaterals (F) Answers


Identify each quadrilateral.




square




rectangle



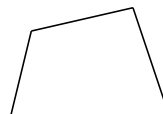
square



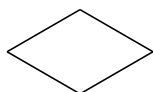
parallelogram



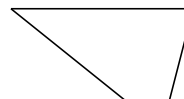
square




quadrilateral



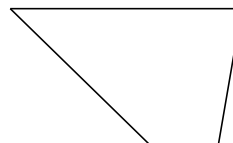
rhombus



trapezoid



square



trapezoid