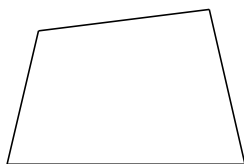
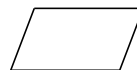




Classifying Quadrilaterals (G)

Identify each quadrilateral.



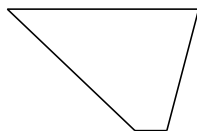


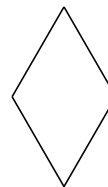










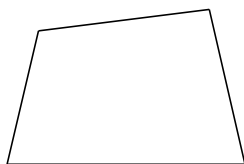






Classifying Quadrilaterals (G) Answers


Identify each quadrilateral.




quadrilateral



parallelogram



parallelogram



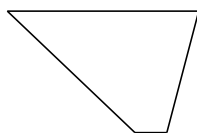
rectangle



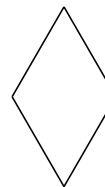
square



parallelogram



trapezoid



rhombus



parallelogram



parallelogram