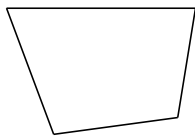
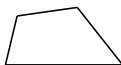


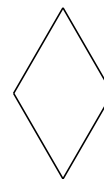
Classifying Quadrilaterals (H)

Identify each quadrilateral.







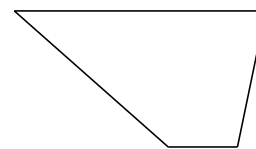










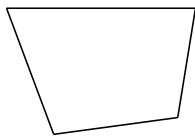






Classifying Quadrilaterals (H) Answers

Identify each quadrilateral.



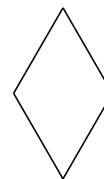
quadrilateral



rectangle




quadrilateral



rhombus



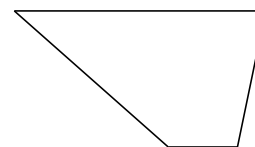
rectangle



rectangle



parallelogram



trapezoid



square



parallelogram