


# Classifying Quadrilaterals (I)

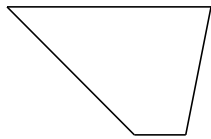
Identify each quadrilateral.



\_\_\_\_\_




\_\_\_\_\_



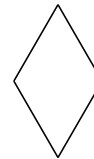
\_\_\_\_\_



\_\_\_\_\_




\_\_\_\_\_



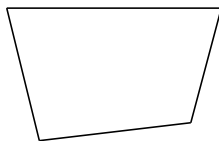
\_\_\_\_\_



\_\_\_\_\_



\_\_\_\_\_




\_\_\_\_\_



\_\_\_\_\_

# Classifying Quadrilaterals (I) Answers

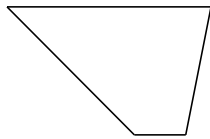
Identify each quadrilateral.



square




square



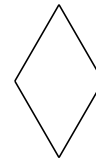
trapezoid



square




square



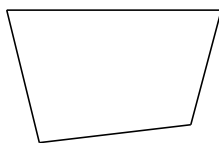
rhombus



rectangle



parallelogram



quadrilateral



rectangle