
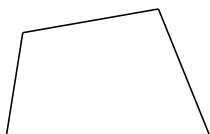


Classifying Quadrilaterals (J)

Identify each quadrilateral.



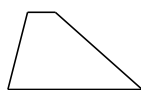


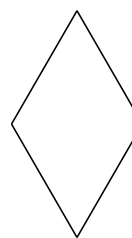


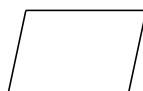












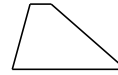


Classifying Quadrilaterals (J) Answers

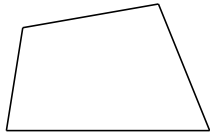
Identify each quadrilateral.



parallelogram




trapezoid




quadrilateral



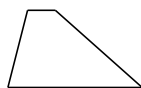
square



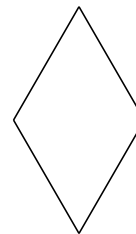
rectangle




parallelogram



trapezoid



rhombus



parallelogram



parallelogram