
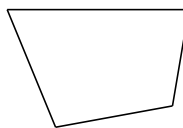


# Classifying Quadrilaterals (A)

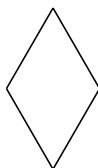
Identify each quadrilateral.



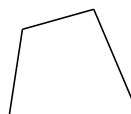
\_\_\_\_\_



\_\_\_\_\_



\_\_\_\_\_



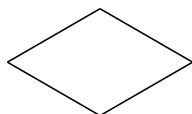
\_\_\_\_\_



\_\_\_\_\_



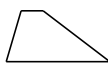
\_\_\_\_\_




\_\_\_\_\_



\_\_\_\_\_




\_\_\_\_\_



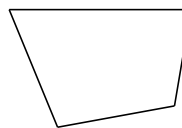
\_\_\_\_\_

# Classifying Quadrilaterals (A) Answers

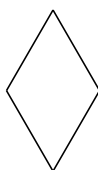
Identify each quadrilateral.



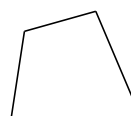
parallelogram



quadrilateral



rhombus



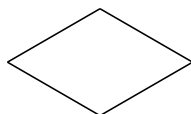
quadrilateral



square



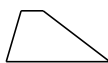
square




rhombus



quadrilateral




trapezoid




rectangle

# Classifying Quadrilaterals (B)

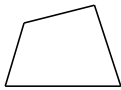
Identify each quadrilateral.



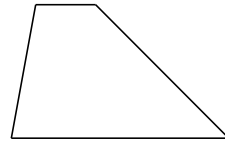
\_\_\_\_\_



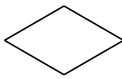
\_\_\_\_\_




\_\_\_\_\_




\_\_\_\_\_



\_\_\_\_\_



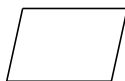
\_\_\_\_\_



\_\_\_\_\_



\_\_\_\_\_



\_\_\_\_\_




\_\_\_\_\_

## Classifying Quadrilaterals (B) Answers

Identify each quadrilateral.



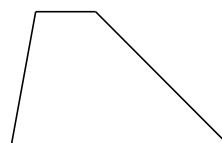
square



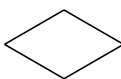
square




quadrilateral




trapezoid



rhombus



rectangle



square



square



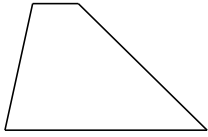
parallelogram



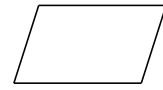
square

# Classifying Quadrilaterals (C)

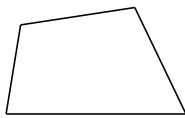
Identify each quadrilateral.



\_\_\_\_\_



\_\_\_\_\_



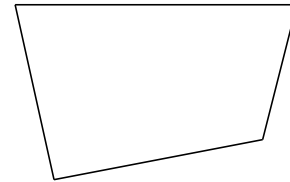
\_\_\_\_\_



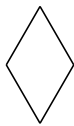
\_\_\_\_\_




\_\_\_\_\_



\_\_\_\_\_



\_\_\_\_\_



\_\_\_\_\_



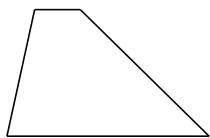
\_\_\_\_\_



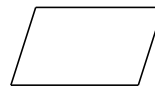
\_\_\_\_\_

## Classifying Quadrilaterals (C) Answers

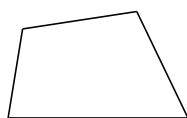
Identify each quadrilateral.



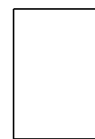
trapezoid



parallelogram



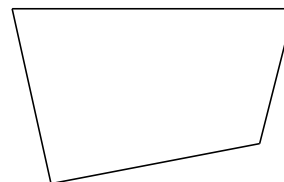
quadrilateral



rectangle



square



quadrilateral



rhombus



rectangle



rectangle



quadrilateral

# Classifying Quadrilaterals (D)

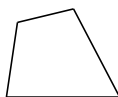
Identify each quadrilateral.



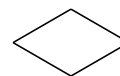
\_\_\_\_\_



\_\_\_\_\_



\_\_\_\_\_



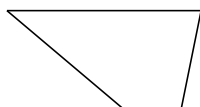
\_\_\_\_\_



\_\_\_\_\_



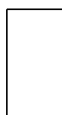
\_\_\_\_\_



\_\_\_\_\_



\_\_\_\_\_



\_\_\_\_\_




\_\_\_\_\_

## Classifying Quadrilaterals (D) Answers

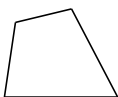
Identify each quadrilateral.



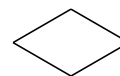
square




square




quadrilateral



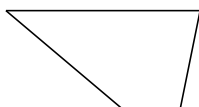
rhombus



square



rectangle



trapezoid



parallelogram



rectangle

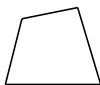


square



# Classifying Quadrilaterals (E)


Identify each quadrilateral.



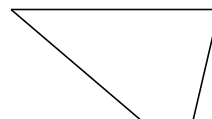
\_\_\_\_\_



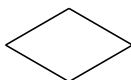
\_\_\_\_\_



\_\_\_\_\_



\_\_\_\_\_



\_\_\_\_\_



\_\_\_\_\_



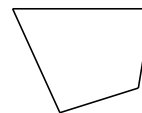
\_\_\_\_\_



\_\_\_\_\_



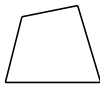
\_\_\_\_\_



\_\_\_\_\_

# Classifying Quadrilaterals (E) Answers


Identify each quadrilateral.



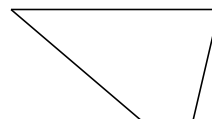
quadrilateral



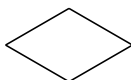
square



square



trapezoid




rhombus



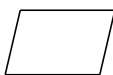
parallelogram



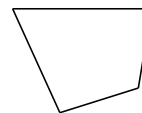
square



rectangle




parallelogram



quadrilateral

# Classifying Quadrilaterals (F)


Identify each quadrilateral.



\_\_\_\_\_




\_\_\_\_\_



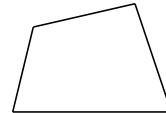
\_\_\_\_\_



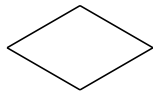
\_\_\_\_\_



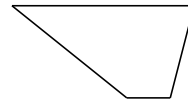
\_\_\_\_\_




\_\_\_\_\_



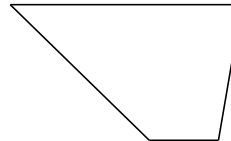
\_\_\_\_\_



\_\_\_\_\_



\_\_\_\_\_



\_\_\_\_\_

## Classifying Quadrilaterals (F) Answers


Identify each quadrilateral.



square



rectangle



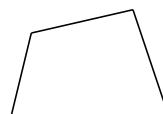
square



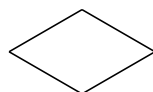
parallelogram



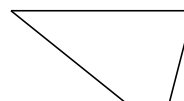
square



quadrilateral



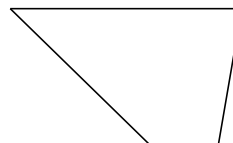
rhombus



trapezoid



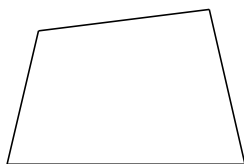
square



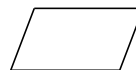
trapezoid

# Classifying Quadrilaterals (G)


Identify each quadrilateral.




\_\_\_\_\_



\_\_\_\_\_



\_\_\_\_\_



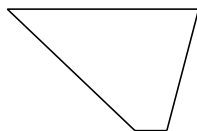
\_\_\_\_\_



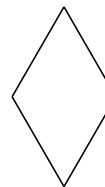
\_\_\_\_\_



\_\_\_\_\_



\_\_\_\_\_



\_\_\_\_\_



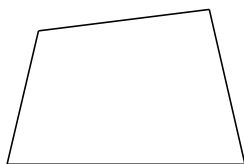
\_\_\_\_\_



\_\_\_\_\_

# Classifying Quadrilaterals (G) Answers


Identify each quadrilateral.




quadrilateral



parallelogram



parallelogram



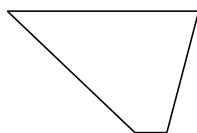
rectangle



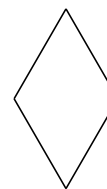
square



parallelogram



trapezoid



rhombus



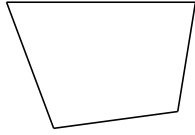
parallelogram




parallelogram

# Classifying Quadrilaterals (H)

Identify each quadrilateral.



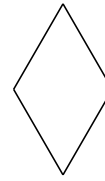
\_\_\_\_\_




\_\_\_\_\_




\_\_\_\_\_



\_\_\_\_\_



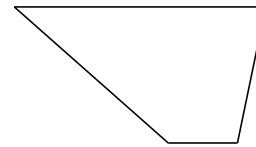
\_\_\_\_\_



\_\_\_\_\_




\_\_\_\_\_



\_\_\_\_\_



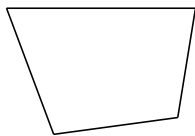
\_\_\_\_\_



\_\_\_\_\_

# Classifying Quadrilaterals (H) Answers

Identify each quadrilateral.



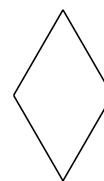
quadrilateral



rectangle




quadrilateral




rhombus



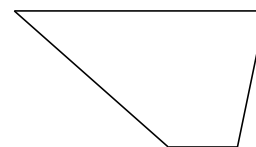
rectangle



rectangle




parallelogram



trapezoid



square




parallelogram



# Classifying Quadrilaterals (I)

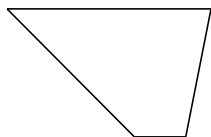
Identify each quadrilateral.



\_\_\_\_\_




\_\_\_\_\_



\_\_\_\_\_



\_\_\_\_\_




\_\_\_\_\_



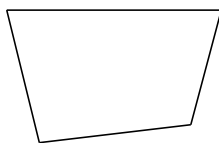
\_\_\_\_\_




\_\_\_\_\_



\_\_\_\_\_




\_\_\_\_\_



\_\_\_\_\_

# Classifying Quadrilaterals (I) Answers

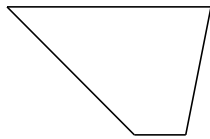
Identify each quadrilateral.



square




square



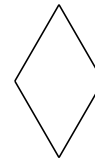
trapezoid



square




square



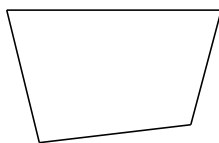
rhombus



rectangle



parallelogram



quadrilateral



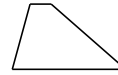
rectangle

# Classifying Quadrilaterals (J)

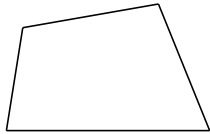
Identify each quadrilateral.



\_\_\_\_\_




\_\_\_\_\_



\_\_\_\_\_



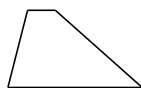
\_\_\_\_\_



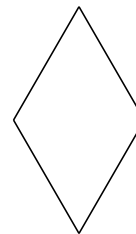
\_\_\_\_\_




\_\_\_\_\_



\_\_\_\_\_



\_\_\_\_\_



\_\_\_\_\_



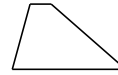
\_\_\_\_\_

# Classifying Quadrilaterals (J) Answers

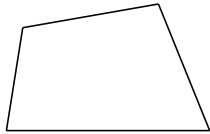
Identify each quadrilateral.



parallelogram




trapezoid




quadrilateral



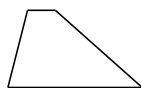
square



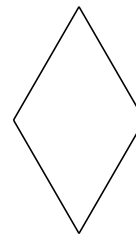
rectangle



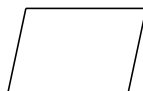
parallelogram



trapezoid



rhombus



parallelogram



parallelogram