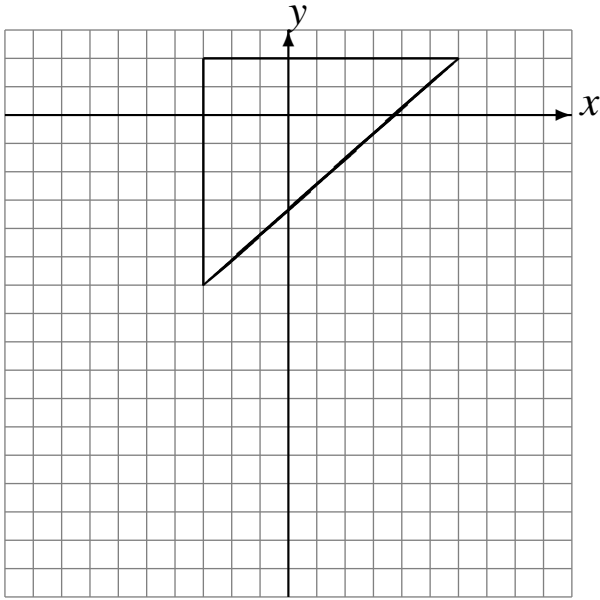


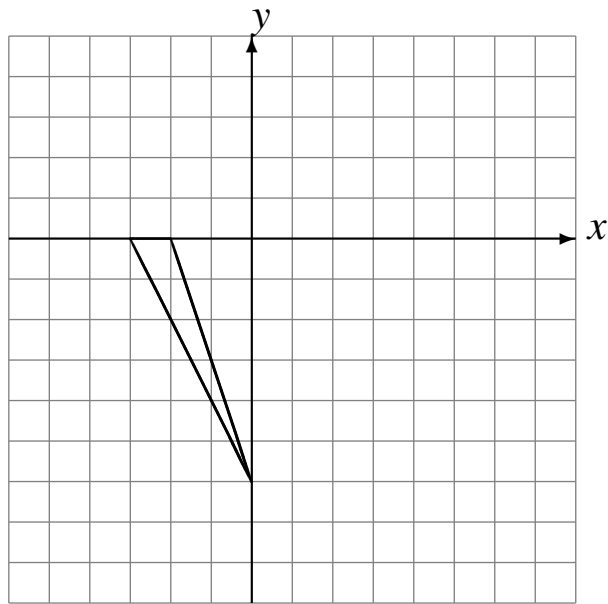
Translations (A)

Draw the intermediate and translated images.

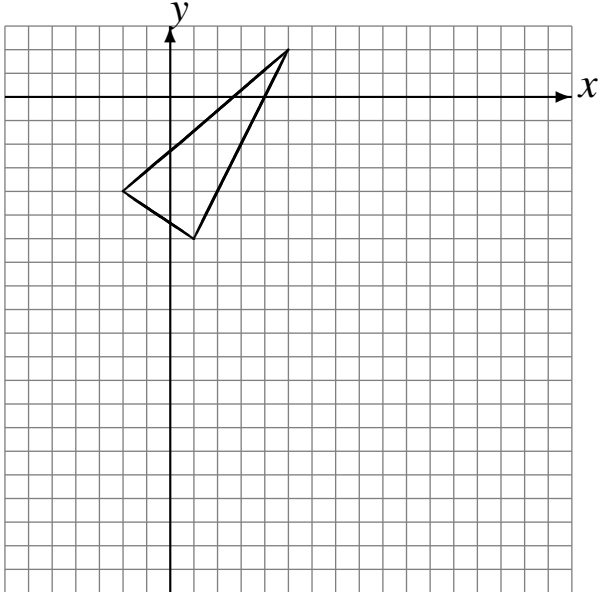
Translate by $(-3, -3)$.
Translate by $(-1, -6)$.
Translate by $(2, -1)$.



Translate by $(5, 4)$.
Translate by $(-5, -6)$.
Translate by $(2, 1)$.



Translate by $(5, -4)$.
Translate by $(1, -4)$.
Translate by $(-6, -6)$.



Translate by $(-6, 0)$.
Translate by $(1, -2)$.
Translate by $(-1, 4)$.

