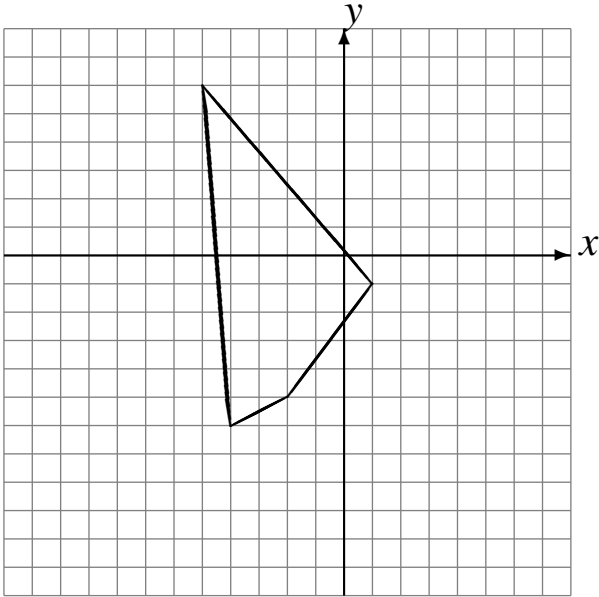


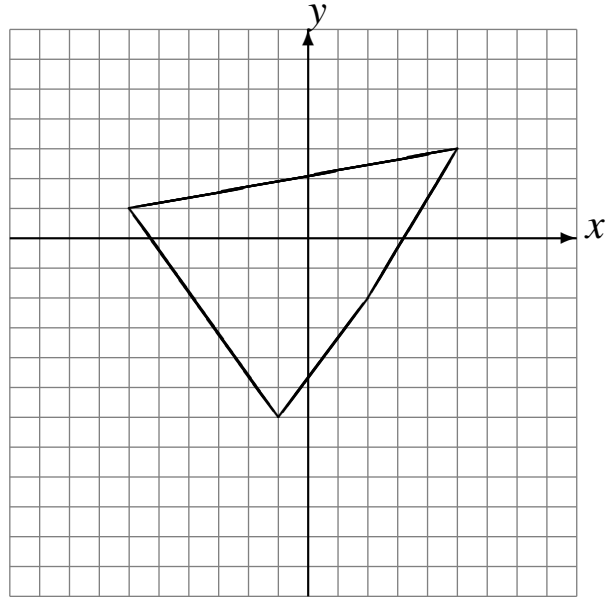
# Translations (A)

Draw the intermediate and translated images.

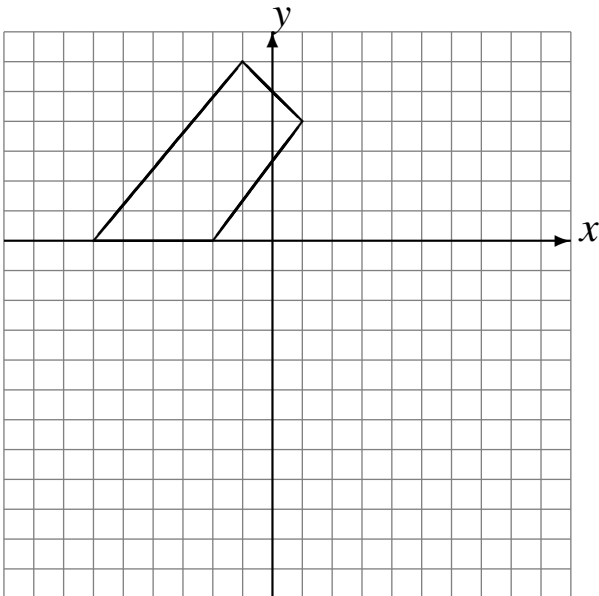
Translate by  $(-1, -5)$ .  
Translate by  $(4, 6)$ .  
Translate by  $(-6, -1)$ .



Translate by  $(-3, -4)$ .  
Translate by  $(3, 4)$ .  
Translate by  $(3, 1)$ .



Translate by  $(0, -6)$ .  
Translate by  $(4, -5)$ .  
Translate by  $(1, 6)$ .



Translate by  $(5, 0)$ .  
Translate by  $(-3, -3)$ .  
Translate by  $(-4, 1)$ .

