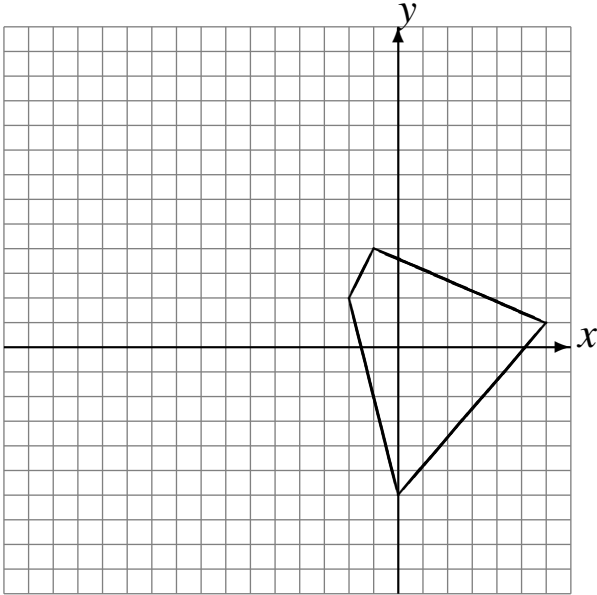


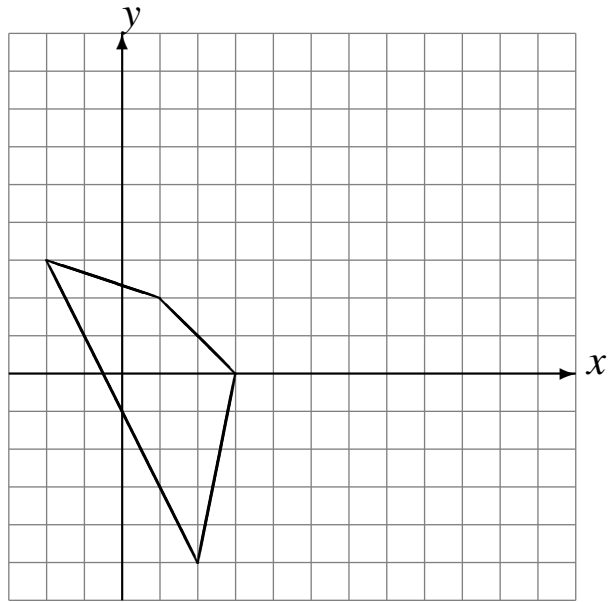
# Translations (B)

Draw the intermediate and translated images.

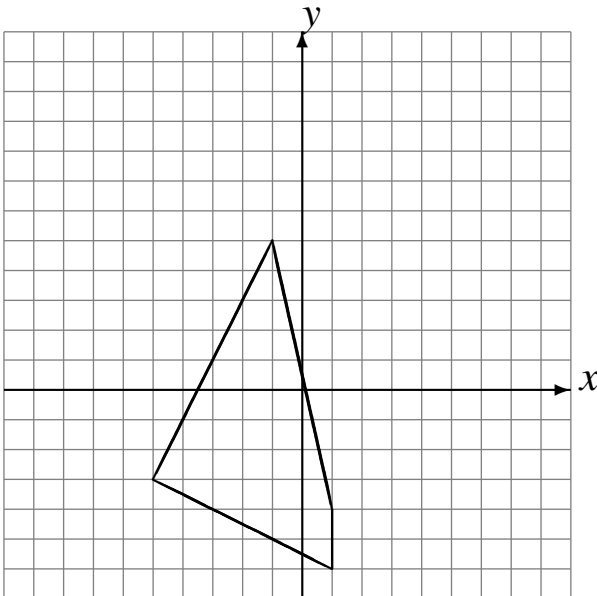
Translate by  $(-6, 4)$ .  
Translate by  $(-2, 0)$ .  
Translate by  $(-5, -2)$ .



Translate by  $(6, 5)$ .  
Translate by  $(-2, -2)$ .  
Translate by  $(4, -1)$ .



Translate by  $(0, 6)$ .  
Translate by  $(3, 0)$ .  
Translate by  $(-4, -6)$ .



Translate by  $(1, 1)$ .  
Translate by  $(1, -4)$ .  
Translate by  $(2, -5)$ .

