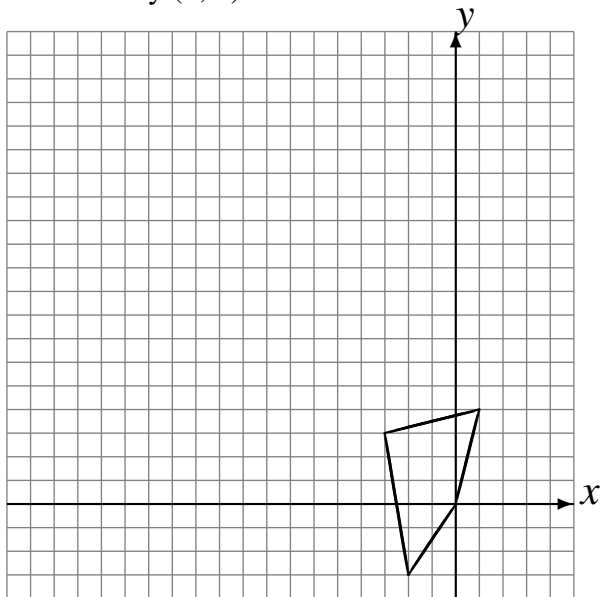


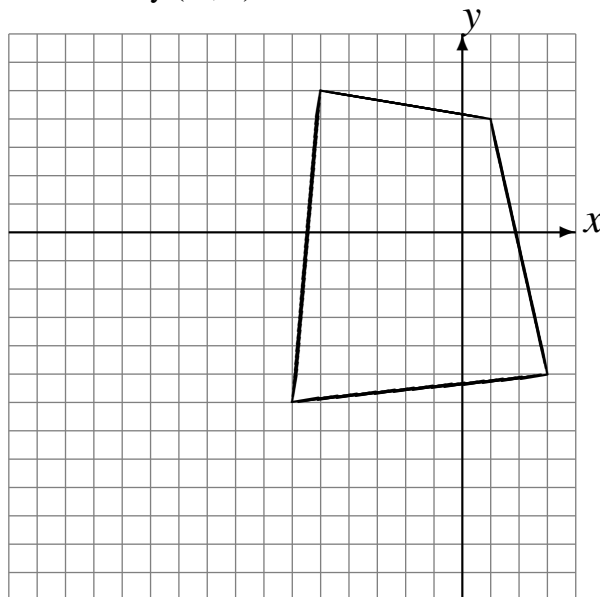
Translations (I)

Draw the intermediate and translated images.

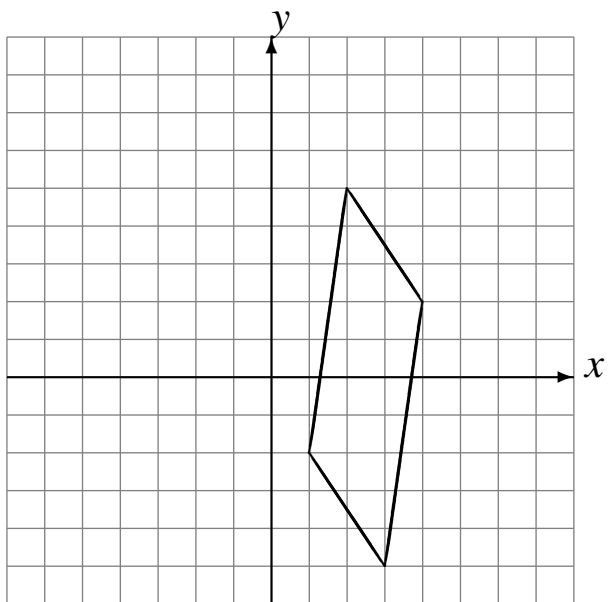
Translate by $(-6, 6)$.
Translate by $(-6, 6)$.
Translate by $(0, 3)$.



Translate by $(-3, -6)$.
Translate by $(-5, 1)$.
Translate by $(-1, 6)$.



Translate by $(1, 0)$.
Translate by $(-6, 3)$.
Translate by $(6, 0)$.



Translate by $(-3, 3)$.
Translate by $(6, 5)$.
Translate by $(1, -6)$.

