

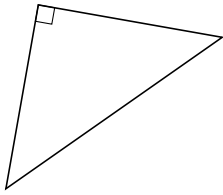
Classifying Triangles by Angle Properties (A)

Name: _____

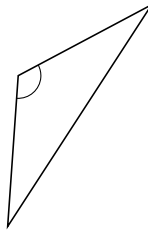
Date: _____

Classify each triangle using its angle properties.

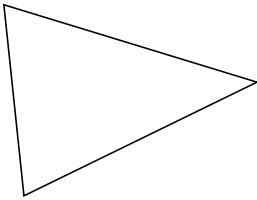
1.



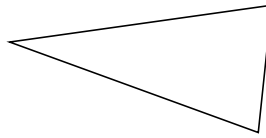
2.



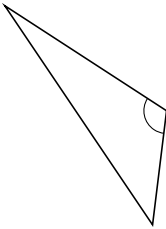
3.



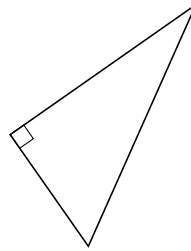
4.



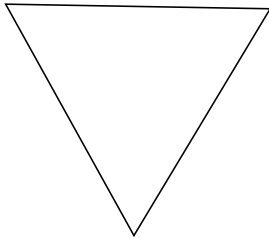
5.



6.



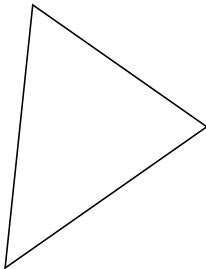
7.



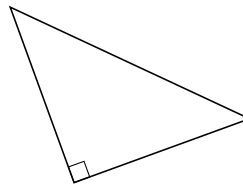
8.



9.



10.



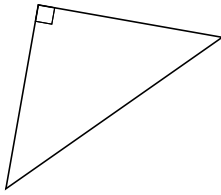
Classifying Triangles by Angle Properties (A) Answers

Name: _____

Date: _____

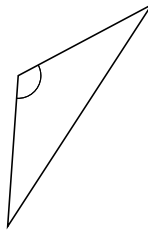
Classify each triangle using its angle properties.

1.



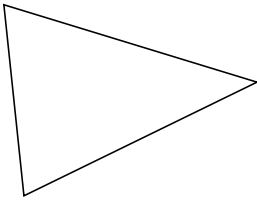
right

2.



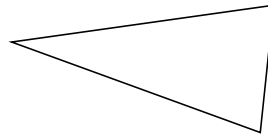
obtuse

3.



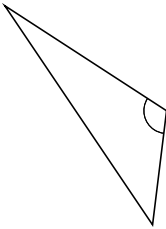
acute

4.



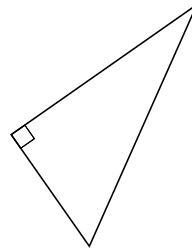
acute

5.



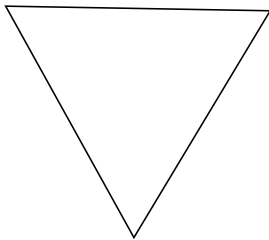
obtuse

6.



right

7.



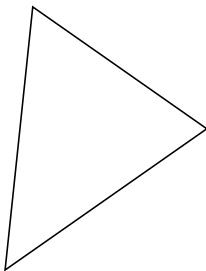
acute

8.



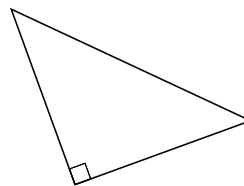
obtuse

9.



acute

10.



right