

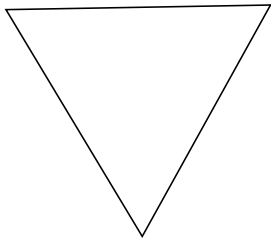
Classifying Triangles by Angle Properties (C)

Name: _____

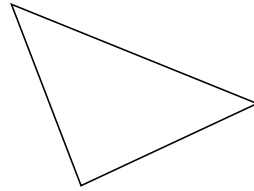
Date: _____

Classify each triangle using its angle properties.

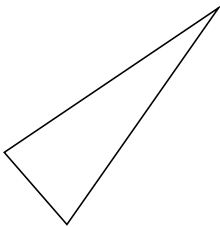
1.



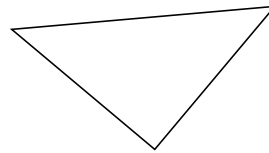
2.



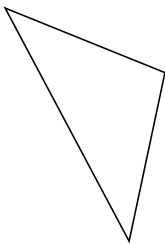
3.



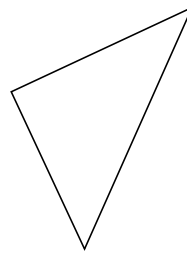
4.



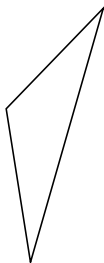
5.




6.



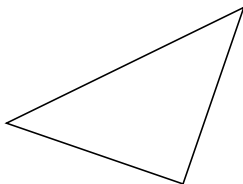
7.



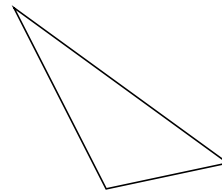
8.



9.



10.



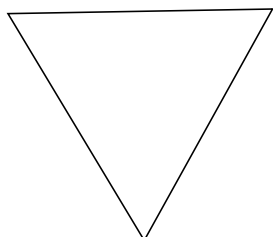
Classifying Triangles by Angle Properties (C) Answers

Name: _____

Date: _____

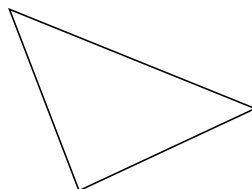
Classify each triangle using its angle properties.

1.



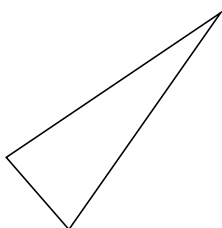
acute

2.



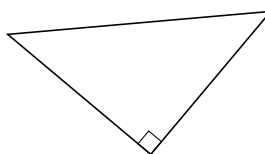
acute

3.



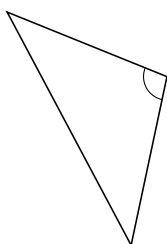
acute

4.



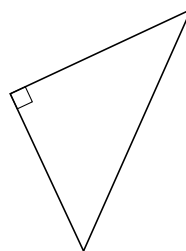
right

5.



obtuse

6.




right

7.



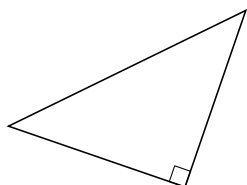
obtuse

8.



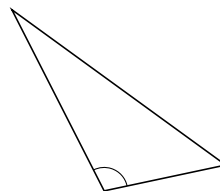
acute

9.



right

10.



obtuse