

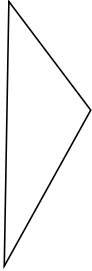
# Classifying Triangles by Angle Properties (D)

Name: \_\_\_\_\_

Date: \_\_\_\_\_

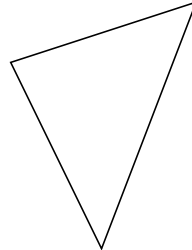
Classify each triangle using its angle properties.

1.



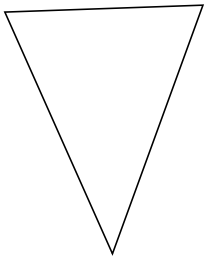
\_\_\_\_\_

2.



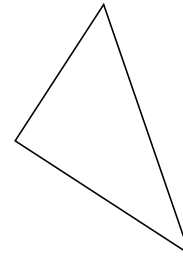
\_\_\_\_\_

3.




\_\_\_\_\_

4.



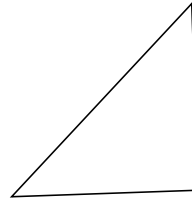
\_\_\_\_\_

5.



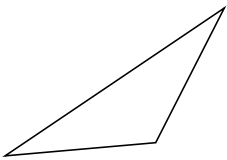
\_\_\_\_\_

6.



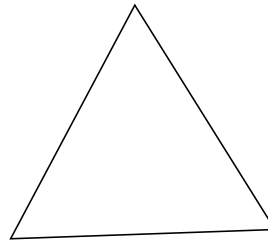
\_\_\_\_\_

7.



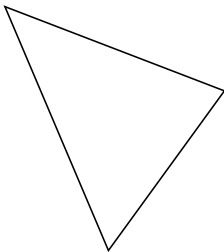
\_\_\_\_\_

8.



\_\_\_\_\_

9.



\_\_\_\_\_

10.



\_\_\_\_\_

# Classifying Triangles by Angle Properties (D) Answers

Name: \_\_\_\_\_

Date: \_\_\_\_\_

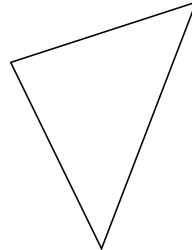
Classify each triangle using its angle properties.

1.



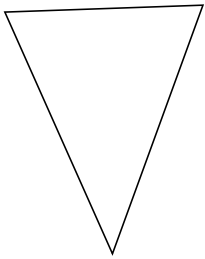
obtuse

2.



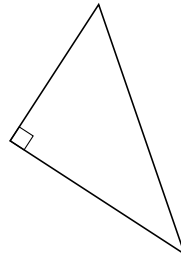
acute

3.




acute

4.



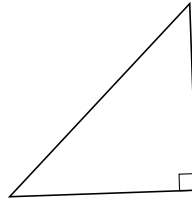
right

5.



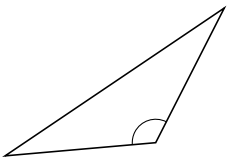
acute

6.



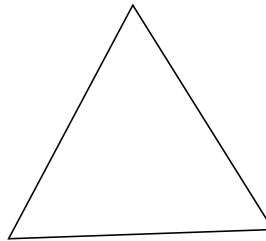
right

7.



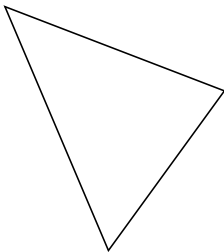
obtuse

8.



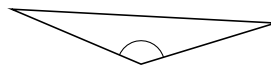
acute

9.



acute

10.



obtuse