

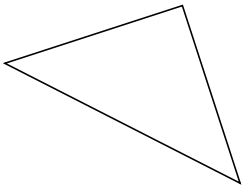
Classifying Triangles by Angle Properties (F)

Name: _____

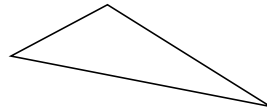
Date: _____

Classify each triangle using its angle properties.

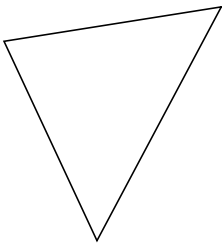
1.



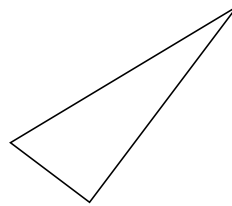
2.



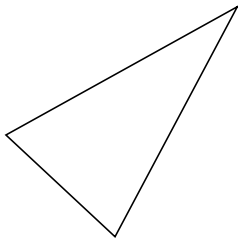
3.




4.



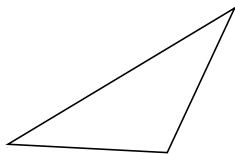
5.



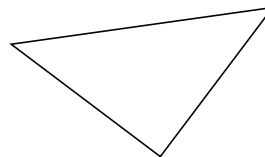
6.



7.



8.



9.



10.

