

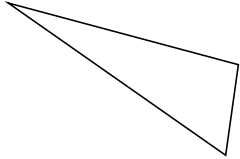
Classifying Triangles by Angle Properties (G)

Name: _____

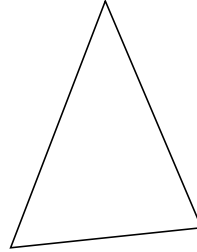
Date: _____

Classify each triangle using its angle properties.

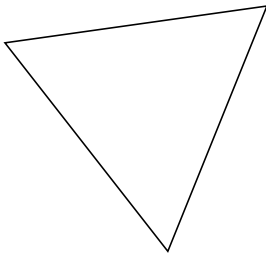
1.



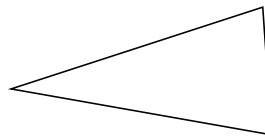
2.



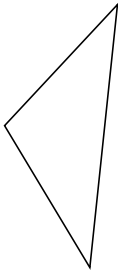
3.



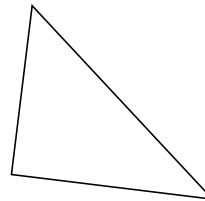
4.



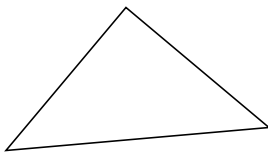
5.



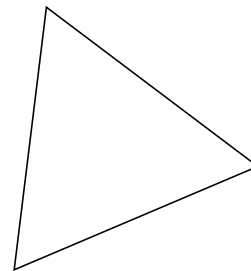
6.



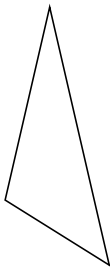
7.



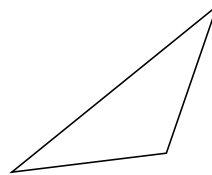
8.



9.



10.



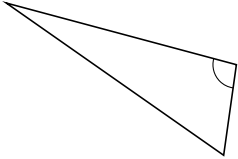
Classifying Triangles by Angle Properties (G) Answers

Name: _____

Date: _____

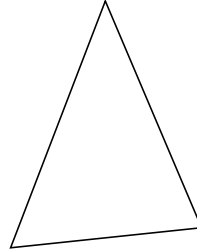
Classify each triangle using its angle properties.

1.



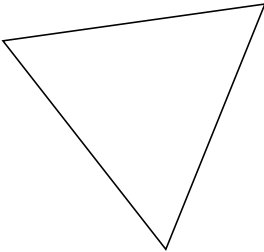
obtuse

2.



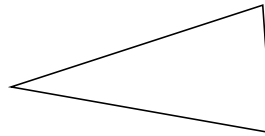
acute

3.



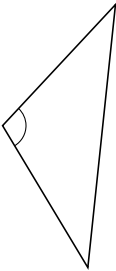
acute

4.



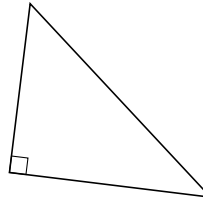
acute

5.



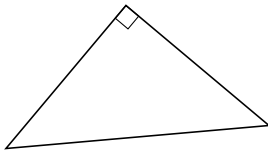
obtuse

6.



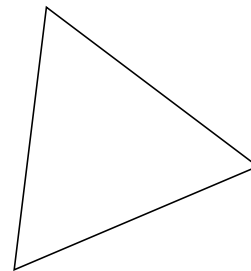
right

7.



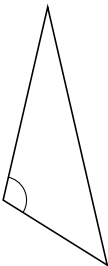
right

8.



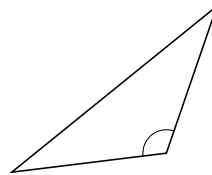
acute

9.



obtuse

10.



obtuse