

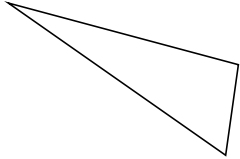
# Classifying Triangles by Angle Properties (G)

Name: \_\_\_\_\_

Date: \_\_\_\_\_

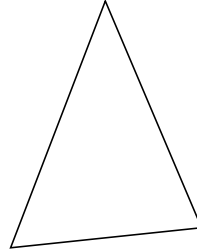
Classify each triangle using its angle properties.

1.



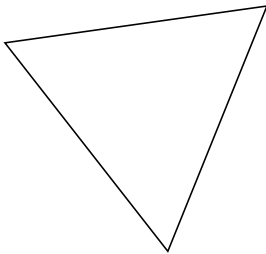
\_\_\_\_\_

2.



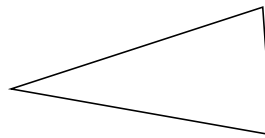
\_\_\_\_\_

3.



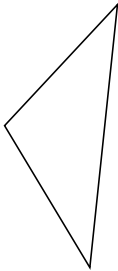
\_\_\_\_\_

4.



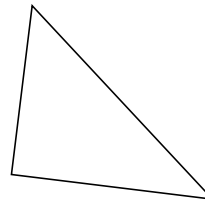
\_\_\_\_\_

5.



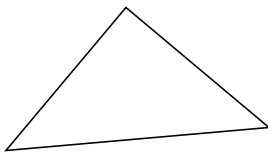
\_\_\_\_\_

6.



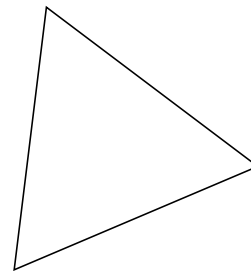
\_\_\_\_\_

7.



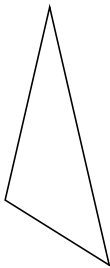
\_\_\_\_\_

8.



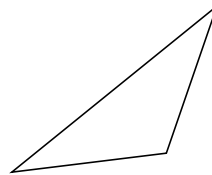
\_\_\_\_\_

9.



\_\_\_\_\_

10.



\_\_\_\_\_