

Classifying Triangles by Angle Properties (I)

Name: _____

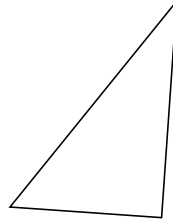
Date: _____

Classify each triangle using its angle properties.

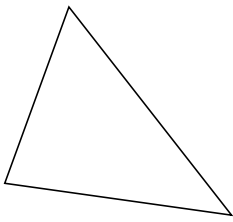
1.



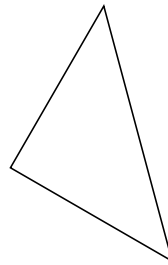
2.




3.



4.



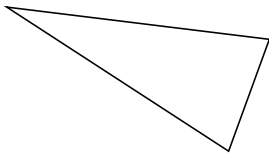
5.



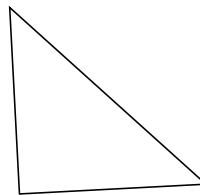
6.



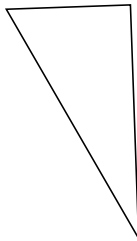
7.



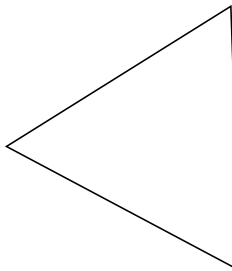
8.



9.



10.



Classifying Triangles by Angle Properties (I) Answers

Name: _____

Date: _____

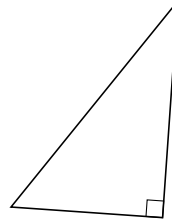
Classify each triangle using its angle properties.

1.



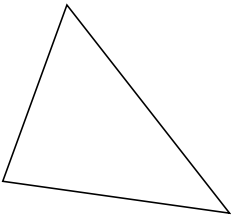
obtuse

2.



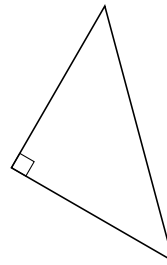
right

3.




acute

4.



right

5.



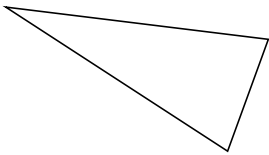
acute

6.



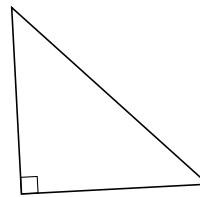
obtuse

7.



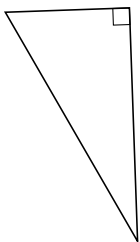
acute

8.



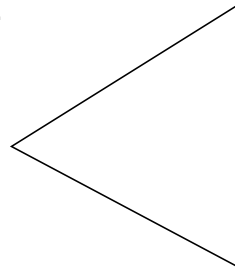
right

9.



right

10.



acute