

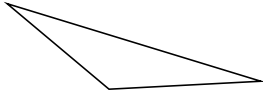
Classifying Triangles by Angle Properties (J)

Name: _____

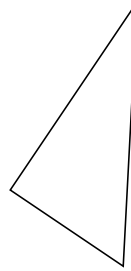
Date: _____

Classify each triangle using its angle properties.

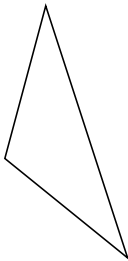
1.



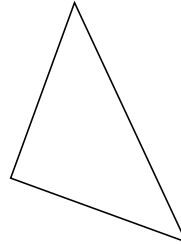
2.



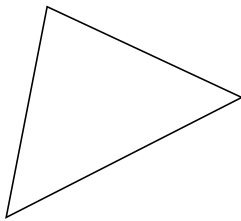
3.



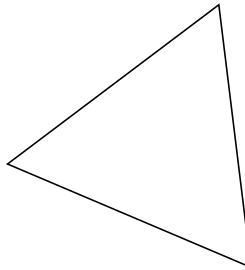
4.



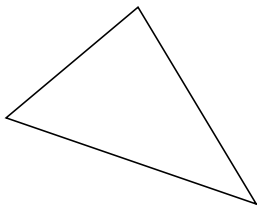
5.



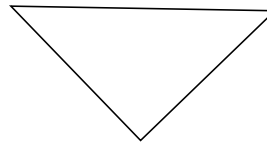
6.



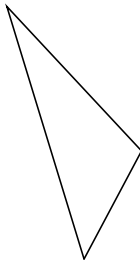
7.



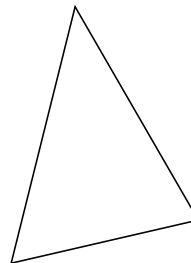
8.



9.



10.



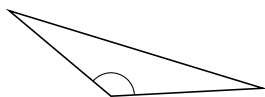
Classifying Triangles by Angle Properties (J) Answers

Name: _____

Date: _____

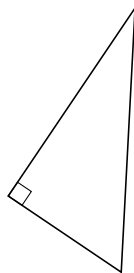
Classify each triangle using its angle properties.

1.



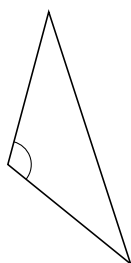
obtuse

2.



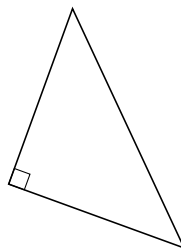
right

3.



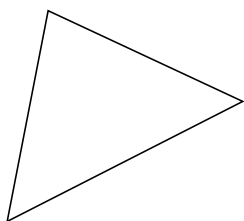
obtuse

4.



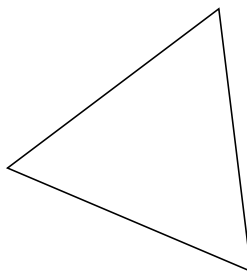
right

5.



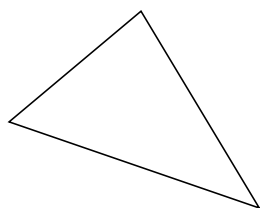
acute

6.



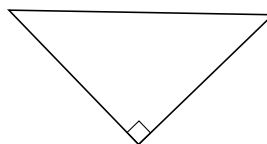
acute

7.



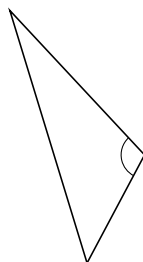
acute

8.



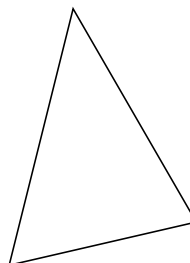
right

9.



obtuse

10.



acute