

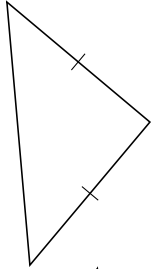
Classifying Triangles by Side Properties (A)

Name: _____

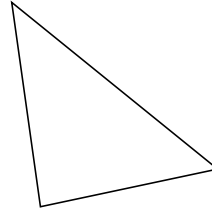
Date: _____

Classify each triangle using its side properties.

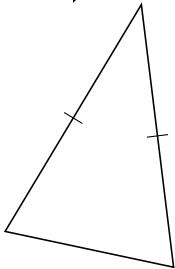
1.



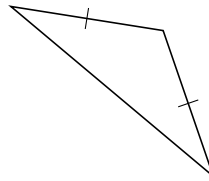
2.



3.



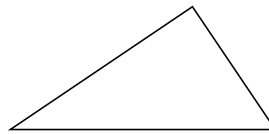
4.



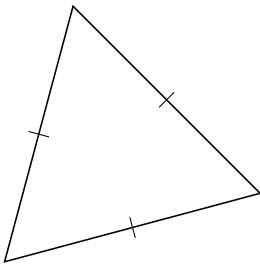
5.



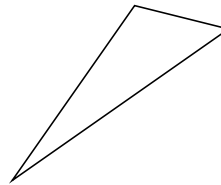
6.



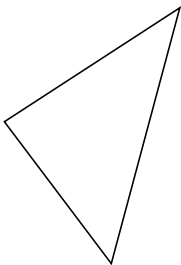
7.



8.



9.



10.



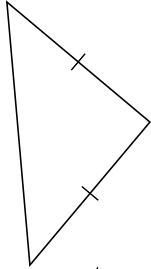
Classifying Triangles by Side Properties (A) Answers

Name: _____

Date: _____

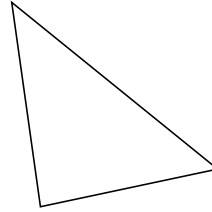
Classify each triangle using its side properties.

1.



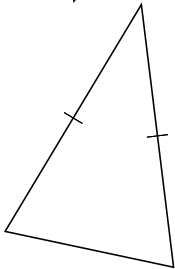
isosceles

2.



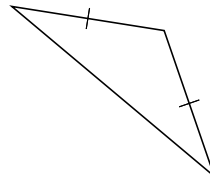
scalene

3.



isosceles

4.



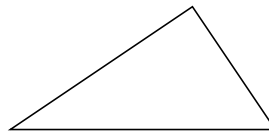
isosceles

5.



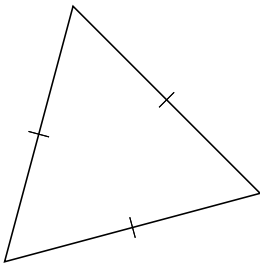
scalene

6.



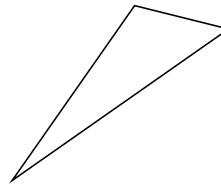
scalene

7.



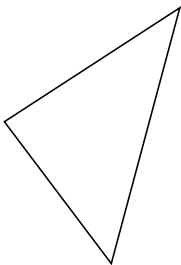
equilateral

8.



scalene

9.



scalene

10.



isosceles