

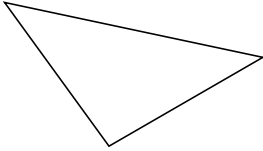
Classifying Triangles by Side Properties (C)

Name: _____

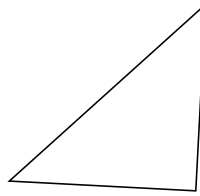
Date: _____

Classify each triangle using its side properties.

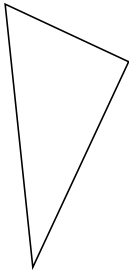
1.



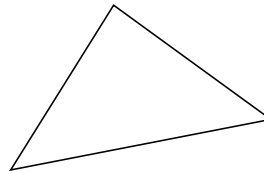
2.



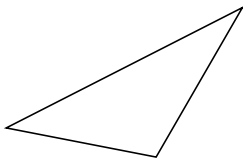
3.



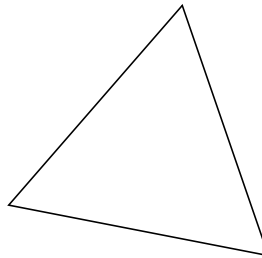
4.



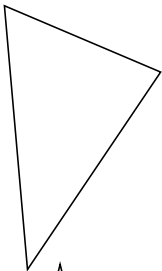
5.



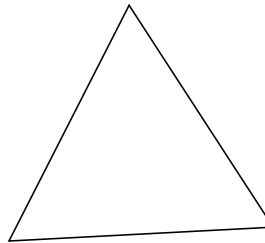
6.



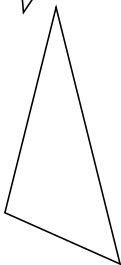
7.



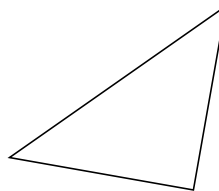
8.



9.



10.



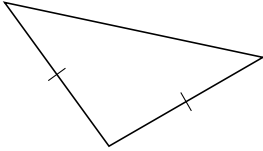
Classifying Triangles by Side Properties (C) Answers

Name: _____

Date: _____

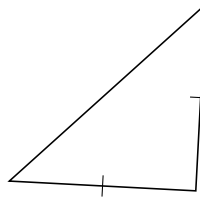
Classify each triangle using its side properties.

1.



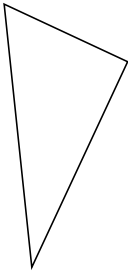
isosceles

2.



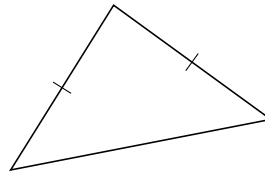
isosceles

3.



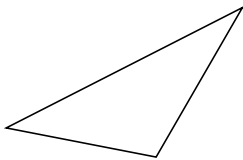
scalene

4.



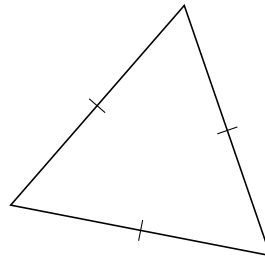
isosceles

5.



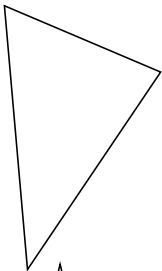
scalene

6.



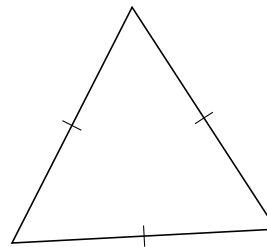
equilateral

7.



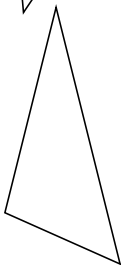
scalene

8.



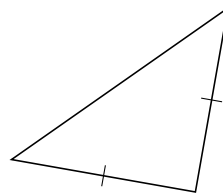
equilateral

9.



scalene

10.



isosceles