

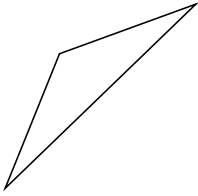
Classifying Triangles by Side Properties (E)

Name: _____


Date: _____

Classify each triangle using its side properties.

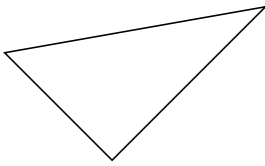
1.



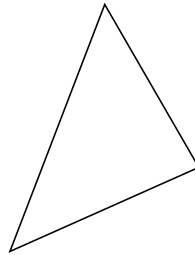
2.



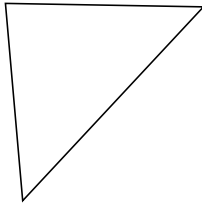
3.



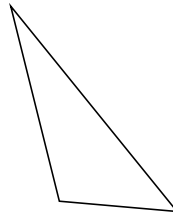
4.



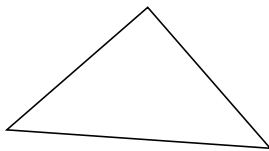
5.



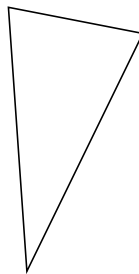
6.



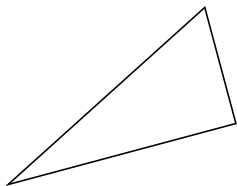
7.



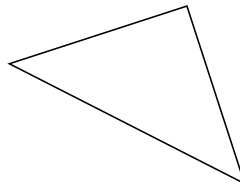
8.



9.



10.



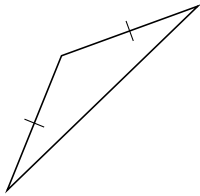
Classifying Triangles by Side Properties (E) Answers

Name: _____

Date: _____

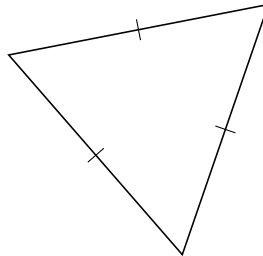
Classify each triangle using its side properties.

1.



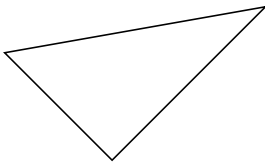
isosceles

2.



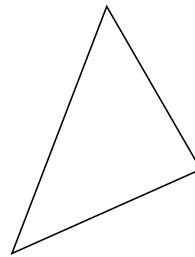
equilateral

3.



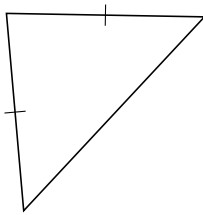
scalene

4.



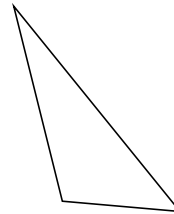
scalene

5.



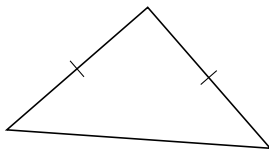
isosceles

6.



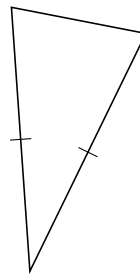
scalene

7.



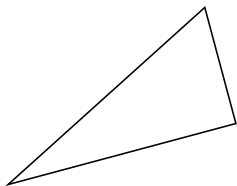
isosceles

8.



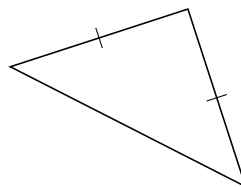
isosceles

9.



scalene

10.



isosceles