

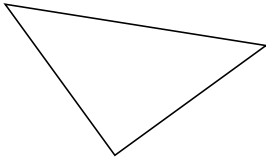
Classifying Triangles by Side Properties (G)

Name: _____

Date: _____

Classify each triangle using its side properties.

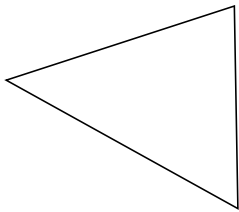
1.



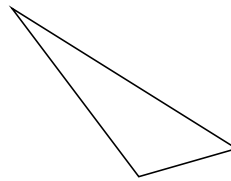
2.



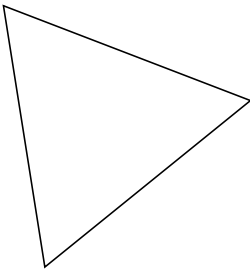
3.



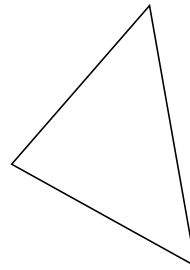
4.



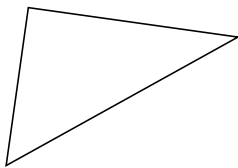
5.



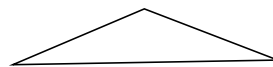
6.



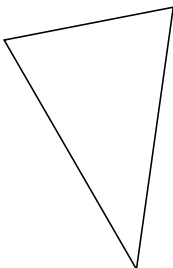
7.



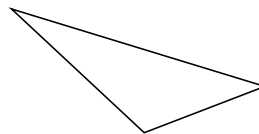
8.



9.



10.



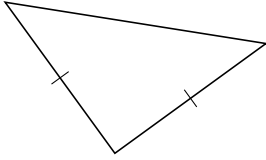
Classifying Triangles by Side Properties (G) Answers

Name: _____

Date: _____

Classify each triangle using its side properties.

1.



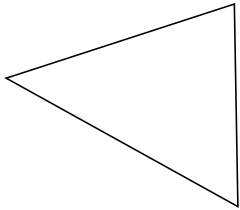
isosceles

2.



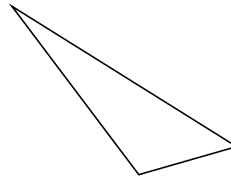
isosceles

3.



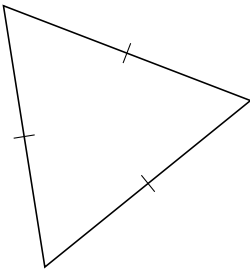
scalene

4.



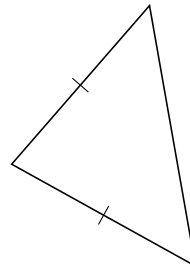
scalene

5.



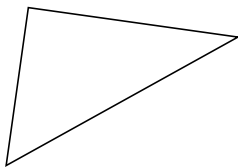
equilateral

6.



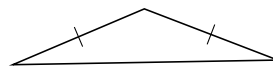
isosceles

7.



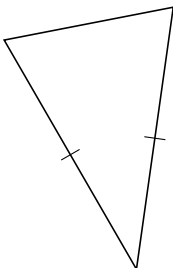
scalene

8.



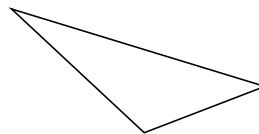
isosceles

9.



isosceles

10.



scalene