

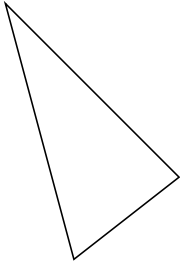
Classifying Triangles by Side Properties (J)

Name: _____

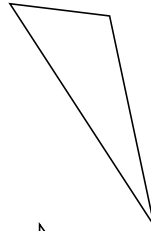
Date: _____

Classify each triangle using its side properties.

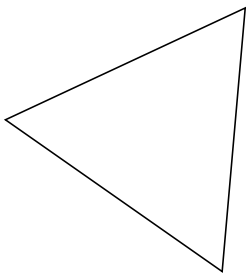
1.



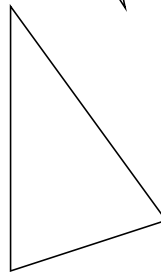
2.



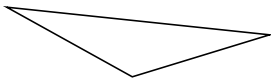
3.



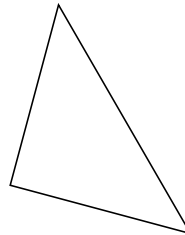
4.



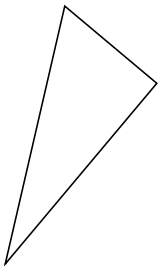
5.



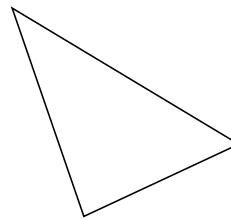
6.



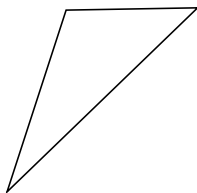
7.



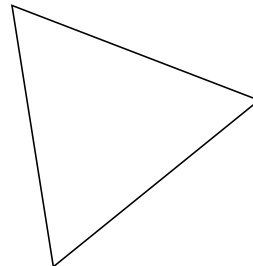
8.



9.



10.



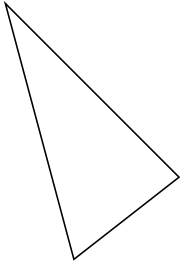
Classifying Triangles by Side Properties (J) Answers

Name: _____

Date: _____

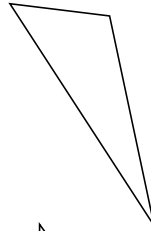
Classify each triangle using its side properties.

1.



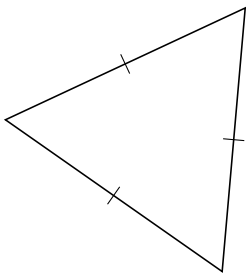
scalene

2.



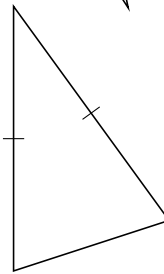
scalene

3.



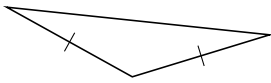
equilateral

4.



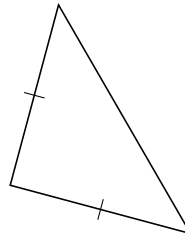
isosceles

5.



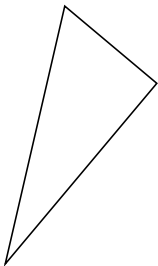
isosceles

6.



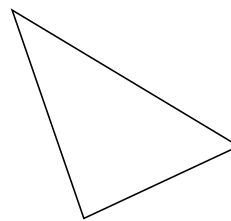
isosceles

7.



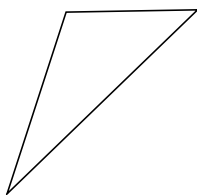
scalene

8.



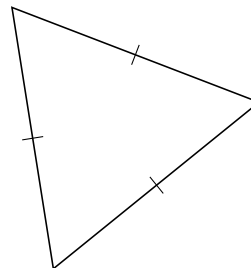
scalene

9.



scalene

10.



equilateral