

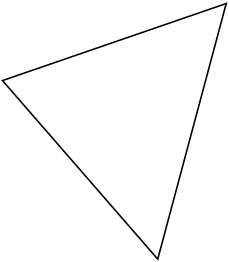
# Classifying Triangles by Side Properties (A)

Name: \_\_\_\_\_

Date: \_\_\_\_\_

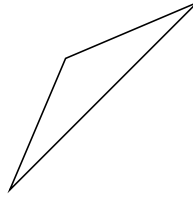
Classify each triangle using its side properties.

1.



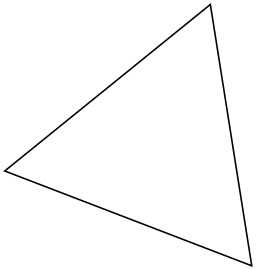
\_\_\_\_\_

2.



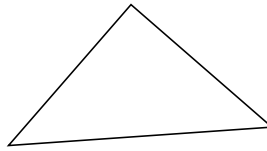
\_\_\_\_\_

3.



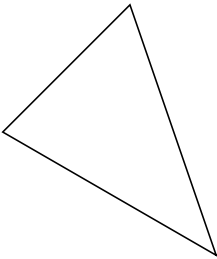
\_\_\_\_\_

4.



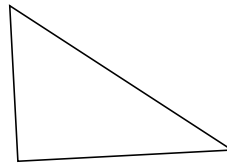
\_\_\_\_\_

5.



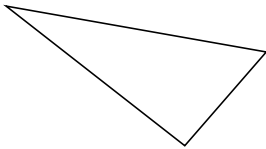
\_\_\_\_\_

6.



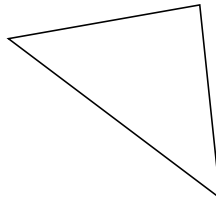
\_\_\_\_\_

7.



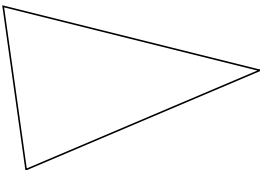
\_\_\_\_\_

8.



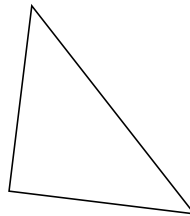
\_\_\_\_\_

9.



\_\_\_\_\_

10.



\_\_\_\_\_

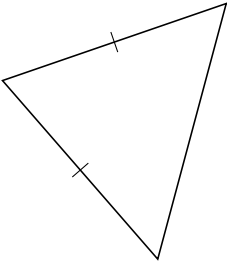
# Classifying Triangles by Side Properties (A) Answers

Name: \_\_\_\_\_

Date: \_\_\_\_\_

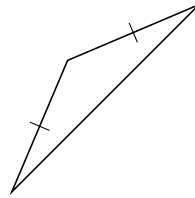
Classify each triangle using its side properties.

1.



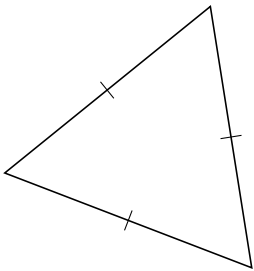
isosceles

2.



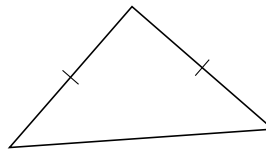
isosceles

3.



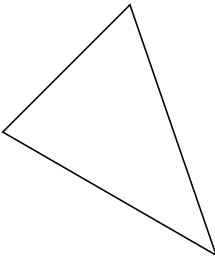
equilateral

4.



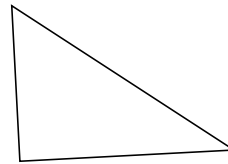
isosceles

5.



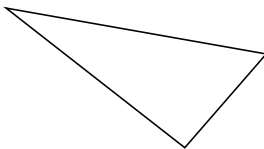
scalene

6.



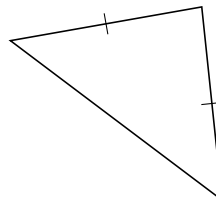
scalene

7.



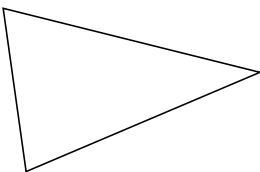
scalene

8.



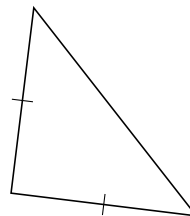
isosceles

9.



scalene

10.



isosceles

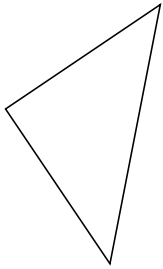
# Classifying Triangles by Side Properties (B)

Name: \_\_\_\_\_

Date: \_\_\_\_\_

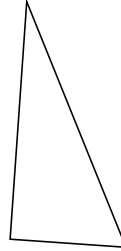
Classify each triangle using its side properties.

1.



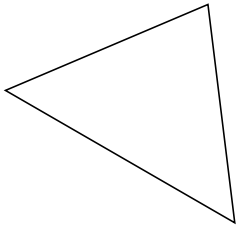
\_\_\_\_\_

2.



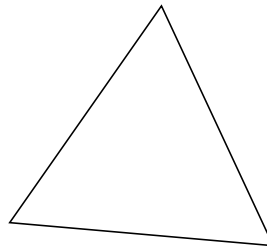
\_\_\_\_\_

3.



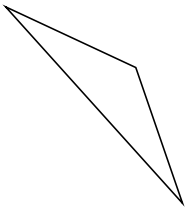
\_\_\_\_\_

4.



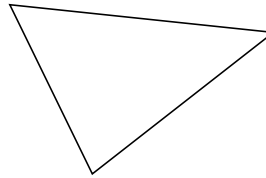
\_\_\_\_\_

5.



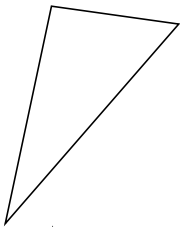
\_\_\_\_\_

6.



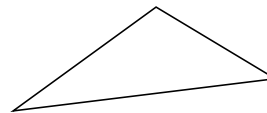
\_\_\_\_\_

7.



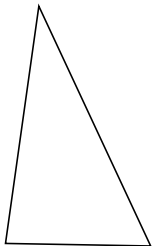
\_\_\_\_\_

8.



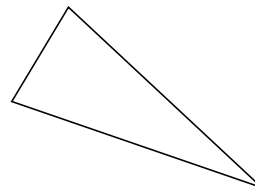
\_\_\_\_\_

9.



\_\_\_\_\_

10.



\_\_\_\_\_

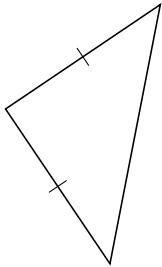
# Classifying Triangles by Side Properties (B) Answers

Name: \_\_\_\_\_

Date: \_\_\_\_\_

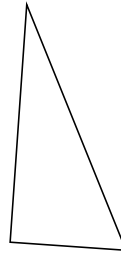
Classify each triangle using its side properties.

1.



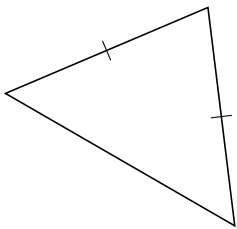
isosceles

2.



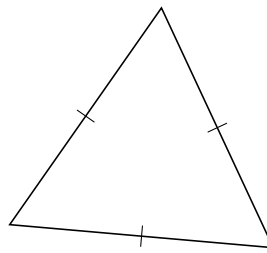
scalene

3.



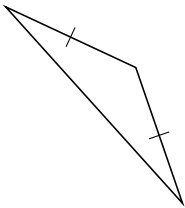
isosceles

4.



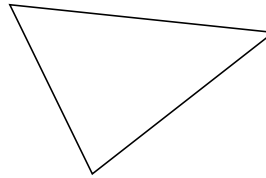
equilateral

5.



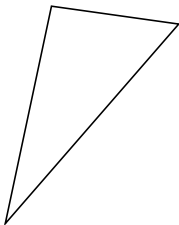
isosceles

6.



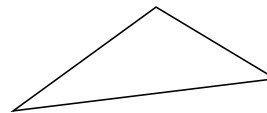
scalene

7.



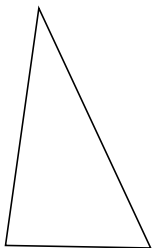
scalene

8.



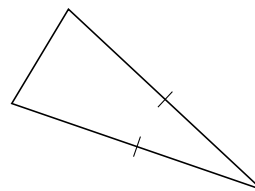
scalene

9.



scalene

10.



isosceles

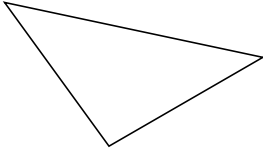
# Classifying Triangles by Side Properties (C)

Name: \_\_\_\_\_

Date: \_\_\_\_\_

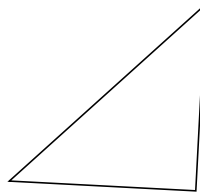
Classify each triangle using its side properties.

1.



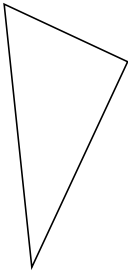
\_\_\_\_\_

2.



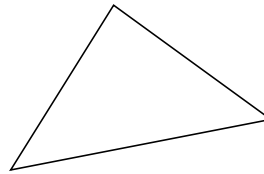
\_\_\_\_\_

3.



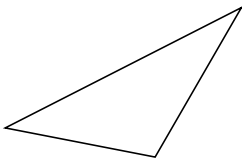
\_\_\_\_\_

4.



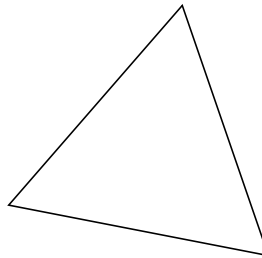
\_\_\_\_\_

5.



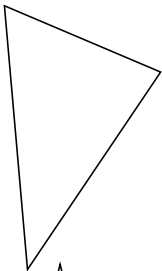
\_\_\_\_\_

6.



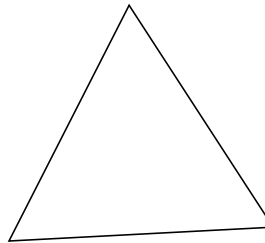
\_\_\_\_\_

7.



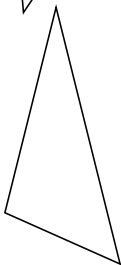
\_\_\_\_\_

8.



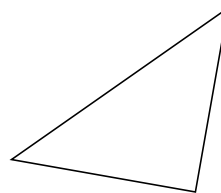
\_\_\_\_\_

9.



\_\_\_\_\_

10.



\_\_\_\_\_

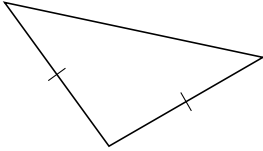
# Classifying Triangles by Side Properties (C) Answers

Name: \_\_\_\_\_

Date: \_\_\_\_\_

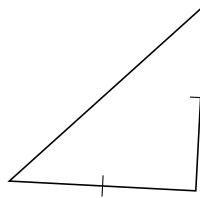
Classify each triangle using its side properties.

1.



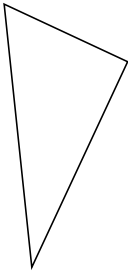
isosceles

2.



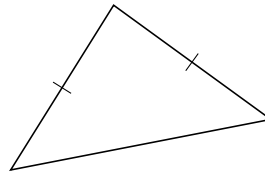
isosceles

3.



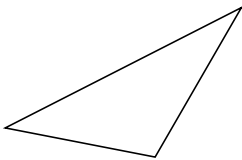
scalene

4.



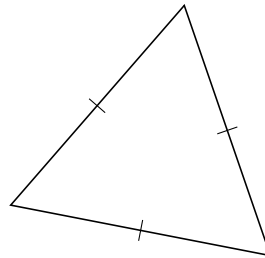
isosceles

5.



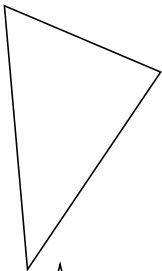
scalene

6.



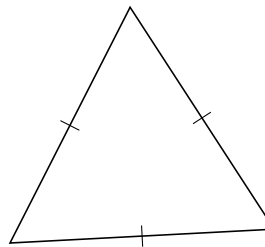
equilateral

7.



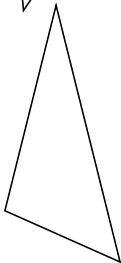
scalene

8.



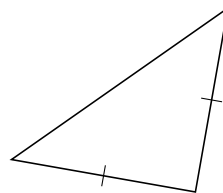
equilateral

9.



scalene

10.



isosceles

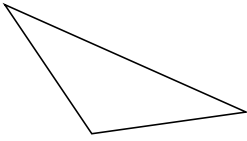
# Classifying Triangles by Side Properties (D)

Name: \_\_\_\_\_

Date: \_\_\_\_\_

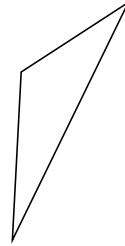
Classify each triangle using its side properties.

1.



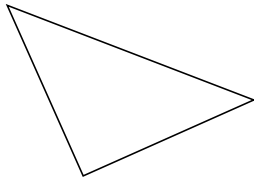
\_\_\_\_\_

2.



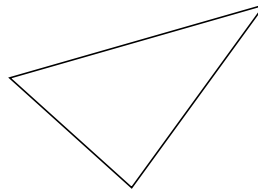
\_\_\_\_\_

3.




\_\_\_\_\_

4.



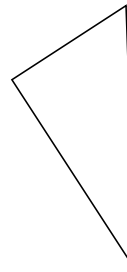
\_\_\_\_\_

5.



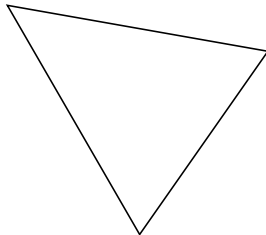
\_\_\_\_\_

6.



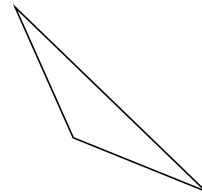
\_\_\_\_\_

7.



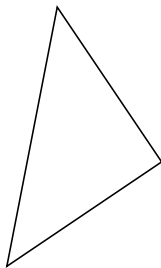
\_\_\_\_\_

8.



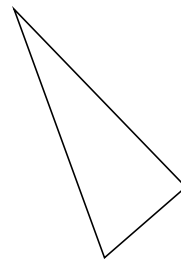
\_\_\_\_\_

9.



\_\_\_\_\_

10.



\_\_\_\_\_

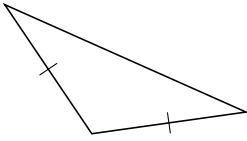
# Classifying Triangles by Side Properties (D) Answers

Name: \_\_\_\_\_

Date: \_\_\_\_\_

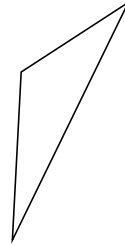
Classify each triangle using its side properties.

1.



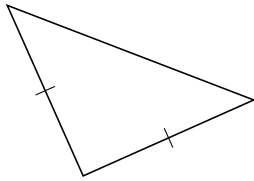
isosceles

2.



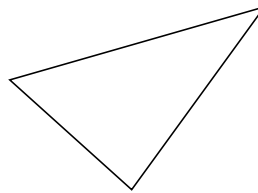
scalene

3.



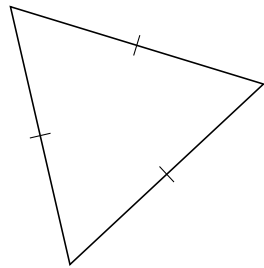
isosceles

4.



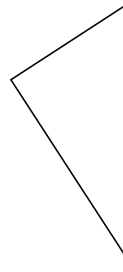
scalene

5.



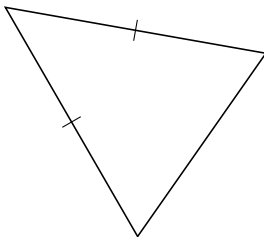
equilateral

6.



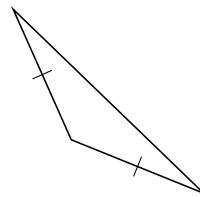
scalene

7.



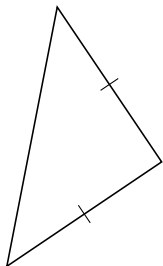
isosceles

8.



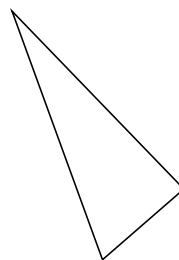
isosceles

9.



isosceles

10.



scalene



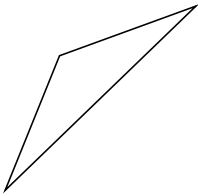
# Classifying Triangles by Side Properties (E)

Name: \_\_\_\_\_

Date: \_\_\_\_\_

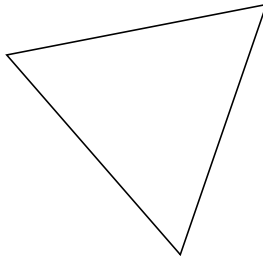
Classify each triangle using its side properties.

1.



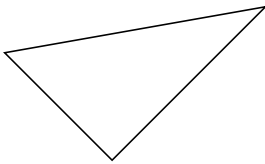
\_\_\_\_\_

2.



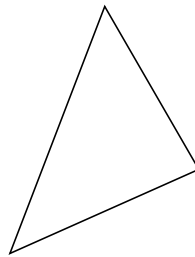
\_\_\_\_\_

3.



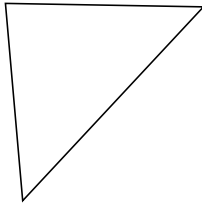
\_\_\_\_\_

4.



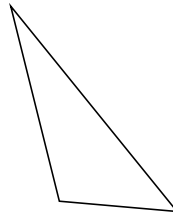
\_\_\_\_\_

5.



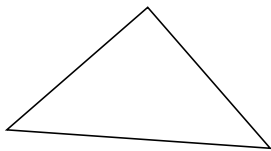
\_\_\_\_\_

6.



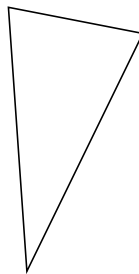
\_\_\_\_\_

7.



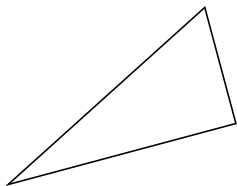
\_\_\_\_\_

8.



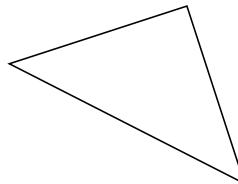
\_\_\_\_\_

9.



\_\_\_\_\_

10.



\_\_\_\_\_

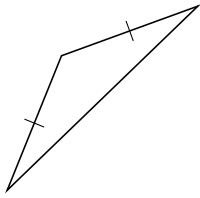
# Classifying Triangles by Side Properties (E) Answers

Name: \_\_\_\_\_

Date: \_\_\_\_\_

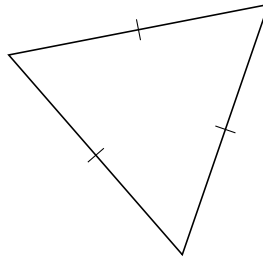
Classify each triangle using its side properties.

1.



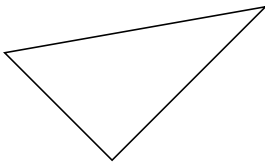
isosceles

2.



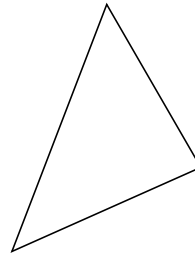
equilateral

3.



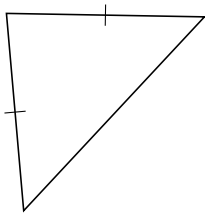
scalene

4.



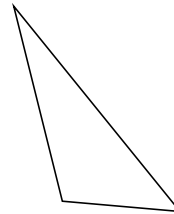
scalene

5.



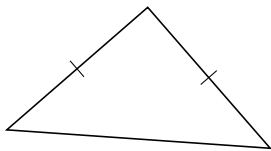
isosceles

6.



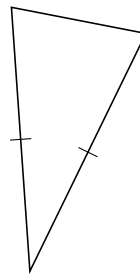
scalene

7.



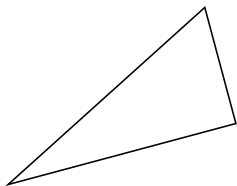
isosceles

8.



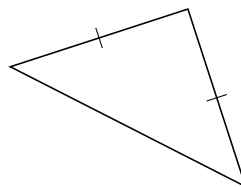
isosceles

9.



scalene

10.



isosceles

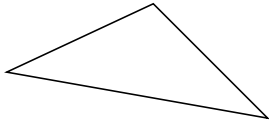
# Classifying Triangles by Side Properties (F)

Name: \_\_\_\_\_

Date: \_\_\_\_\_

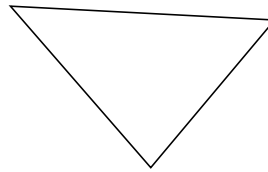
Classify each triangle using its side properties.

1.




\_\_\_\_\_

2.



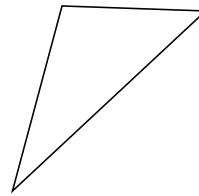
\_\_\_\_\_

3.



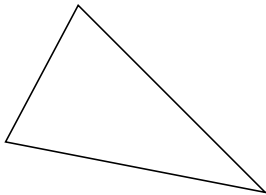
\_\_\_\_\_

4.




\_\_\_\_\_

5.



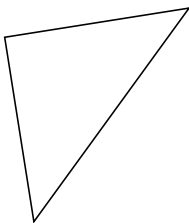
\_\_\_\_\_

6.



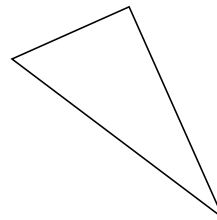
\_\_\_\_\_

7.




\_\_\_\_\_

8.



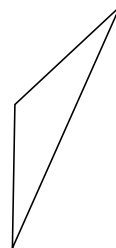
\_\_\_\_\_

9.



\_\_\_\_\_

10.



\_\_\_\_\_

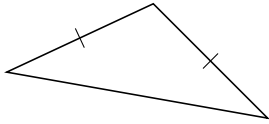
# Classifying Triangles by Side Properties (F) Answers

Name: \_\_\_\_\_

Date: \_\_\_\_\_

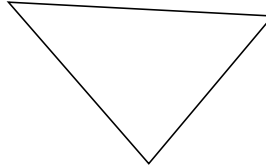
Classify each triangle using its side properties.

1.



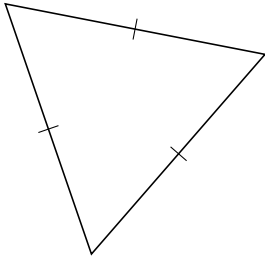
isosceles

2.



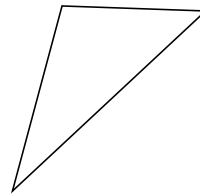
scalene

3.



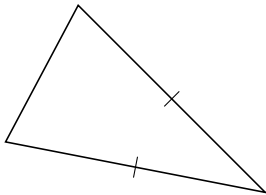
equilateral

4.



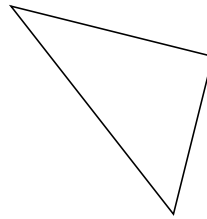
scalene

5.



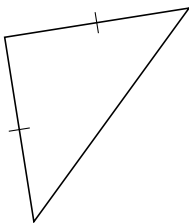
isosceles

6.



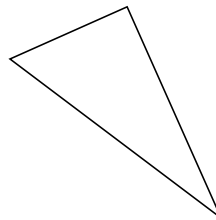
scalene

7.




isosceles

8.



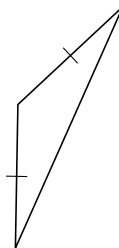
scalene

9.



scalene

10.



isosceles

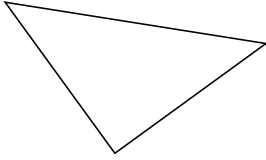
# Classifying Triangles by Side Properties (G)

Name: \_\_\_\_\_

Date: \_\_\_\_\_

Classify each triangle using its side properties.

1.



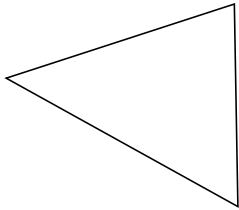
\_\_\_\_\_

2.



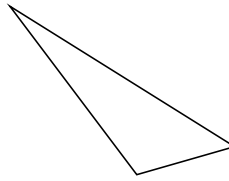
\_\_\_\_\_

3.



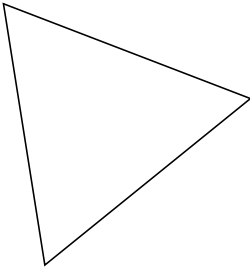
\_\_\_\_\_

4.



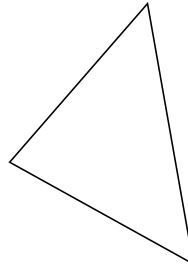
\_\_\_\_\_

5.



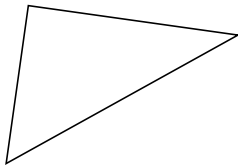
\_\_\_\_\_

6.



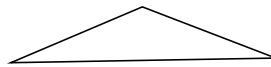
\_\_\_\_\_

7.



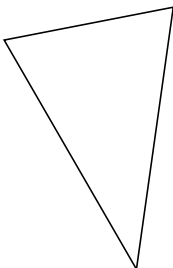
\_\_\_\_\_

8.



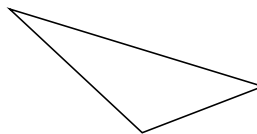
\_\_\_\_\_

9.



\_\_\_\_\_

10.



\_\_\_\_\_

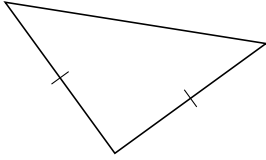
# Classifying Triangles by Side Properties (G) Answers

Name: \_\_\_\_\_

Date: \_\_\_\_\_

Classify each triangle using its side properties.

1.



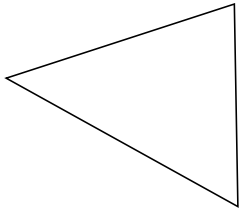
isosceles

2.



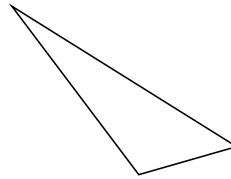
isosceles

3.



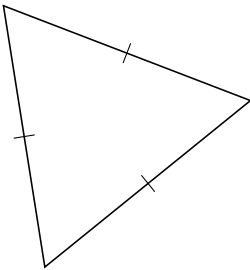
scalene

4.



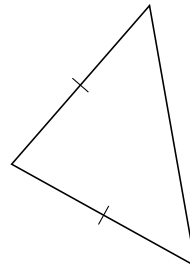
scalene

5.



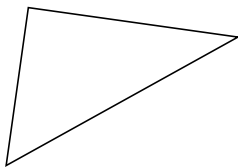
equilateral

6.



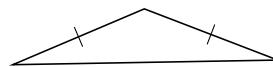
isosceles

7.



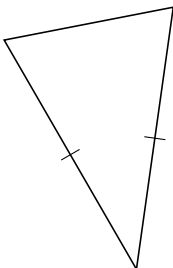
scalene

8.



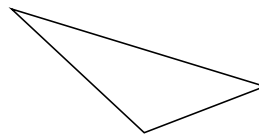
isosceles

9.



isosceles

10.



scalene

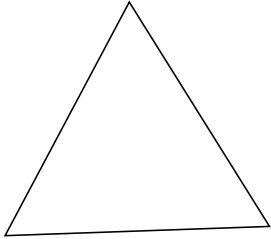
# Classifying Triangles by Side Properties (H)

Name: \_\_\_\_\_

Date: \_\_\_\_\_

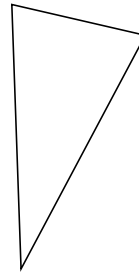
Classify each triangle using its side properties.

1.



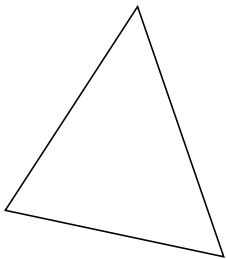
\_\_\_\_\_

2.



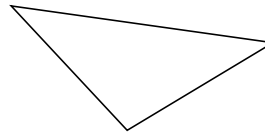
\_\_\_\_\_

3.



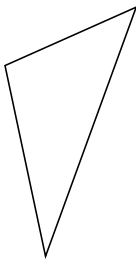
\_\_\_\_\_

4.



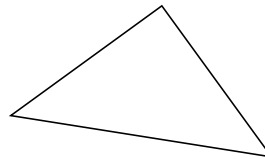
\_\_\_\_\_

5.



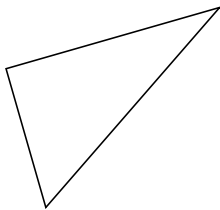
\_\_\_\_\_

6.



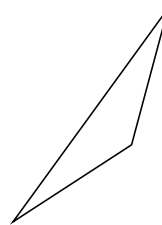
\_\_\_\_\_

7.



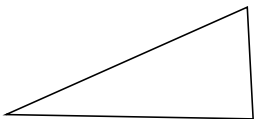
\_\_\_\_\_

8.



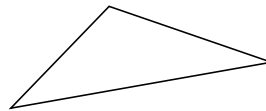
\_\_\_\_\_

9.



\_\_\_\_\_

10.



\_\_\_\_\_

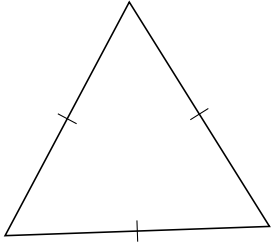
# Classifying Triangles by Side Properties (H) Answers

Name: \_\_\_\_\_

Date: \_\_\_\_\_

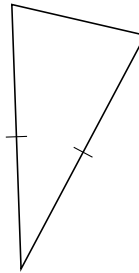
Classify each triangle using its side properties.

1.



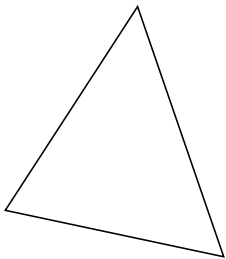
equilateral

2.



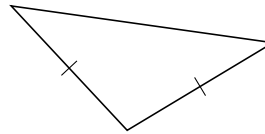
isosceles

3.



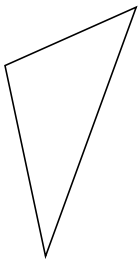
scalene

4.



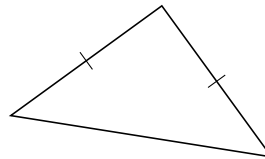
isosceles

5.



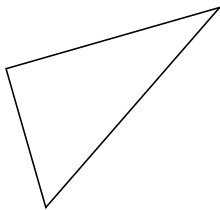
scalene

6.



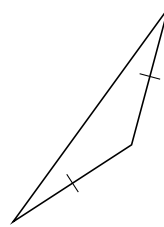
isosceles

7.



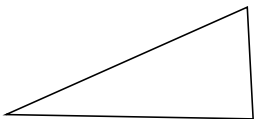
scalene

8.



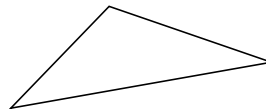
isosceles

9.



scalene

10.



scalene



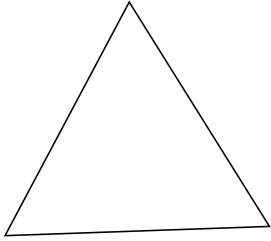
# Classifying Triangles by Side Properties (I)

Name: \_\_\_\_\_

Date: \_\_\_\_\_

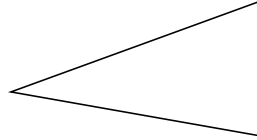
Classify each triangle using its side properties.

1.



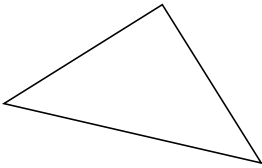
\_\_\_\_\_

2.



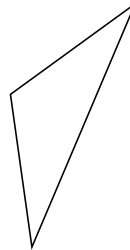
\_\_\_\_\_

3.



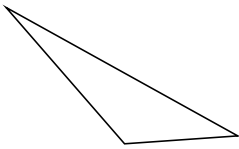
\_\_\_\_\_

4.



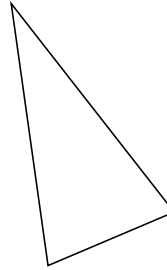
\_\_\_\_\_

5.



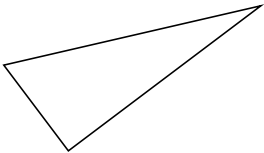
\_\_\_\_\_

6.



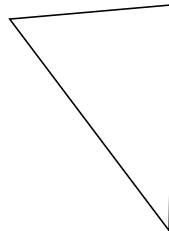
\_\_\_\_\_

7.



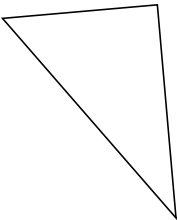
\_\_\_\_\_

8.



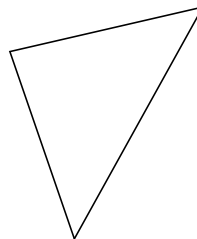
\_\_\_\_\_

9.



\_\_\_\_\_

10.



\_\_\_\_\_

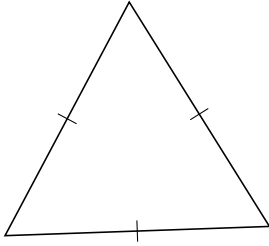
# Classifying Triangles by Side Properties (I) Answers

Name: \_\_\_\_\_

Date: \_\_\_\_\_

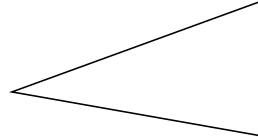
Classify each triangle using its side properties.

1.



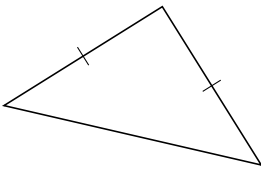
equilateral

2.



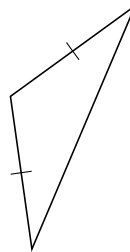
scalene

3.



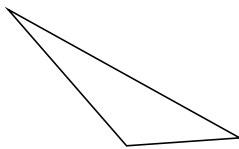
isosceles

4.



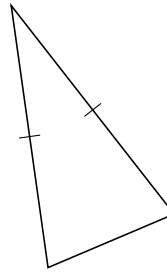
isosceles

5.



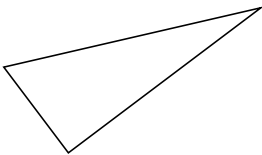
scalene

6.




isosceles

7.



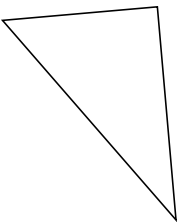
scalene

8.



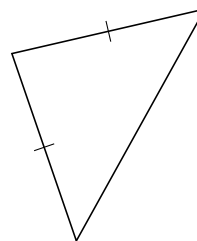
scalene

9.



scalene

10.



isosceles

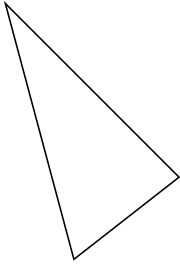
# Classifying Triangles by Side Properties (J)

Name: \_\_\_\_\_

Date: \_\_\_\_\_

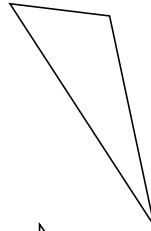
Classify each triangle using its side properties.

1.



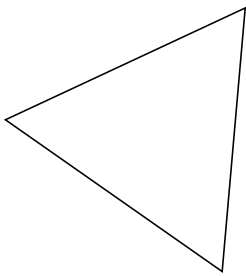
\_\_\_\_\_

2.



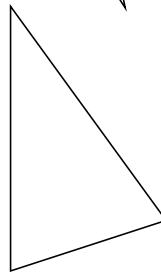
\_\_\_\_\_

3.



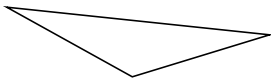
\_\_\_\_\_

4.



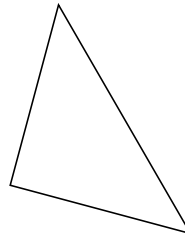
\_\_\_\_\_

5.



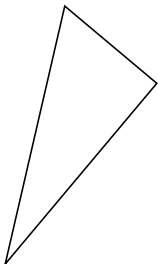
\_\_\_\_\_

6.



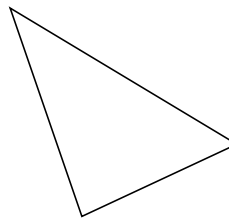
\_\_\_\_\_

7.



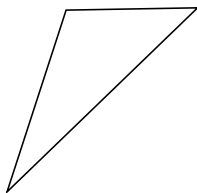
\_\_\_\_\_

8.



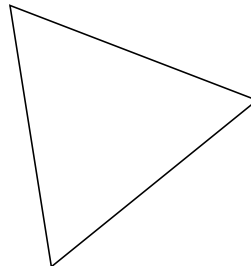
\_\_\_\_\_

9.



\_\_\_\_\_

10.



\_\_\_\_\_

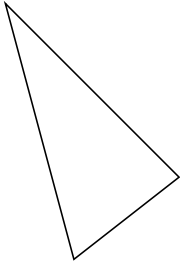
# Classifying Triangles by Side Properties (J) Answers

Name: \_\_\_\_\_

Date: \_\_\_\_\_

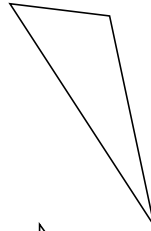
Classify each triangle using its side properties.

1.



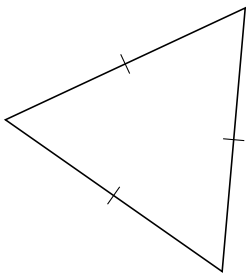
scalene

2.



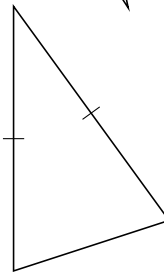
scalene

3.



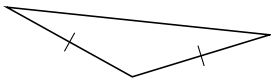
equilateral

4.



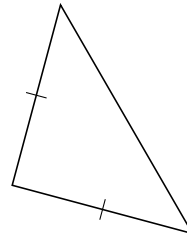
isosceles

5.



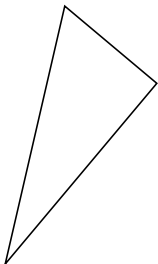
isosceles

6.



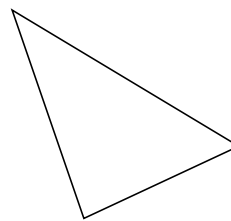
isosceles

7.



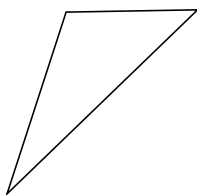
scalene

8.



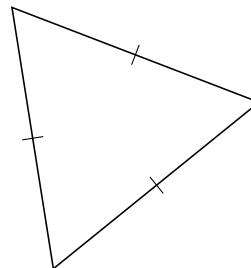
scalene

9.



scalene

10.



equilateral