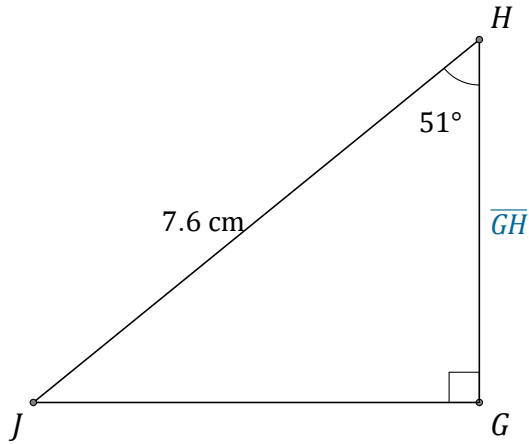


Cosine Ratio (A)

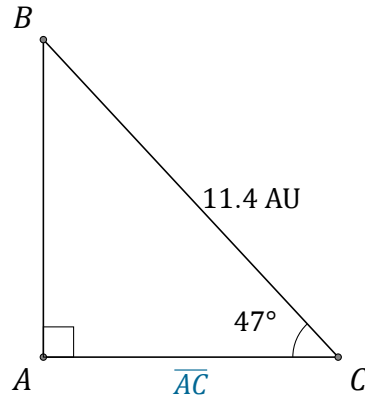
Name: _____

Date: _____

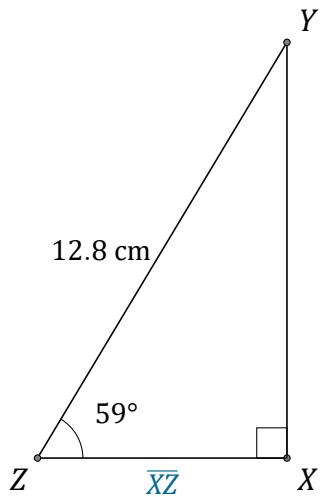
Calculate the side values using the cosine ratio: $\cos(\alpha) = \frac{A}{H}$



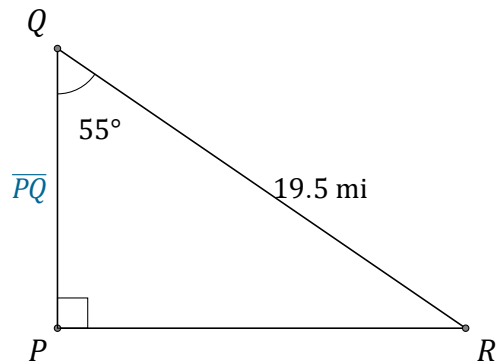
$\overline{GH} =$ _____



$\overline{AC} =$ _____



$\overline{XZ} =$ _____



$\overline{PQ} =$ _____