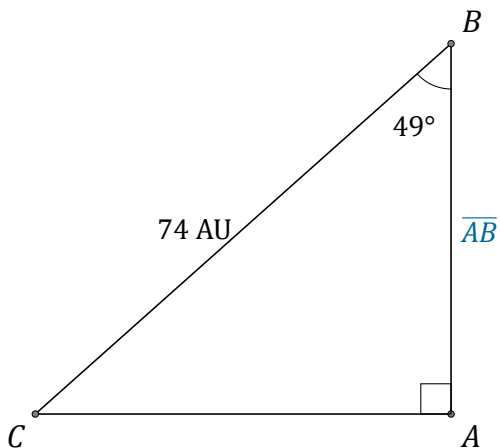


Cosine Ratio (D)

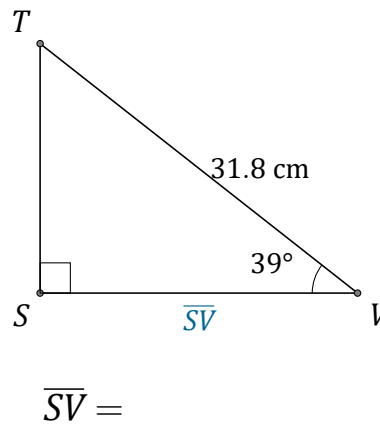
Name: _____

Date: _____

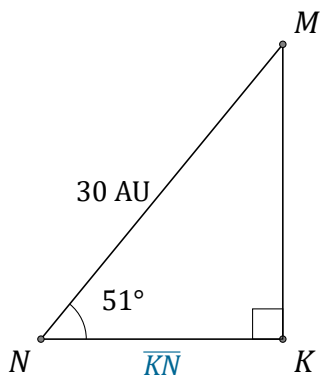
Calculate the side values using the cosine ratio: $\cos(\alpha) = \frac{A}{H}$



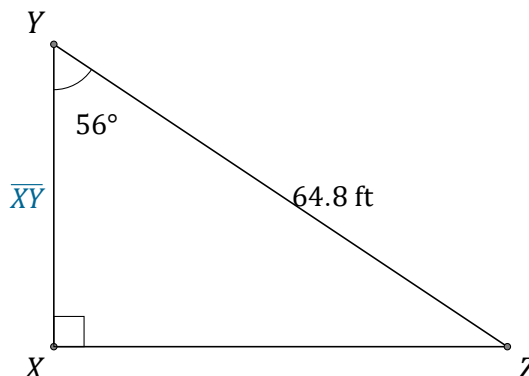
$$\overline{AB} = \underline{\hspace{2cm}}$$



$$\overline{SV} = \underline{\hspace{2cm}}$$



$$\overline{KN} = \underline{\hspace{2cm}}$$



$$\overline{XY} = \underline{\hspace{2cm}}$$