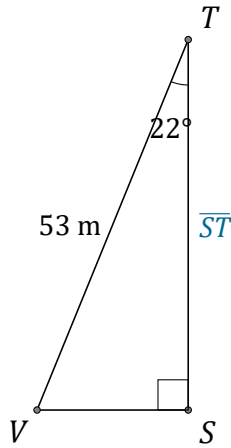


Cosine Ratio (I)

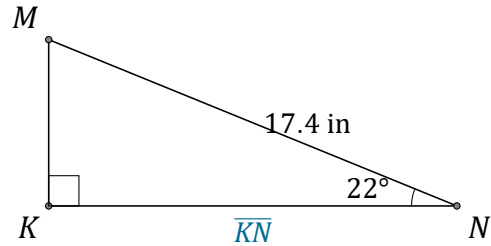
Name: _____

Date: _____

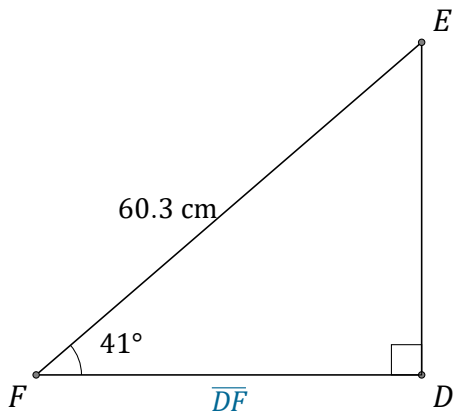
Calculate the side values using the cosine ratio: $\cos(\alpha) = \frac{A}{H}$



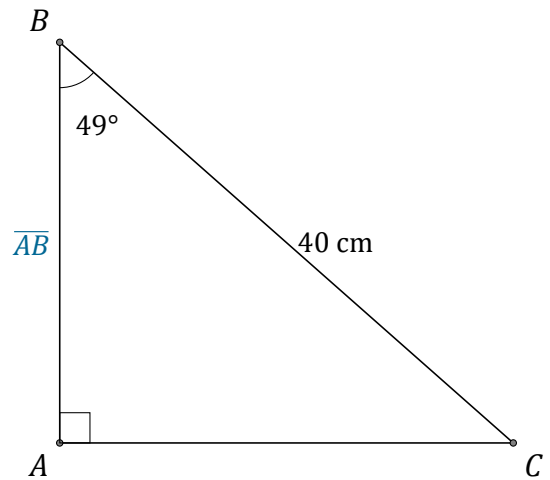
$\overline{ST} =$ _____



$\overline{KN} =$ _____



$\overline{DF} =$ _____



$\overline{AB} =$ _____