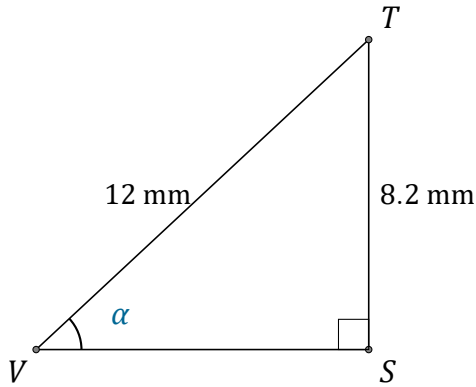


Sine Ratio (A)

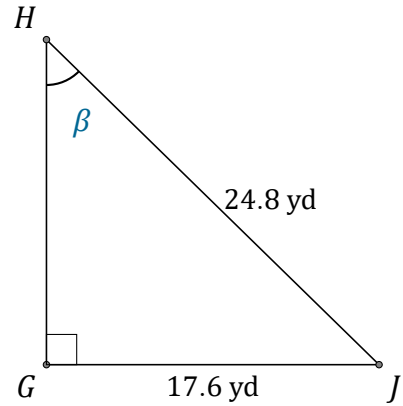
Name: _____

Date: _____

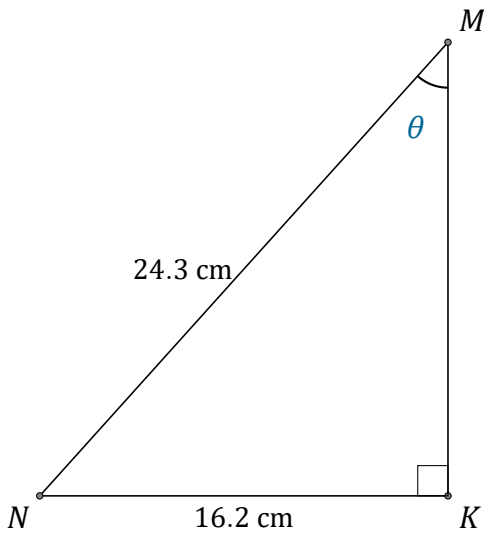
Calculate the angle values using the sine ratio: $\sin(\alpha) = \frac{O}{H}$



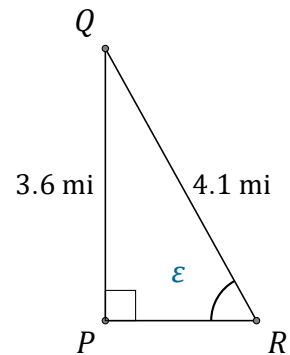
$$\alpha = \angle SVT = \underline{\hspace{2cm}}$$



$$\beta = \angle GHJ = \underline{\hspace{2cm}}$$



$$\theta = \angle KMN = \underline{\hspace{2cm}}$$



$$\epsilon = \angle PRQ = \underline{\hspace{2cm}}$$