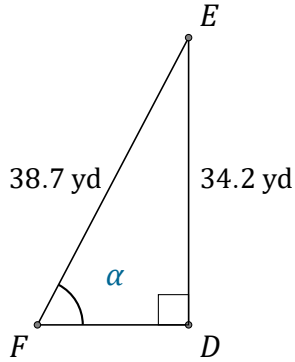


Sine Ratio (J)

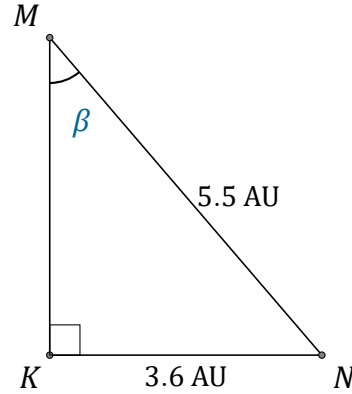
Name: _____

Date: _____

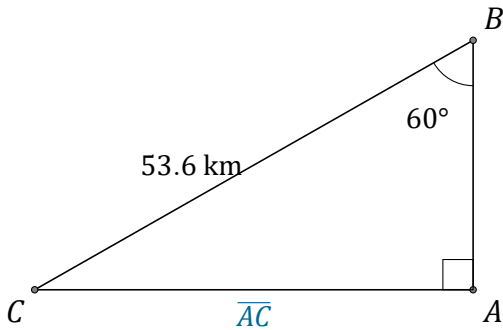
Calculate the angle and side values using the sine ratio: $\sin(\alpha) = \frac{O}{H}$



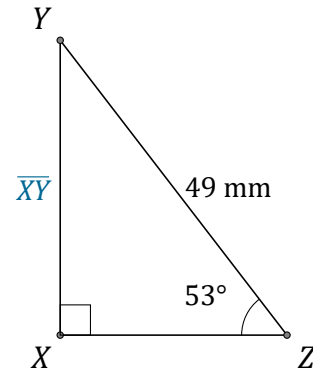
$\alpha = \angle DFE =$ _____



$\beta = \angle KMN =$ _____



$\overline{AC} =$ _____



$\overline{XY} =$ _____