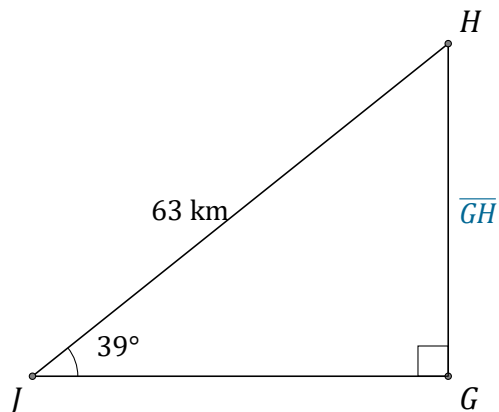


Sine Ratio (E)

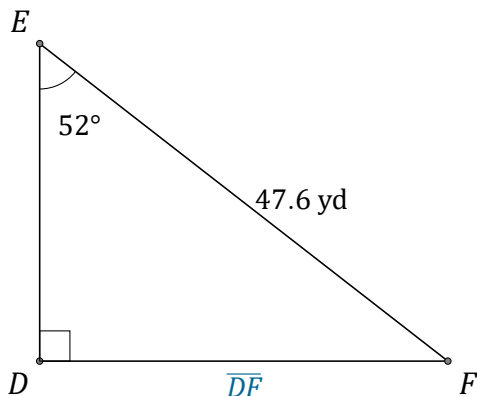
Name: _____

Date: _____

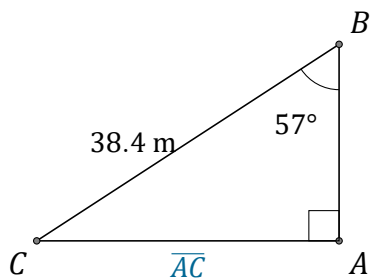
Calculate the side values using the sine ratio: $\sin(\alpha) = \frac{O}{H}$



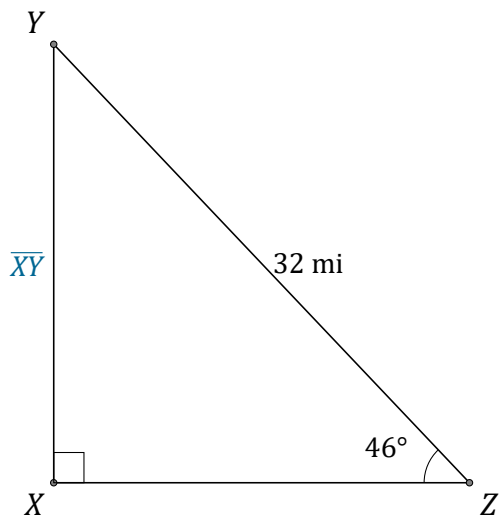
$$\overline{GH} = \underline{\hspace{2cm}}$$



$$\overline{DF} = \underline{\hspace{2cm}}$$



$$\overline{AC} = \underline{\hspace{2cm}}$$



$$\overline{XY} = \underline{\hspace{2cm}}$$