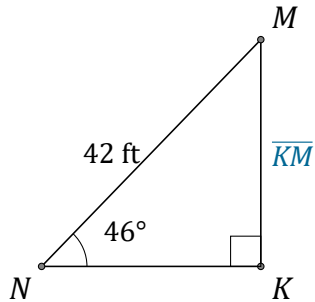


Sine Ratio (F)

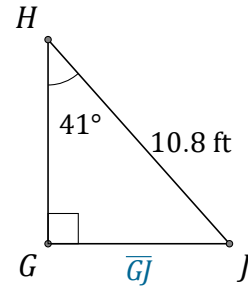
Name: _____

Date: _____

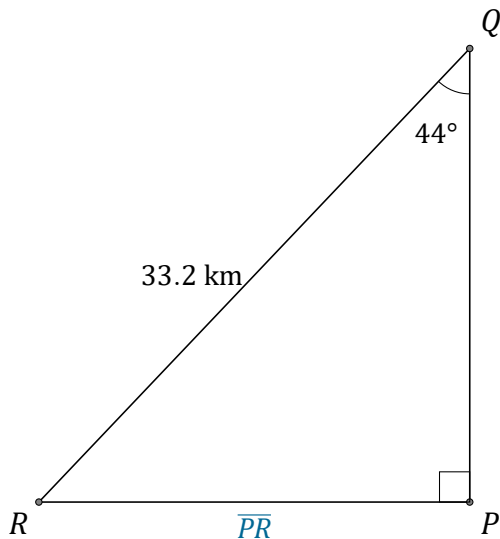
Calculate the side values using the sine ratio: $\sin(\alpha) = \frac{o}{h}$



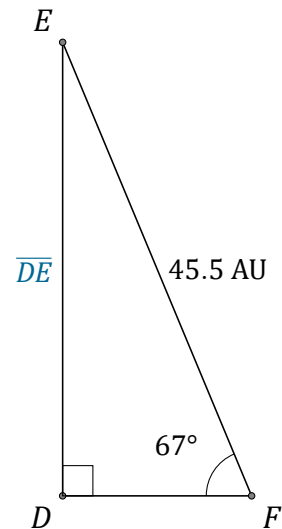
$\overline{KM} =$ _____



$\overline{GJ} =$ _____



$\overline{PR} =$ _____



$\overline{DE} =$ _____