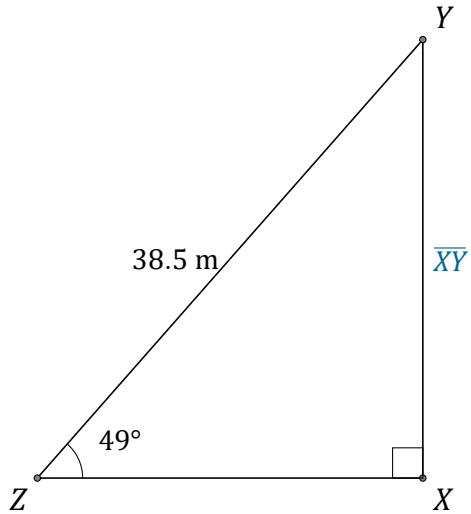


# Sine Ratio (H)

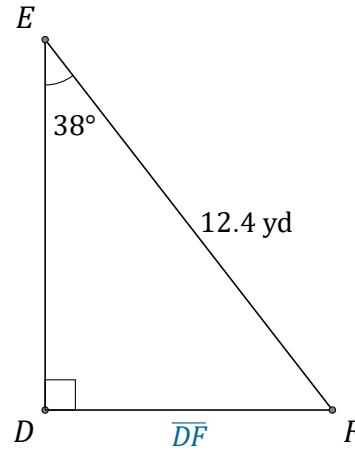
Name: \_\_\_\_\_

Date: \_\_\_\_\_

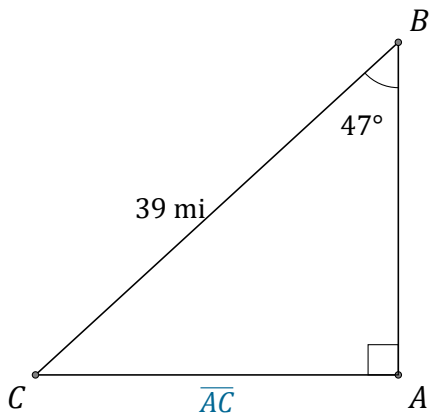
Calculate the side values using the sine ratio:  $\sin(\alpha) = \frac{O}{H}$



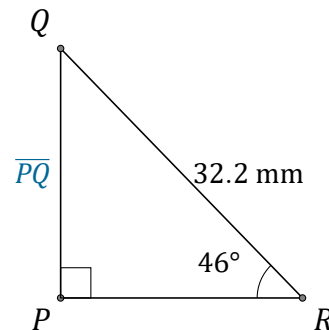
$\overline{XY} = \underline{\hspace{2cm}}$



$\overline{DF} = \underline{\hspace{2cm}}$



$\overline{AC} = \underline{\hspace{2cm}}$



$\overline{PQ} = \underline{\hspace{2cm}}$