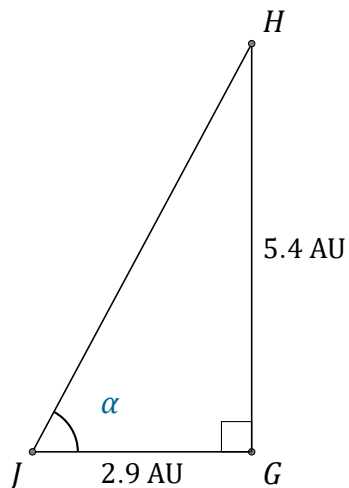


# Tangent Ratio (C)

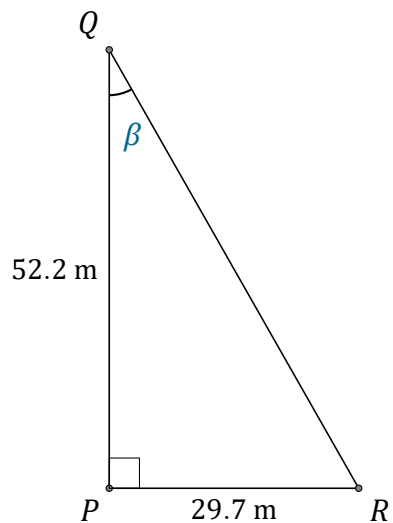
Name: \_\_\_\_\_

Date: \_\_\_\_\_

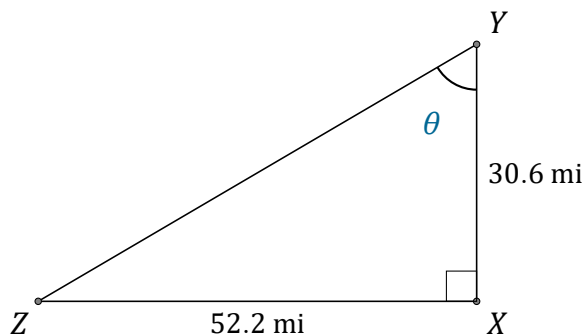
Calculate the angle values using the tangent ratio:  $\tan(\alpha) = \frac{O}{A}$



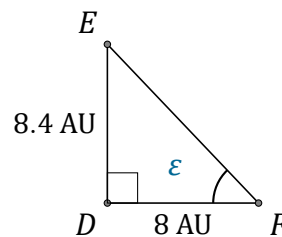
$$\alpha = \angle GJH = \underline{\hspace{2cm}}$$



$$\beta = \angle PQR = \underline{\hspace{2cm}}$$



$$\theta = \angle XYZ = \underline{\hspace{2cm}}$$



$$\epsilon = \angle DFE = \underline{\hspace{2cm}}$$