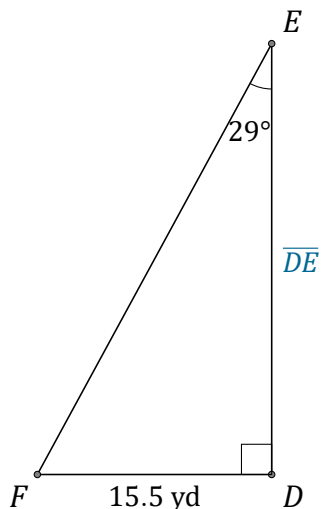


Tangent Ratio (C)

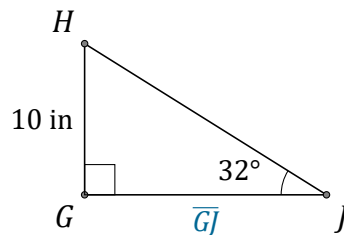
Name: _____

Date: _____

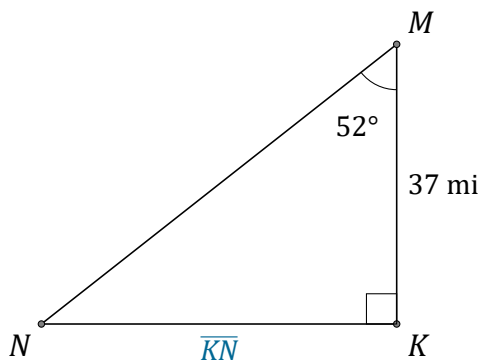
Calculate the side values using the tangent ratio: $\tan(\alpha) = \frac{O}{A}$



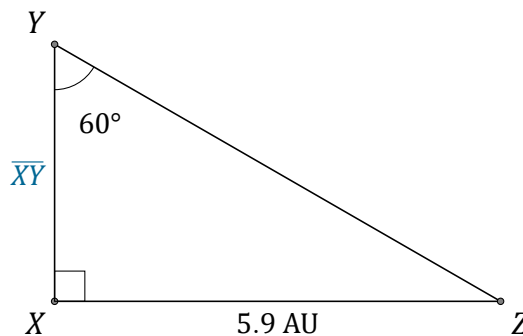
$\overline{DE} =$ _____



$\overline{GJ} =$ _____



$\overline{KN} =$ _____



$\overline{XY} =$ _____