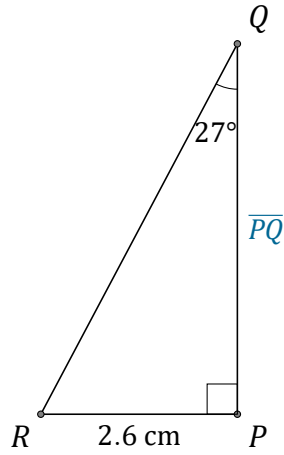


Tangent Ratio (D)

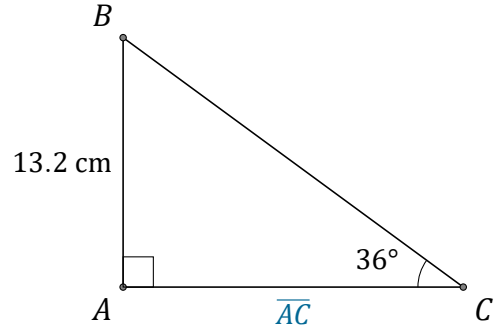
Name: _____

Date: _____

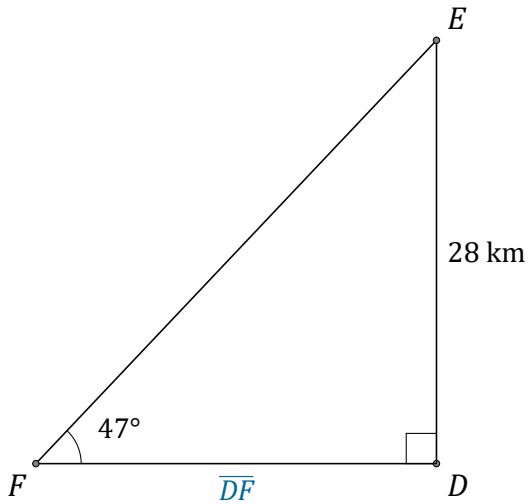
Calculate the side values using the tangent ratio: $\tan(\alpha) = \frac{O}{A}$



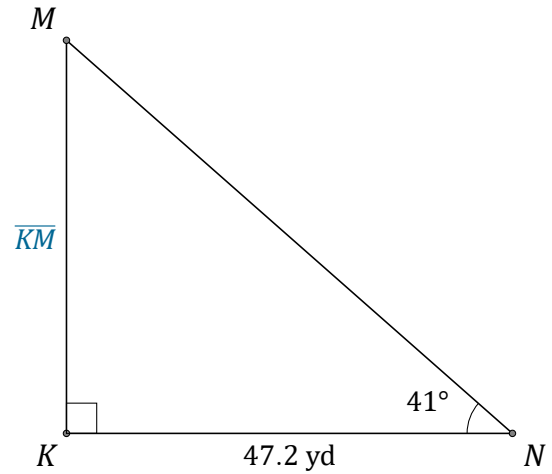
$\overline{PQ} = \underline{\hspace{2cm}}$



$\overline{AC} = \underline{\hspace{2cm}}$



$\overline{DF} = \underline{\hspace{2cm}}$



$\overline{KM} = \underline{\hspace{2cm}}$