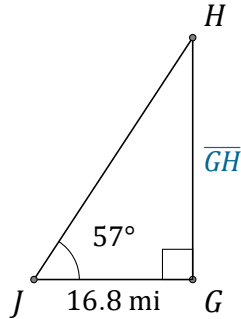


Tangent Ratio (I)

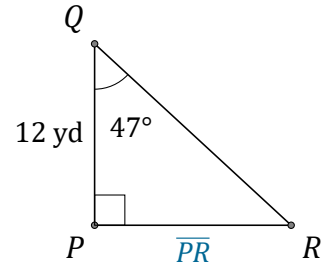
Name: _____

Date: _____

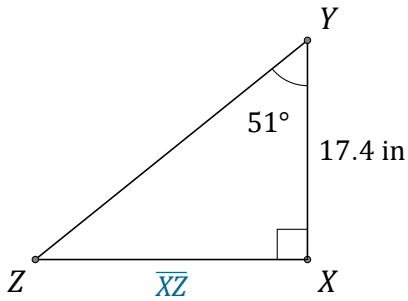
Calculate the side values using the tangent ratio: $\tan(\alpha) = \frac{O}{A}$



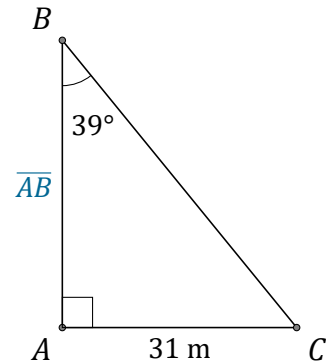
$\overline{GH} =$ _____



$\overline{PR} =$ _____



$\overline{XZ} =$ _____



$\overline{AB} =$ _____