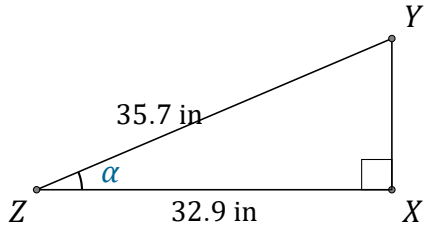


Trigonometric Ratios (G)

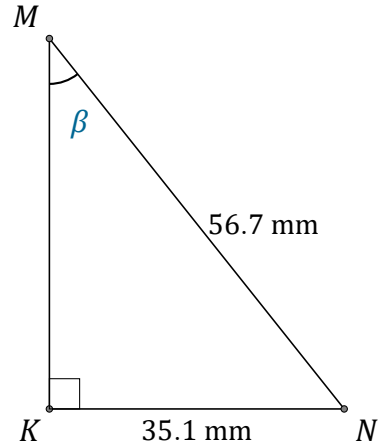
Name: _____

Date: _____

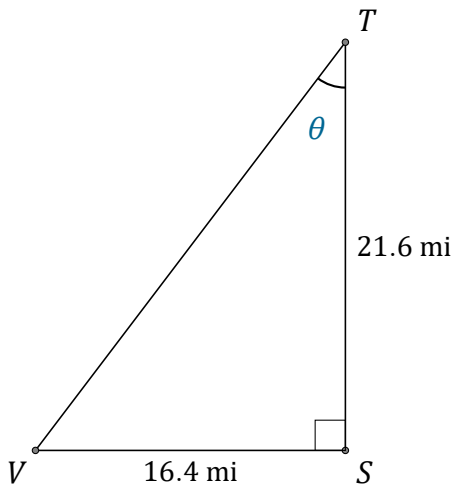
Calculate the angle values using trigonometric ratios



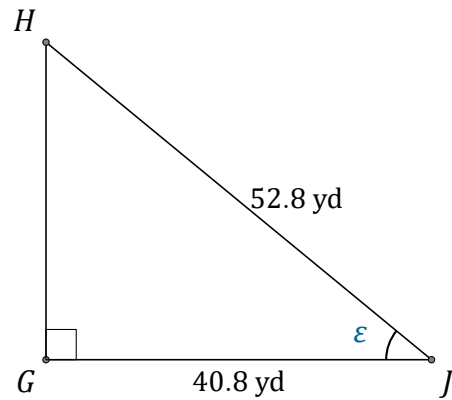
$$\alpha = \angle XZY = \underline{\hspace{2cm}}$$



$$\beta = \angle KMN = \underline{\hspace{2cm}}$$



$$\theta = \angle STV = \underline{\hspace{2cm}}$$



$$\epsilon = \angle GJH = \underline{\hspace{2cm}}$$