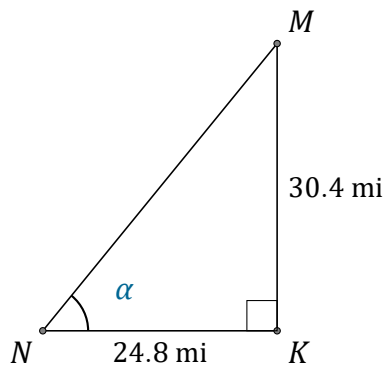


Trigonometric Ratios (E)

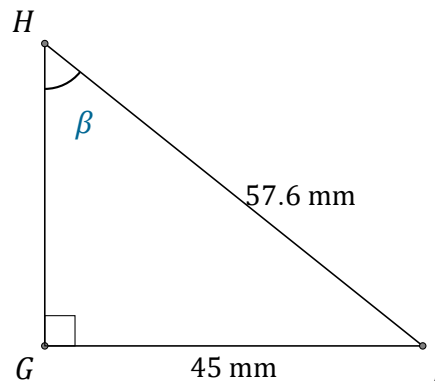
Name: _____

Date: _____

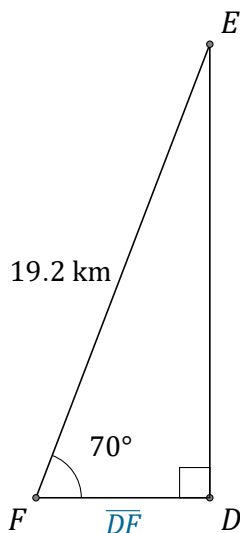
Calculate the angle and side values using trigonometric ratios



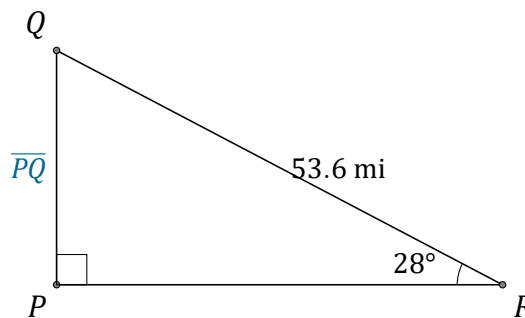
$\alpha = \angle KNM =$ _____



$\beta = \angle GHJ =$ _____



$\overline{DF} =$ _____



$\overline{PQ} =$ _____