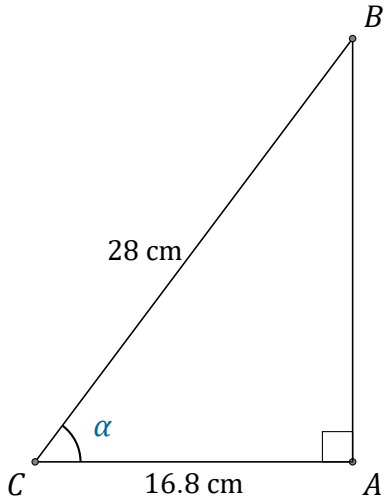


Trigonometric Ratios (H)

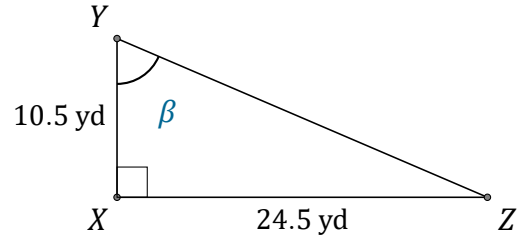
Name: _____

Date: _____

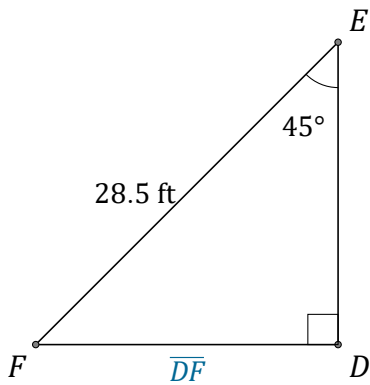
Calculate the angle and side values using trigonometric ratios



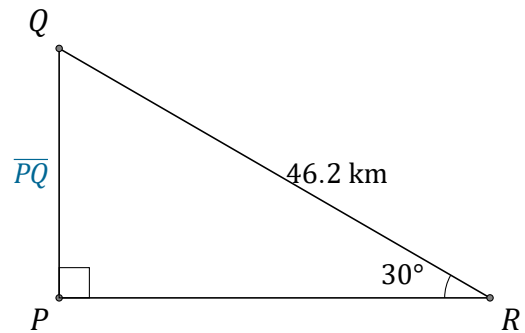
$$\alpha = \angle ACB = \underline{\hspace{2cm}}$$



$$\beta = \angle XYZ = \underline{\hspace{2cm}}$$



$$\overline{DF} = \underline{\hspace{2cm}}$$



$$\overline{PQ} = \underline{\hspace{2cm}}$$