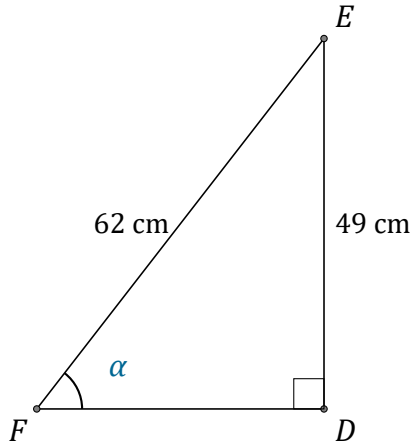


Trigonometric Ratios (I)

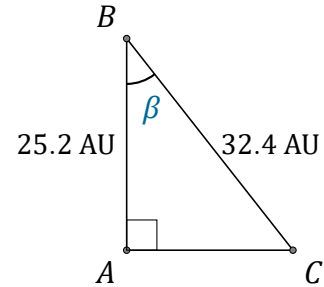
Name: _____

Date: _____

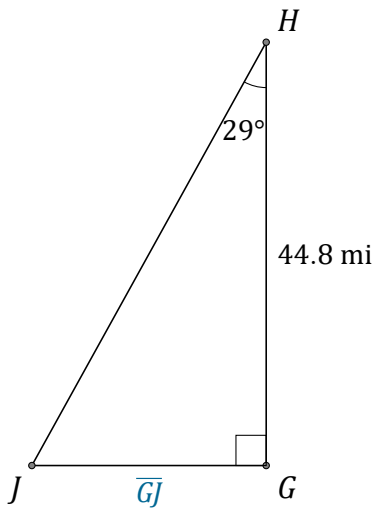
Calculate the angle and side values using trigonometric ratios



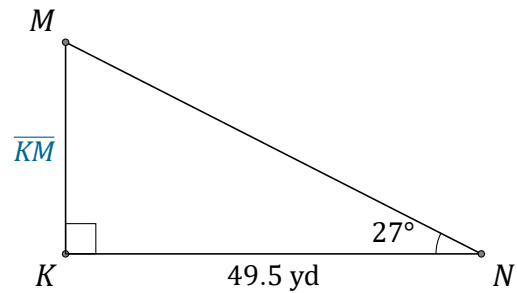
$\alpha = \angle DFE =$ _____



$\beta = \angle ABC =$ _____



$\overline{GJ} =$ _____



$\overline{KM} =$ _____