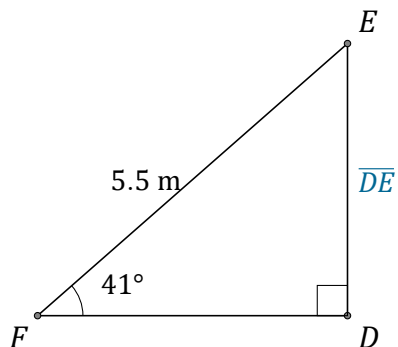


Trigonometric Ratios (E)

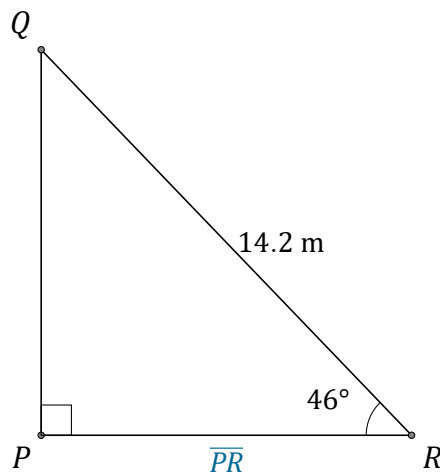
Name: _____

Date: _____

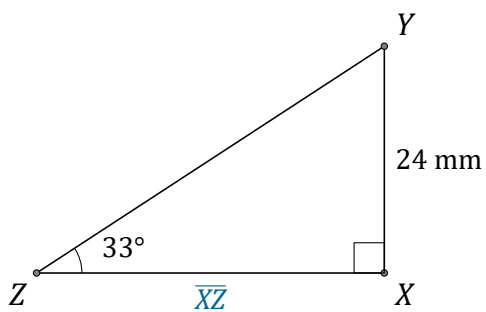
Calculate the side values using trigonometric ratios



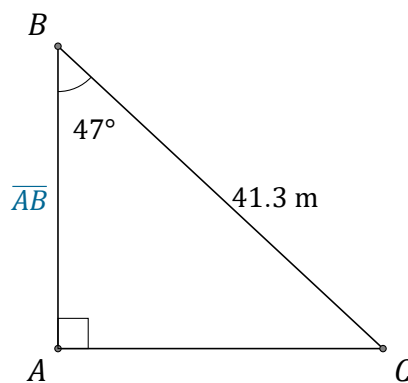
$$\overline{DE} = \underline{\hspace{2cm}}$$



$$\overline{PR} = \underline{\hspace{2cm}}$$



$$\overline{XZ} = \underline{\hspace{2cm}}$$



$$\overline{AB} = \underline{\hspace{2cm}}$$