

GHOSTLY FIGURES MISSING DIGITS ADDITION (A)

Name: _____

Date: _____

Score: _____

Fill in the digits that have mysteriously disappeared.

1.
$$\begin{array}{r} \square 9 5 \\ + 3 8 \square \\ \hline \square 3 \square 0 \end{array}$$



2.
$$\begin{array}{r} \square 6 5 \\ + 4 2 6 \\ \hline 6 \square \square \end{array}$$



3.
$$\begin{array}{r} 5 \square 2 \\ + 9 1 \\ \hline \square 9 \square \end{array}$$



4.
$$\begin{array}{r} \square 4 4 \\ + 2 4 3 \\ \hline 8 \square \square \end{array}$$



5.
$$\begin{array}{r} \square 6 \\ + \square 3 4 \\ \hline 6 6 \square \end{array}$$



6.
$$\begin{array}{r} 6 \square \square \\ + \square 6 4 \\ \hline \square 0 2 9 \end{array}$$



7.
$$\begin{array}{r} \square \square 0 \\ + 2 3 5 \\ \hline 6 8 \square \end{array}$$



8.
$$\begin{array}{r} 3 8 1 \\ + 8 \square \square \\ \hline \square \square 8 8 \end{array}$$



9.
$$\begin{array}{r} \square 6 \\ + \square 6 \square \\ \hline 9 9 9 \end{array}$$



10.
$$\begin{array}{r} 3 \square \square \\ + 4 9 3 \\ \hline \square 4 3 \end{array}$$



11.
$$\begin{array}{r} \square 1 \\ + 1 9 \\ \hline 9 \square \end{array}$$



12.
$$\begin{array}{r} 2 6 \square \\ + \square 5 5 \\ \hline \square 0 \square 1 \end{array}$$



13.
$$\begin{array}{r} \square \square \square \\ + 4 5 2 \\ \hline \square 3 5 2 \end{array}$$



14.
$$\begin{array}{r} 1 \square 7 \\ + 6 1 \square \\ \hline \square 5 4 \end{array}$$



15.
$$\begin{array}{r} 7 1 \\ + 9 \square 3 \\ \hline \square 7 \square \end{array}$$



16.
$$\begin{array}{r} \square 4 6 \\ + 2 \square 2 \\ \hline 5 9 \square \end{array}$$



17.
$$\begin{array}{r} 9 8 5 \\ + \square \square \square \\ \hline \square 7 7 8 \end{array}$$



18.
$$\begin{array}{r} \square 8 6 \\ + 1 \square \square \\ \hline 5 2 1 \end{array}$$



19.
$$\begin{array}{r} 4 5 1 \\ + 4 6 8 \\ \hline \square \square \square \end{array}$$



20.
$$\begin{array}{r} \square \square 6 \\ + 4 7 8 \\ \hline 7 2 \square \end{array}$$



GHOSTLY FIGURES MISSING DIGITS ADDITION (A) ANSWERS

Name: _____

Date: _____

Score: _____

Fill in the digits that have mysteriously disappeared.

$$\begin{array}{r} 1. \quad \boxed{9}95 \\ + \quad 38\boxed{5} \\ \hline \boxed{1}3\boxed{8}0 \end{array}$$



$$\begin{array}{r} 2. \quad \boxed{2}65 \\ + \quad 426 \\ \hline 6\boxed{9}1 \end{array}$$



$$\begin{array}{r} 3. \quad 5\boxed{0}2 \\ + \quad 91 \\ \hline \boxed{5}9\boxed{3} \end{array}$$



$$\begin{array}{r} 4. \quad \boxed{6}44 \\ + \quad 243 \\ \hline 8\boxed{8}7 \end{array}$$



$$\begin{array}{r} 5. \quad \quad \boxed{2}6 \\ + \quad \boxed{6}34 \\ \hline 66\boxed{0} \end{array}$$



$$\begin{array}{r} 6. \quad 6\boxed{6}5 \\ + \quad \boxed{3}64 \\ \hline \boxed{1}029 \end{array}$$



$$\begin{array}{r} 7. \quad \boxed{4}50 \\ + \quad 235 \\ \hline 68\boxed{5} \end{array}$$



$$\begin{array}{r} 8. \quad 381 \\ + \quad 8\boxed{0}7 \\ \hline \boxed{1}188 \end{array}$$



$$\begin{array}{r} 9. \quad \quad \boxed{3}6 \\ + \quad \boxed{9}6\boxed{3} \\ \hline 999 \end{array}$$



$$\begin{array}{r} 10. \quad 3\boxed{5}0 \\ + \quad 493 \\ \hline \boxed{8}43 \end{array}$$



$$\begin{array}{r} 11. \quad \boxed{7}1 \\ + \quad 19 \\ \hline 9\boxed{0} \end{array}$$



$$\begin{array}{r} 12. \quad 26\boxed{6} \\ + \quad \boxed{7}55 \\ \hline \boxed{1}0\boxed{2}1 \end{array}$$



$$\begin{array}{r} 13. \quad \boxed{9}00 \\ + \quad 452 \\ \hline \boxed{1}352 \end{array}$$



$$\begin{array}{r} 14. \quad 1\boxed{3}7 \\ + \quad 61\boxed{7} \\ \hline \boxed{7}54 \end{array}$$



$$\begin{array}{r} 15. \quad 71 \\ + \quad 9\boxed{0}3 \\ \hline \boxed{9}74 \end{array}$$



$$\begin{array}{r} 16. \quad \boxed{3}46 \\ + \quad 2\boxed{5}2 \\ \hline 59\boxed{8} \end{array}$$



$$\begin{array}{r} 17. \quad 985 \\ + \quad \boxed{7}9\boxed{3} \\ \hline \boxed{1}778 \end{array}$$



$$\begin{array}{r} 18. \quad \boxed{3}86 \\ + \quad 1\boxed{3}5 \\ \hline 521 \end{array}$$



$$\begin{array}{r} 19. \quad 451 \\ + \quad 468 \\ \hline \boxed{9}19 \end{array}$$



$$\begin{array}{r} 20. \quad \boxed{2}46 \\ + \quad 478 \\ \hline 72\boxed{4} \end{array}$$



GHOSTLY FIGURES MISSING DIGITS ADDITION (B)

Name: _____

Date: _____

Score: _____

Fill in the digits that have mysteriously disappeared.

1.
$$\begin{array}{r} 8 \square 9 \\ + 497 \\ \hline \square \square 0 \square \end{array}$$



2.
$$\begin{array}{r} 246 \\ + 70\square \\ \hline \square \square 3 \end{array}$$



3.
$$\begin{array}{r} 5\square 0 \\ + 498 \\ \hline \square \square 3 \square \end{array}$$



4.
$$\begin{array}{r} 74\square \\ + 3\square 0 \\ \hline \square \square 61 \end{array}$$



5.
$$\begin{array}{r} \square 0 \square \\ + 7\square 3 \\ \hline \square 267 \end{array}$$



6.
$$\begin{array}{r} 8\square 1 \\ + 11\square \\ \hline \square 49 \end{array}$$



7.
$$\begin{array}{r} 749 \\ + \square 0 \square \\ \hline \square 1 \square 5 \end{array}$$



8.
$$\begin{array}{r} \square 66 \\ + 32\square \\ \hline 5\square 5 \end{array}$$



9.
$$\begin{array}{r} 81\square \\ + \square \square 7 \\ \hline \square 608 \end{array}$$



10.
$$\begin{array}{r} \square 75 \\ + 432 \\ \hline 8\square \square \end{array}$$



11.
$$\begin{array}{r} \square 18 \\ + 1\square 6 \\ \hline 47\square \end{array}$$



12.
$$\begin{array}{r} 33\square \\ + 869 \\ \hline \square \square \square 1 \end{array}$$



13.
$$\begin{array}{r} \square 84 \\ + 41 \\ \hline 6\square \square \end{array}$$



14.
$$\begin{array}{r} \square 9\square \\ + 6\square 2 \\ \hline \square 420 \end{array}$$



15.
$$\begin{array}{r} 9\square \square \\ + 537 \\ \hline \square \square 16 \end{array}$$



16.
$$\begin{array}{r} 3\square 9 \\ + \square 7\square \\ \hline \square 361 \end{array}$$



17.
$$\begin{array}{r} \square 77 \\ + 43\square \\ \hline \square 3\square 8 \end{array}$$



18.
$$\begin{array}{r} 709 \\ + 655 \\ \hline \square \square \square \square \end{array}$$



19.
$$\begin{array}{r} 36\square \\ + \square 70 \\ \hline 8\square 0 \end{array}$$



20.
$$\begin{array}{r} 17\square \\ + 879 \\ \hline \square \square \square 5 \end{array}$$



GHOSTLY FIGURES MISSING DIGITS ADDITION (B) ANSWERS

Name: _____

Date: _____

Score: _____

Fill in the digits that have mysteriously disappeared.

1.
$$\begin{array}{r} 8 \boxed{0} 9 \\ + 497 \\ \hline \boxed{1} \boxed{3} \boxed{0} \boxed{6} \end{array}$$



2.
$$\begin{array}{r} 246 \\ + 70\boxed{7} \\ \hline \boxed{9} \boxed{5} \boxed{3} \end{array}$$



3.
$$\begin{array}{r} 5\boxed{4}0 \\ + 498 \\ \hline \boxed{1} \boxed{0} \boxed{3} \boxed{8} \end{array}$$



4.
$$\begin{array}{r} 74\boxed{1} \\ + 3\boxed{2}0 \\ \hline \boxed{1} \boxed{0} \boxed{6} \boxed{1} \end{array}$$



5.
$$\begin{array}{r} \boxed{5} \boxed{0} \boxed{4} \\ + 7\boxed{6}3 \\ \hline \boxed{1} \boxed{2} \boxed{6} \boxed{7} \end{array}$$



6.
$$\begin{array}{r} 8\boxed{3}1 \\ + 11\boxed{8} \\ \hline \boxed{9} \boxed{4} \boxed{9} \end{array}$$



7.
$$\begin{array}{r} 749 \\ + \boxed{4} \boxed{0} \boxed{6} \\ \hline \boxed{1} \boxed{1} \boxed{5} \boxed{5} \end{array}$$



8.
$$\begin{array}{r} \boxed{2} \boxed{6} \boxed{6} \\ + 3\boxed{2} \boxed{9} \\ \hline \boxed{5} \boxed{9} \boxed{5} \end{array}$$



9.
$$\begin{array}{r} 81\boxed{1} \\ + \boxed{7} \boxed{9} \boxed{7} \\ \hline \boxed{1} \boxed{6} \boxed{0} \boxed{8} \end{array}$$



10.
$$\begin{array}{r} \boxed{3} \boxed{7} \boxed{5} \\ + 432 \\ \hline 8\boxed{0} \boxed{7} \end{array}$$



11.
$$\begin{array}{r} \boxed{3} \boxed{1} \boxed{8} \\ + 1\boxed{5} \boxed{6} \\ \hline 47\boxed{4} \end{array}$$



12.
$$\begin{array}{r} 33\boxed{2} \\ + 869 \\ \hline \boxed{1} \boxed{2} \boxed{0} \boxed{1} \end{array}$$



13.
$$\begin{array}{r} \boxed{5} \boxed{8} \boxed{4} \\ + 41 \\ \hline 6\boxed{2} \boxed{5} \end{array}$$



14.
$$\begin{array}{r} \boxed{7} \boxed{9} \boxed{8} \\ + 6\boxed{2} \boxed{2} \\ \hline \boxed{1} \boxed{4} \boxed{2} \boxed{0} \end{array}$$



15.
$$\begin{array}{r} 9\boxed{7} \boxed{9} \\ + 537 \\ \hline \boxed{1} \boxed{5} \boxed{1} \boxed{6} \end{array}$$



16.
$$\begin{array}{r} 3\boxed{8} \boxed{9} \\ + \boxed{9} \boxed{7} \boxed{2} \\ \hline \boxed{1} \boxed{3} \boxed{6} \boxed{1} \end{array}$$



17.
$$\begin{array}{r} \boxed{8} \boxed{7} \boxed{7} \\ + 43\boxed{1} \\ \hline \boxed{1} \boxed{3} \boxed{0} \boxed{8} \end{array}$$



18.
$$\begin{array}{r} 709 \\ + 655 \\ \hline \boxed{1} \boxed{3} \boxed{6} \boxed{4} \end{array}$$



19.
$$\begin{array}{r} 36\boxed{0} \\ + \boxed{4} \boxed{7} \boxed{0} \\ \hline 8\boxed{3} \boxed{0} \end{array}$$



20.
$$\begin{array}{r} 17\boxed{6} \\ + 879 \\ \hline \boxed{1} \boxed{0} \boxed{5} \boxed{5} \end{array}$$



GHOSTLY FIGURES MISSING DIGITS ADDITION (C)

Name: _____

Date: _____

Score: _____

Fill in the digits that have mysteriously disappeared.

1.
$$\begin{array}{r} 7 \square 0 \\ + 554 \\ \hline \square \square 3 \square \end{array}$$



2.
$$\begin{array}{r} \square \square 3 \\ + \square 1 \square \\ \hline 697 \end{array}$$



3.
$$\begin{array}{r} 64\square \\ + 8\square 6 \\ \hline \square \square 06 \end{array}$$



4.
$$\begin{array}{r} 1\square\square \\ + 747 \\ \hline \square 80 \end{array}$$



5.
$$\begin{array}{r} 422 \\ + \square \square 6 \\ \hline 67\square \end{array}$$



6.
$$\begin{array}{r} 60\square \\ + \square 35 \\ \hline \square 2\square 4 \end{array}$$



7.
$$\begin{array}{r} \square \square \square \\ + 625 \\ \hline \square 251 \end{array}$$



8.
$$\begin{array}{r} \square 76 \\ + 4\square \square \\ \hline 880 \end{array}$$



9.
$$\begin{array}{r} 855 \\ + \square \square \square \\ \hline \square 314 \end{array}$$



10.
$$\begin{array}{r} \square 19 \\ + \square 9 \square \\ \hline 8\square 5 \end{array}$$



11.
$$\begin{array}{r} 9\square 1 \\ + \square 5 \square \\ \hline \square 062 \end{array}$$



12.
$$\begin{array}{r} 672 \\ + \square 5 \square \\ \hline \square 1\square 8 \end{array}$$



13.
$$\begin{array}{r} \square 1 \square \\ + 4 \square 1 \\ \hline \square 149 \end{array}$$



14.
$$\begin{array}{r} \square 72 \\ + \square 72 \\ \hline \square 0 \square \square \end{array}$$



15.
$$\begin{array}{r} 1 \square \square \\ + 654 \\ \hline \square 31 \end{array}$$



16.
$$\begin{array}{r} 133 \\ + \square \square 5 \\ \hline 91 \square \end{array}$$



17.
$$\begin{array}{r} 23\square \\ + \square 07 \\ \hline 8\square 9 \end{array}$$



18.
$$\begin{array}{r} \square \square 5 \\ + 73 \\ \hline 92 \square \end{array}$$



19.
$$\begin{array}{r} 5 \square 0 \\ + \square 32 \\ \hline \square 43 \square \end{array}$$



20.
$$\begin{array}{r} 27\square \\ + \square 03 \\ \hline 7\square 2 \end{array}$$



GHOSTLY FIGURES MISSING DIGITS ADDITION (C) ANSWERS

Name: _____

Date: _____

Score: _____

Fill in the digits that have mysteriously disappeared.

$$\begin{array}{r} 1. \quad 7 \boxed{8} 0 \\ + \quad 5 5 4 \\ \hline \boxed{1} \boxed{3} \boxed{3} \boxed{4} \end{array}$$



$$\begin{array}{r} 2. \quad \quad \boxed{8} 3 \\ + \quad \boxed{6} \boxed{1} \boxed{4} \\ \hline 6 9 7 \end{array}$$



$$\begin{array}{r} 3. \quad 6 4 \boxed{0} \\ + \quad 8 \boxed{6} 6 \\ \hline \boxed{1} \boxed{5} 0 6 \end{array}$$



$$\begin{array}{r} 4. \quad 1 \boxed{3} \boxed{3} \\ + \quad 7 4 7 \\ \hline \boxed{8} 8 0 \end{array}$$



$$\begin{array}{r} 5. \quad 4 2 2 \\ + \quad \boxed{2} \boxed{5} 6 \\ \hline 6 7 \boxed{8} \end{array}$$



$$\begin{array}{r} 6. \quad 6 0 \boxed{9} \\ + \quad \boxed{6} 3 5 \\ \hline \boxed{1} 2 \boxed{4} 4 \end{array}$$



$$\begin{array}{r} 7. \quad \boxed{6} \boxed{2} \boxed{6} \\ + \quad 6 2 5 \\ \hline \boxed{1} 2 5 1 \end{array}$$



$$\begin{array}{r} 8. \quad \boxed{4} 7 6 \\ + \quad 4 \boxed{0} \boxed{4} \\ \hline 8 8 0 \end{array}$$



$$\begin{array}{r} 9. \quad 8 5 5 \\ + \quad \boxed{4} \boxed{5} \boxed{9} \\ \hline \boxed{1} 3 1 4 \end{array}$$



$$\begin{array}{r} 10. \quad \quad 1 9 \\ + \quad \boxed{7} 9 \boxed{6} \\ \hline 8 \boxed{1} 5 \end{array}$$



$$\begin{array}{r} 11. \quad 9 \boxed{1} 1 \\ + \quad \boxed{1} 5 \boxed{1} \\ \hline \boxed{1} 0 6 2 \end{array}$$



$$\begin{array}{r} 12. \quad 6 7 2 \\ + \quad \boxed{4} 5 \boxed{6} \\ \hline \boxed{1} 1 \boxed{2} 8 \end{array}$$



$$\begin{array}{r} 13. \quad \boxed{7} 1 \boxed{8} \\ + \quad 4 \boxed{3} 1 \\ \hline \boxed{1} 1 4 9 \end{array}$$



$$\begin{array}{r} 14. \quad \quad 7 2 \\ + \quad \boxed{9} 7 2 \\ \hline \boxed{1} 0 \boxed{4} 4 \end{array}$$



$$\begin{array}{r} 15. \quad 1 \boxed{7} \boxed{7} \\ + \quad 6 5 4 \\ \hline \boxed{8} 3 1 \end{array}$$



$$\begin{array}{r} 16. \quad 1 3 3 \\ + \quad \boxed{7} \boxed{8} 5 \\ \hline 9 1 \boxed{8} \end{array}$$



$$\begin{array}{r} 17. \quad 2 3 \boxed{2} \\ + \quad \boxed{6} 0 7 \\ \hline 8 \boxed{3} 9 \end{array}$$



$$\begin{array}{r} 18. \quad \boxed{8} \boxed{5} 5 \\ + \quad 7 3 \\ \hline 9 2 \boxed{8} \end{array}$$



$$\begin{array}{r} 19. \quad 5 \boxed{0} 0 \\ + \quad \boxed{9} 3 2 \\ \hline \boxed{1} 4 3 \boxed{2} \end{array}$$



$$\begin{array}{r} 20. \quad 2 7 \boxed{9} \\ + \quad \boxed{5} 0 3 \\ \hline 7 \boxed{8} 2 \end{array}$$



GHOSTLY FIGURES MISSING DIGITS ADDITION (D)

Name: _____

Date: _____

Score: _____

Fill in the digits that have mysteriously disappeared.

1.
$$\begin{array}{r} 2 \square \\ + \square 7 \\ \hline 78 \end{array}$$



2.
$$\begin{array}{r} \square \square 3 \\ + 76 \square \\ \hline \square 163 \end{array}$$



3.
$$\begin{array}{r} \square \square \square \\ + 42 \\ \hline 524 \end{array}$$



4.
$$\begin{array}{r} 520 \\ + \square \square 1 \\ \hline \square 37 \square \end{array}$$



5.
$$\begin{array}{r} 21 \square \\ + \square \square 1 \\ \hline 742 \end{array}$$



6.
$$\begin{array}{r} 4 \square 1 \\ + \square 0 \square \\ \hline 987 \end{array}$$



7.
$$\begin{array}{r} \square 97 \\ + 1 \square 2 \\ \hline 61 \square \end{array}$$



8.
$$\begin{array}{r} \square 98 \\ + 815 \\ \hline \square 0 \square \square \end{array}$$



9.
$$\begin{array}{r} 93 \\ + \square \square 6 \\ \hline 45 \square \end{array}$$



10.
$$\begin{array}{r} \square 79 \\ + 3 \square 3 \\ \hline \square 09 \square \end{array}$$



11.
$$\begin{array}{r} 128 \\ + \square 43 \\ \hline 2 \square \square \end{array}$$



12.
$$\begin{array}{r} 3 \square 2 \\ + 56 \\ \hline \square 7 \square \end{array}$$



13.
$$\begin{array}{r} 658 \\ + 788 \\ \hline \square \square \square \square \end{array}$$



14.
$$\begin{array}{r} 563 \\ + \square \square \square \\ \hline \square 332 \end{array}$$



15.
$$\begin{array}{r} 844 \\ + \square 23 \\ \hline \square 6 \square \square \end{array}$$



16.
$$\begin{array}{r} 2 \square 8 \\ + 879 \\ \hline \square \square 1 \square \end{array}$$



17.
$$\begin{array}{r} 17 \\ + \square \square \square \\ \hline 260 \end{array}$$



18.
$$\begin{array}{r} 8 \square \square \\ + \square 92 \\ \hline \square 014 \end{array}$$



19.
$$\begin{array}{r} \square 23 \\ + 1 \square \square \\ \hline 574 \end{array}$$



20.
$$\begin{array}{r} 25 \square \\ + 177 \\ \hline \square \square 7 \end{array}$$



GHOSTLY FIGURES MISSING DIGITS ADDITION (D) ANSWERS


Name: _____

Date: _____

Score: _____

Fill in the digits that have mysteriously disappeared.

1.
$$\begin{array}{r} 21\boxed{1} \\ + \boxed{5}7 \\ \hline 78 \end{array}$$



2.
$$\begin{array}{r} \boxed{4}0\boxed{3} \\ + 76\boxed{0} \\ \hline \boxed{1}163 \end{array}$$



3.
$$\begin{array}{r} \boxed{4}\boxed{8}\boxed{2} \\ + 42 \\ \hline 524 \end{array}$$



4.
$$\begin{array}{r} 520 \\ + \boxed{8}\boxed{5}1 \\ \hline \boxed{1}37\boxed{1} \end{array}$$



5.
$$\begin{array}{r} 21\boxed{1} \\ + \boxed{5}\boxed{3}1 \\ \hline 742 \end{array}$$



6.
$$\begin{array}{r} 4\boxed{8}1 \\ + \boxed{5}0\boxed{6} \\ \hline 987 \end{array}$$



7.
$$\begin{array}{r} \boxed{4}97 \\ + 1\boxed{2}2 \\ \hline 61\boxed{9} \end{array}$$



8.
$$\begin{array}{r} \boxed{1}98 \\ + 815 \\ \hline \boxed{1}0\boxed{1}3 \end{array}$$



9.
$$\begin{array}{r} 93 \\ + \boxed{3}\boxed{6}6 \\ \hline 45\boxed{9} \end{array}$$



10.
$$\begin{array}{r} \boxed{7}79 \\ + 3\boxed{1}3 \\ \hline \boxed{1}09\boxed{2} \end{array}$$



11.
$$\begin{array}{r} 128 \\ + \boxed{1}43 \\ \hline 2\boxed{7}1 \end{array}$$



12.
$$\begin{array}{r} 3\boxed{2}2 \\ + 56 \\ \hline \boxed{3}7\boxed{8} \end{array}$$



13.
$$\begin{array}{r} 658 \\ + 788 \\ \hline \boxed{1}44\boxed{6} \end{array}$$



14.
$$\begin{array}{r} 563 \\ + \boxed{7}\boxed{6}\boxed{9} \\ \hline \boxed{1}332 \end{array}$$



15.
$$\begin{array}{r} 844 \\ + \boxed{8}23 \\ \hline \boxed{1}6\boxed{6}7 \end{array}$$



16.
$$\begin{array}{r} 2\boxed{3}8 \\ + 879 \\ \hline \boxed{1}11\boxed{7} \end{array}$$



17.
$$\begin{array}{r} 17 \\ + \boxed{2}\boxed{4}\boxed{3} \\ \hline 260 \end{array}$$



18.
$$\begin{array}{r} 8\boxed{2}\boxed{2} \\ + \boxed{1}92 \\ \hline \boxed{1}014 \end{array}$$



19.
$$\begin{array}{r} \boxed{4}23 \\ + 1\boxed{5}\boxed{1} \\ \hline 574 \end{array}$$



20.
$$\begin{array}{r} 25\boxed{0} \\ + 177 \\ \hline \boxed{4}2\boxed{7} \end{array}$$



GHOSTLY FIGURES MISSING DIGITS ADDITION (E)

Name: _____

Date: _____

Score: _____

Fill in the digits that have mysteriously disappeared.

1.
$$\begin{array}{r} 341 \\ + 6\boxed{}4 \\ \hline \boxed{}9\boxed{} \end{array}$$



2.
$$\begin{array}{r} \boxed{}\boxed{}8 \\ + 452 \\ \hline \boxed{}04\boxed{} \end{array}$$



3.
$$\begin{array}{r} 8\boxed{}7 \\ + 98\boxed{} \\ \hline \boxed{}\boxed{}76 \end{array}$$



4.
$$\begin{array}{r} 17\boxed{} \\ + 4\boxed{}1 \\ \hline \boxed{}43 \end{array}$$



5.
$$\begin{array}{r} 601 \\ + \boxed{}\boxed{}9 \\ \hline 85\boxed{} \end{array}$$



6.
$$\begin{array}{r} 895 \\ + \boxed{}38 \\ \hline \boxed{}3\boxed{}\boxed{} \end{array}$$



7.
$$\begin{array}{r} 3\boxed{}5 \\ + \boxed{}89 \\ \hline \boxed{}17\boxed{} \end{array}$$



8.
$$\begin{array}{r} 3\boxed{}\boxed{} \\ + 24 \\ \hline \boxed{}23 \end{array}$$



9.
$$\begin{array}{r} \boxed{}\boxed{}1 \\ + 98\boxed{} \\ \hline \boxed{}636 \end{array}$$



10.
$$\begin{array}{r} \boxed{}\boxed{}6 \\ + 712 \\ \hline \boxed{}39\boxed{} \end{array}$$



11.
$$\begin{array}{r} 5\boxed{}3 \\ + 43\boxed{} \\ \hline \boxed{}84 \end{array}$$



12.
$$\begin{array}{r} \boxed{}6\boxed{} \\ + 3\boxed{}4 \\ \hline \boxed{}109 \end{array}$$



13.
$$\begin{array}{r} 16 \\ + 3\boxed{}5 \\ \hline \boxed{}3\boxed{} \end{array}$$



14.
$$\begin{array}{r} 1\boxed{}4 \\ + 949 \\ \hline \boxed{}\boxed{}3\boxed{} \end{array}$$



15.
$$\begin{array}{r} \boxed{}37 \\ + 9\boxed{}\boxed{} \\ \hline \boxed{}726 \end{array}$$



16.
$$\begin{array}{r} \boxed{}38 \\ + 3\boxed{}7 \\ \hline 56\boxed{} \end{array}$$



17.
$$\begin{array}{r} 8\boxed{}\boxed{} \\ + 942 \\ \hline \boxed{}\boxed{}18 \end{array}$$



18.
$$\begin{array}{r} 454 \\ + \boxed{}\boxed{}\boxed{} \\ \hline 704 \end{array}$$



19.
$$\begin{array}{r} \boxed{}\boxed{}7 \\ + 615 \\ \hline \boxed{}47\boxed{} \end{array}$$



20.
$$\begin{array}{r} 54\boxed{} \\ + 1\boxed{}4 \\ \hline \boxed{}88 \end{array}$$



GHOSTLY FIGURES MISSING DIGITS ADDITION (E) ANSWERS

Name: _____

Date: _____

Score: _____

Fill in the digits that have mysteriously disappeared.

$$\begin{array}{r} 1. \quad 341 \\ + 654 \\ \hline 995 \end{array}$$



$$\begin{array}{r} 2. \quad 588 \\ + 452 \\ \hline 1040 \end{array}$$



$$\begin{array}{r} 3. \quad 887 \\ + 989 \\ \hline 1876 \end{array}$$



$$\begin{array}{r} 4. \quad 172 \\ + 471 \\ \hline 643 \end{array}$$



$$\begin{array}{r} 5. \quad 601 \\ + 249 \\ \hline 850 \end{array}$$



$$\begin{array}{r} 6. \quad 895 \\ + 438 \\ \hline 1333 \end{array}$$



$$\begin{array}{r} 7. \quad 385 \\ + 789 \\ \hline 1174 \end{array}$$



$$\begin{array}{r} 8. \quad 399 \\ + 24 \\ \hline 423 \end{array}$$



$$\begin{array}{r} 9. \quad 651 \\ + 985 \\ \hline 1636 \end{array}$$



$$\begin{array}{r} 10. \quad 686 \\ + 712 \\ \hline 1398 \end{array}$$



$$\begin{array}{r} 11. \quad 553 \\ + 431 \\ \hline 984 \end{array}$$



$$\begin{array}{r} 12. \quad 765 \\ + 344 \\ \hline 1109 \end{array}$$



$$\begin{array}{r} 13. \quad 16 \\ + 315 \\ \hline 331 \end{array}$$



$$\begin{array}{r} 14. \quad 184 \\ + 949 \\ \hline 1133 \end{array}$$



$$\begin{array}{r} 15. \quad 737 \\ + 989 \\ \hline 1726 \end{array}$$



$$\begin{array}{r} 16. \quad 238 \\ + 327 \\ \hline 565 \end{array}$$



$$\begin{array}{r} 17. \quad 876 \\ + 942 \\ \hline 1818 \end{array}$$



$$\begin{array}{r} 18. \quad 454 \\ + 250 \\ \hline 704 \end{array}$$



$$\begin{array}{r} 19. \quad 857 \\ + 615 \\ \hline 1472 \end{array}$$



$$\begin{array}{r} 20. \quad 544 \\ + 144 \\ \hline 688 \end{array}$$



GHOSTLY FIGURES MISSING DIGITS ADDITION (F)

Name: _____

Date: _____


Score: _____

Fill in the digits that have mysteriously disappeared.

1.
$$\begin{array}{r} 95\Box \\ + \Box74 \\ \hline \Box4\Box1 \end{array}$$



2.
$$\begin{array}{r} 702 \\ + 6\Box7 \\ \hline \Box\Box6\Box \end{array}$$



3.
$$\begin{array}{r} 722 \\ + \Box\Box9 \\ \hline \Box70\Box \end{array}$$



4.
$$\begin{array}{r} 911 \\ + 854 \\ \hline \Box\Box\Box\Box \end{array}$$



5.
$$\begin{array}{r} \Box63 \\ + 2\Box1 \\ \hline 72\Box \end{array}$$



6.
$$\begin{array}{r} 7\Box \\ + \Box\Box5 \\ \hline 281 \end{array}$$



7.
$$\begin{array}{r} \Box\Box4 \\ + 9\Box \\ \hline 319 \end{array}$$



8.
$$\begin{array}{r} \Box94 \\ + 7\Box4 \\ \hline \Box47\Box \end{array}$$



9.
$$\begin{array}{r} 323 \\ + \Box67 \\ \hline 5\Box\Box \end{array}$$



10.
$$\begin{array}{r} \Box55 \\ + 56 \\ \hline 4\Box\Box \end{array}$$



11.
$$\begin{array}{r} 469 \\ + 2\Box\Box \\ \hline \Box14 \end{array}$$



12.
$$\begin{array}{r} \Box\Box\Box \\ + 584 \\ \hline \Box111 \end{array}$$



13.
$$\begin{array}{r} 9\Box8 \\ + 565 \\ \hline \Box\Box7\Box \end{array}$$



14.
$$\begin{array}{r} \Box\Box\Box \\ + 413 \\ \hline 863 \end{array}$$



15.
$$\begin{array}{r} \Box\Box7 \\ + 806 \\ \hline \Box63\Box \end{array}$$



16.
$$\begin{array}{r} 90\Box \\ + \Box58 \\ \hline \Box2\Box3 \end{array}$$



17.
$$\begin{array}{r} 104 \\ + 95\Box \\ \hline \Box\Box\Box1 \end{array}$$



18.
$$\begin{array}{r} 99\Box \\ + \Box\Box7 \\ \hline \Box615 \end{array}$$



19.
$$\begin{array}{r} \Box4\Box \\ + 2\Box9 \\ \hline 769 \end{array}$$



20.
$$\begin{array}{r} \Box\Box3 \\ + 11\Box \\ \hline 602 \end{array}$$



GHOSTLY FIGURES MISSING DIGITS ADDITION (F) ANSWERS

Name: _____

Date: _____

Score: _____

Fill in the digits that have mysteriously disappeared.

1.
$$\begin{array}{r} 95\boxed{7} \\ + \boxed{4}74 \\ \hline \boxed{1}4\boxed{3}1 \end{array}$$



2.
$$\begin{array}{r} 702 \\ + 6\boxed{6}7 \\ \hline \boxed{1}369 \end{array}$$



3.
$$\begin{array}{r} 722 \\ + \boxed{9}\boxed{7}9 \\ \hline \boxed{1}701 \end{array}$$



4.
$$\begin{array}{r} 911 \\ + 854 \\ \hline \boxed{1}7\boxed{6}5 \end{array}$$



5.
$$\begin{array}{r} \boxed{4}63 \\ + 2\boxed{6}1 \\ \hline 72\boxed{4} \end{array}$$



6.
$$\begin{array}{r} 7\boxed{6} \\ + \boxed{2}05 \\ \hline 281 \end{array}$$



7.
$$\begin{array}{r} \boxed{2}\boxed{2}4 \\ + 9\boxed{5} \\ \hline 319 \end{array}$$



8.
$$\begin{array}{r} \boxed{6}94 \\ + 7\boxed{8}4 \\ \hline \boxed{1}47\boxed{8} \end{array}$$



9.
$$\begin{array}{r} 323 \\ + \boxed{2}67 \\ \hline 5\boxed{9}0 \end{array}$$



10.
$$\begin{array}{r} \boxed{3}55 \\ + 56 \\ \hline 4\boxed{1}1 \end{array}$$



11.
$$\begin{array}{r} 469 \\ + \boxed{2}\boxed{4}\boxed{5} \\ \hline \boxed{7}14 \end{array}$$



12.
$$\begin{array}{r} \boxed{5}\boxed{2}7 \\ + 584 \\ \hline \boxed{1}111 \end{array}$$



13.
$$\begin{array}{r} 9\boxed{0}8 \\ + 565 \\ \hline \boxed{1}47\boxed{3} \end{array}$$



14.
$$\begin{array}{r} \boxed{4}\boxed{5}0 \\ + 413 \\ \hline 863 \end{array}$$



15.
$$\begin{array}{r} \boxed{8}\boxed{2}7 \\ + 806 \\ \hline \boxed{1}63\boxed{3} \end{array}$$



16.
$$\begin{array}{r} 90\boxed{5} \\ + \boxed{3}58 \\ \hline \boxed{1}2\boxed{6}3 \end{array}$$



17.
$$\begin{array}{r} 104 \\ + 95\boxed{7} \\ \hline \boxed{1}0\boxed{6}1 \end{array}$$



18.
$$\begin{array}{r} 99\boxed{8} \\ + \boxed{6}17 \\ \hline \boxed{1}615 \end{array}$$



19.
$$\begin{array}{r} \boxed{5}40 \\ + 2\boxed{2}9 \\ \hline 769 \end{array}$$



20.
$$\begin{array}{r} \boxed{4}\boxed{8}3 \\ + 119 \\ \hline 602 \end{array}$$



GHOSTLY FIGURES MISSING DIGITS ADDITION (Q)

Name: _____

Date: _____

Score: _____

Fill in the digits that have mysteriously disappeared.

1.
$$\begin{array}{r} 211 \\ + 432 \\ \hline \square\square\square \end{array}$$



2.
$$\begin{array}{r} 4\square\square \\ + 46 \\ \hline \square19 \end{array}$$



3.
$$\begin{array}{r} 7\square4 \\ + 986 \\ \hline \square\square7\square \end{array}$$



4.
$$\begin{array}{r} \square20 \\ + 1\square\square \\ \hline \square025 \end{array}$$



5.
$$\begin{array}{r} \square\square\square \\ + 855 \\ \hline \square224 \end{array}$$



6.
$$\begin{array}{r} 71 \\ + 14\square \\ \hline \square\square2 \end{array}$$



7.
$$\begin{array}{r} \square18 \\ + 6\square\square \\ \hline \square226 \end{array}$$



8.
$$\begin{array}{r} 6\square2 \\ + \square81 \\ \hline \square21\square \end{array}$$



9.
$$\begin{array}{r} 9\square9 \\ + \square01 \\ \hline \square58\square \end{array}$$




10.
$$\begin{array}{r} 886 \\ + \square9\square \\ \hline \square0\square1 \end{array}$$



11.
$$\begin{array}{r} 351 \\ + \square8\square \\ \hline 6\square5 \end{array}$$



12.
$$\begin{array}{r} \square36 \\ + 76\square \\ \hline \square4\square6 \end{array}$$



13.
$$\begin{array}{r} 70\square \\ + 973 \\ \hline \square\square\square3 \end{array}$$



14.
$$\begin{array}{r} 636 \\ + \square\square\square \\ \hline \square307 \end{array}$$



15.
$$\begin{array}{r} 1\square0 \\ + \square1\square \\ \hline 225 \end{array}$$



16.
$$\begin{array}{r} 599 \\ + \square75 \\ \hline \square2\square\square \end{array}$$



17.
$$\begin{array}{r} \square57 \\ + 2\square3 \\ \hline \square10\square \end{array}$$



18.
$$\begin{array}{r} \square\square\square \\ + 658 \\ \hline \square325 \end{array}$$



19.
$$\begin{array}{r} 253 \\ + \square\square \\ \hline \square87 \end{array}$$



20.
$$\begin{array}{r} \square7\square \\ + 340 \\ \hline \square3\square7 \end{array}$$



GHOSTLY FIGURES MISSING DIGITS ADDITION (Q) ANSWERS

Name: _____

Date: _____

Score: _____

Fill in the digits that have mysteriously disappeared.

1.
$$\begin{array}{r} 211 \\ + 432 \\ \hline 643 \end{array}$$



2.
$$\begin{array}{r} 473 \\ + 46 \\ \hline 519 \end{array}$$



3.
$$\begin{array}{r} 784 \\ + 986 \\ \hline 1770 \end{array}$$



4.
$$\begin{array}{r} 920 \\ + 105 \\ \hline 1025 \end{array}$$



5.
$$\begin{array}{r} 369 \\ + 855 \\ \hline 1224 \end{array}$$



6.
$$\begin{array}{r} 71 \\ + 141 \\ \hline 212 \end{array}$$



7.
$$\begin{array}{r} 618 \\ + 608 \\ \hline 1226 \end{array}$$



8.
$$\begin{array}{r} 632 \\ + 581 \\ \hline 1213 \end{array}$$



9.
$$\begin{array}{r} 979 \\ + 601 \\ \hline 1580 \end{array}$$




10.
$$\begin{array}{r} 886 \\ + 195 \\ \hline 1081 \end{array}$$



11.
$$\begin{array}{r} 351 \\ + 284 \\ \hline 635 \end{array}$$



12.
$$\begin{array}{r} 736 \\ + 760 \\ \hline 1496 \end{array}$$



13.
$$\begin{array}{r} 700 \\ + 973 \\ \hline 1673 \end{array}$$



14.
$$\begin{array}{r} 636 \\ + 671 \\ \hline 1307 \end{array}$$



15.
$$\begin{array}{r} 110 \\ + 115 \\ \hline 225 \end{array}$$



16.
$$\begin{array}{r} 599 \\ + 675 \\ \hline 1274 \end{array}$$



17.
$$\begin{array}{r} 857 \\ + 243 \\ \hline 1100 \end{array}$$



18.
$$\begin{array}{r} 667 \\ + 658 \\ \hline 1325 \end{array}$$



19.
$$\begin{array}{r} 253 \\ + 34 \\ \hline 287 \end{array}$$



20.
$$\begin{array}{r} 977 \\ + 340 \\ \hline 1317 \end{array}$$



GHOSTLY FIGURES MISSING DIGITS ADDITION (H)

Name: _____

Date: _____

Score: _____

Fill in the digits that have mysteriously disappeared.

1.
$$\begin{array}{r} 14\ \square \\ + \square 34 \\ \hline 5\square 9 \end{array}$$



2.
$$\begin{array}{r} \square 80 \\ + 60\square \\ \hline 8\square 1 \end{array}$$



3.
$$\begin{array}{r} 75\square \\ + \square 08 \\ \hline \square 6\square 4 \end{array}$$



4.
$$\begin{array}{r} \square 7\square \\ + 259 \\ \hline 4\square 8 \end{array}$$



5.
$$\begin{array}{r} 17\square \\ + 6\square 9 \\ \hline \square 71 \end{array}$$



6.
$$\begin{array}{r} \square\square 3 \\ + 6\square \\ \hline 861 \end{array}$$



7.
$$\begin{array}{r} \square 6 \\ + 35\square \\ \hline \square 43 \end{array}$$



8.
$$\begin{array}{r} 703 \\ + \square\square 8 \\ \hline 90\square \end{array}$$



9.
$$\begin{array}{r} 491 \\ + 969 \\ \hline \square\square\square\square \end{array}$$



10.
$$\begin{array}{r} \square\square\square \\ + 607 \\ \hline \square 055 \end{array}$$



11.
$$\begin{array}{r} \square\square 7 \\ + 430 \\ \hline 75\square \end{array}$$



12.
$$\begin{array}{r} 910 \\ + 2\square 2 \\ \hline \square\square 5\square \end{array}$$



13.
$$\begin{array}{r} 46 \\ + 50\square \\ \hline \square\square 7 \end{array}$$



14.
$$\begin{array}{r} 308 \\ + 5\square 5 \\ \hline \square 1\square \end{array}$$



15.
$$\begin{array}{r} 76\square \\ + \square\square 1 \\ \hline 904 \end{array}$$



16.
$$\begin{array}{r} 72\square \\ + \square 27 \\ \hline 9\square 7 \end{array}$$



17.
$$\begin{array}{r} 973 \\ + \square 49 \\ \hline \square 8\square\square \end{array}$$



18.
$$\begin{array}{r} 3\square\square \\ + 88 \\ \hline \square 44 \end{array}$$



19.
$$\begin{array}{r} 588 \\ + \square 66 \\ \hline \square 2\square\square \end{array}$$



20.
$$\begin{array}{r} 527 \\ + 26\square \\ \hline \square\square 0 \end{array}$$



GHOSTLY FIGURES MISSING DIGITS ADDITION (H) ANSWERS

Name: _____

Date: _____

Score: _____

Fill in the digits that have mysteriously disappeared.

$$\begin{array}{r} 1. \quad 14\boxed{5} \\ + \quad \boxed{4}34 \\ \hline 5\boxed{7}9 \end{array}$$



$$\begin{array}{r} 2. \quad \boxed{2}80 \\ + \quad 60\boxed{1} \\ \hline 8\boxed{8}1 \end{array}$$



$$\begin{array}{r} 3. \quad 75\boxed{6} \\ + \quad \boxed{9}08 \\ \hline \boxed{1}6\boxed{6}4 \end{array}$$



$$\begin{array}{r} 4. \quad \boxed{1}7\boxed{9} \\ + \quad 259 \\ \hline 4\boxed{3}8 \end{array}$$



$$\begin{array}{r} 5. \quad 17\boxed{2} \\ + \quad 6\boxed{9}9 \\ \hline \boxed{8}71 \end{array}$$



$$\begin{array}{r} 6. \quad \boxed{7}93 \\ + \quad 6\boxed{8} \\ \hline 861 \end{array}$$



$$\begin{array}{r} 7. \quad \boxed{8}6 \\ + \quad 35\boxed{7} \\ \hline \boxed{4}43 \end{array}$$



$$\begin{array}{r} 8. \quad 703 \\ + \quad \boxed{1}98 \\ \hline 90\boxed{1} \end{array}$$



$$\begin{array}{r} 9. \quad 491 \\ + \quad 969 \\ \hline \boxed{1}4\boxed{6}0 \end{array}$$



$$\begin{array}{r} 10. \quad \boxed{4}4\boxed{8} \\ + \quad 607 \\ \hline \boxed{1}055 \end{array}$$



$$\begin{array}{r} 11. \quad \boxed{3}27 \\ + \quad 430 \\ \hline 75\boxed{7} \end{array}$$




$$\begin{array}{r} 12. \quad 910 \\ + \quad 2\boxed{4}2 \\ \hline \boxed{1}152 \end{array}$$



$$\begin{array}{r} 13. \quad 46 \\ + \quad 50\boxed{1} \\ \hline \boxed{5}47 \end{array}$$



$$\begin{array}{r} 14. \quad 308 \\ + \quad 5\boxed{0}5 \\ \hline \boxed{8}1\boxed{3} \end{array}$$



$$\begin{array}{r} 15. \quad 76\boxed{3} \\ + \quad \boxed{1}41 \\ \hline 904 \end{array}$$



$$\begin{array}{r} 16. \quad 72\boxed{0} \\ + \quad 227 \\ \hline 947 \end{array}$$



$$\begin{array}{r} 17. \quad 973 \\ + \quad \boxed{8}49 \\ \hline \boxed{1}8\boxed{2}2 \end{array}$$



$$\begin{array}{r} 18. \quad 3\boxed{5}6 \\ + \quad 88 \\ \hline \boxed{4}44 \end{array}$$



$$\begin{array}{r} 19. \quad 588 \\ + \quad \boxed{6}66 \\ \hline \boxed{1}2\boxed{5}4 \end{array}$$



$$\begin{array}{r} 20. \quad 527 \\ + \quad 26\boxed{3} \\ \hline \boxed{7}90 \end{array}$$



GHOSTLY FIGURES MISSING DIGITS ADDITION (1)

Name: _____

Date: _____

Score: _____

Fill in the digits that have mysteriously disappeared.

1.
$$\begin{array}{r} 306 \\ + 9\ \square\square \\ \hline \square\square79 \end{array}$$



2.
$$\begin{array}{r} \square\square\square \\ + 293 \\ \hline 932 \end{array}$$



3.
$$\begin{array}{r} 414 \\ + \square77 \\ \hline \square2\square\square \end{array}$$



4.
$$\begin{array}{r} 113 \\ + \square6\square \\ \hline \square0\square5 \end{array}$$



5.
$$\begin{array}{r} 97\square \\ + \square\square5 \\ \hline \square402 \end{array}$$



6.
$$\begin{array}{r} 5\square\square \\ + \square78 \\ \hline \square077 \end{array}$$



7.
$$\begin{array}{r} 687 \\ + \square\square3 \\ \hline \square60\square \end{array}$$



8.
$$\begin{array}{r} 87\square \\ + 734 \\ \hline \square\square\square8 \end{array}$$



9.
$$\begin{array}{r} \square36 \\ + 66\square \\ \hline \square1\square3 \end{array}$$



10.
$$\begin{array}{r} 82\square \\ + 1\square2 \\ \hline \square86 \end{array}$$



11.
$$\begin{array}{r} 2\square2 \\ + \square9\square \\ \hline 451 \end{array}$$



12.
$$\begin{array}{r} 7\square\square \\ + \square02 \\ \hline \square491 \end{array}$$



13.
$$\begin{array}{r} \square\square\square \\ + 294 \\ \hline 701 \end{array}$$



14.
$$\begin{array}{r} \square40 \\ + 4\square\square \\ \hline 878 \end{array}$$



15.
$$\begin{array}{r} \square78 \\ + 9\square6 \\ \hline \square16\square \end{array}$$



16.
$$\begin{array}{r} 476 \\ + \square27 \\ \hline \square4\square\square \end{array}$$



17.
$$\begin{array}{r} 29\square \\ + \square59 \\ \hline 8\square5 \end{array}$$



18.
$$\begin{array}{r} \square\square8 \\ + 939 \\ \hline \square18\square \end{array}$$



19.
$$\begin{array}{r} 39\square \\ + 3\square4 \\ \hline \square58 \end{array}$$



20.
$$\begin{array}{r} \square\square9 \\ + 56\square \\ \hline 758 \end{array}$$



GHOSTLY FIGURES MISSING DIGITS ADDITION (D) ANSWERS

Name: _____

Date: _____

Score: _____

Fill in the digits that have mysteriously disappeared.

1.
$$\begin{array}{r} 306 \\ + 973 \\ \hline 1279 \end{array}$$



2.
$$\begin{array}{r} 639 \\ + 293 \\ \hline 932 \end{array}$$



3.
$$\begin{array}{r} 414 \\ + 877 \\ \hline 1291 \end{array}$$



4.
$$\begin{array}{r} 113 \\ + 962 \\ \hline 1075 \end{array}$$



5.
$$\begin{array}{r} 977 \\ + 425 \\ \hline 1402 \end{array}$$



6.
$$\begin{array}{r} 599 \\ + 478 \\ \hline 1077 \end{array}$$



7.
$$\begin{array}{r} 687 \\ + 913 \\ \hline 1600 \end{array}$$



8.
$$\begin{array}{r} 874 \\ + 734 \\ \hline 1608 \end{array}$$



9.
$$\begin{array}{r} 436 \\ + 667 \\ \hline 1103 \end{array}$$



10.
$$\begin{array}{r} 824 \\ + 162 \\ \hline 986 \end{array}$$



11.
$$\begin{array}{r} 252 \\ + 199 \\ \hline 451 \end{array}$$



12.
$$\begin{array}{r} 789 \\ + 702 \\ \hline 1491 \end{array}$$



13.
$$\begin{array}{r} 407 \\ + 294 \\ \hline 701 \end{array}$$



14.
$$\begin{array}{r} 440 \\ + 438 \\ \hline 878 \end{array}$$



15.
$$\begin{array}{r} 178 \\ + 986 \\ \hline 1164 \end{array}$$



16.
$$\begin{array}{r} 476 \\ + 927 \\ \hline 1403 \end{array}$$



17.
$$\begin{array}{r} 296 \\ + 559 \\ \hline 855 \end{array}$$



18.
$$\begin{array}{r} 248 \\ + 939 \\ \hline 1187 \end{array}$$



19.
$$\begin{array}{r} 394 \\ + 364 \\ \hline 758 \end{array}$$



20.
$$\begin{array}{r} 189 \\ + 569 \\ \hline 758 \end{array}$$



GHOSTLY FIGURES MISSING DIGITS ADDITION (J)

Name: _____

Date: _____

Score: _____

Fill in the digits that have mysteriously disappeared.

1.
$$\begin{array}{r} \square 38 \\ + 602 \\ \hline \square 0 \square \square \end{array}$$



2.
$$\begin{array}{r} \square 02 \\ + 405 \\ \hline \square 0 \square \square \end{array}$$



3.
$$\begin{array}{r} 27\square \\ + \square 4 \\ \hline \square 53 \end{array}$$



4.
$$\begin{array}{r} 7\square\square \\ + \square 46 \\ \hline 998 \end{array}$$



5.
$$\begin{array}{r} 6\square 2 \\ + \square 47 \\ \hline \square 41\square \end{array}$$



6.
$$\begin{array}{r} \square\square\square \\ + 744 \\ \hline \square 627 \end{array}$$



7.
$$\begin{array}{r} 32\square \\ + \square 10 \\ \hline \square 0\square 7 \end{array}$$



8.
$$\begin{array}{r} \square\square\square \\ + 820 \\ \hline \square 310 \end{array}$$



9.
$$\begin{array}{r} \square\square 2 \\ + 880 \\ \hline \square 48\square \end{array}$$



10.
$$\begin{array}{r} 4\square\square \\ + 963 \\ \hline \square\square 92 \end{array}$$



11.
$$\begin{array}{r} 296 \\ + \square\square\square \\ \hline \square 019 \end{array}$$



12.
$$\begin{array}{r} \square\square \\ + 983 \\ \hline \square\square 06 \end{array}$$



13.
$$\begin{array}{r} 4\square\square \\ + \square 15 \\ \hline 740 \end{array}$$



14.
$$\begin{array}{r} 882 \\ + \square\square\square \\ \hline \square 108 \end{array}$$



15.
$$\begin{array}{r} 8\square 9 \\ + \square 79 \\ \hline \square 44\square \end{array}$$



16.
$$\begin{array}{r} 3\square\square \\ + \square 87 \\ \hline 854 \end{array}$$



17.
$$\begin{array}{r} \square\square \\ + 389 \\ \hline \square 83 \end{array}$$



18.
$$\begin{array}{r} \square\square 9 \\ + 627 \\ \hline \square 47\square \end{array}$$



19.
$$\begin{array}{r} \square 47 \\ + 3\square\square \\ \hline 566 \end{array}$$



20.
$$\begin{array}{r} \square 2 \\ + \square 4\square \\ \hline 357 \end{array}$$



GHOSTLY FIGURES MISSING DIGITS ADDITION (J) ANSWERS

Name: _____

Date: _____

Score: _____

Fill in the digits that have mysteriously disappeared.

$$\begin{array}{r} 1. \quad \boxed{4}38 \\ + \quad 602 \\ \hline \boxed{1}0\boxed{4}0 \end{array}$$



$$\begin{array}{r} 2. \quad \boxed{6}02 \\ + \quad 405 \\ \hline \boxed{1}0\boxed{0}7 \end{array}$$



$$\begin{array}{r} 3. \quad 27\boxed{9} \\ + \quad \boxed{7}4 \\ \hline \boxed{3}53 \end{array}$$



$$\begin{array}{r} 4. \quad 7\boxed{5}2 \\ + \quad \boxed{2}46 \\ \hline 998 \end{array}$$



$$\begin{array}{r} 5. \quad 6\boxed{7}2 \\ + \quad \boxed{7}47 \\ \hline \boxed{1}419 \end{array}$$



$$\begin{array}{r} 6. \quad \boxed{8}83 \\ + \quad 744 \\ \hline \boxed{1}627 \end{array}$$



$$\begin{array}{r} 7. \quad 32\boxed{7} \\ + \quad \boxed{7}10 \\ \hline \boxed{1}037 \end{array}$$



$$\begin{array}{r} 8. \quad \boxed{4}90 \\ + \quad 820 \\ \hline \boxed{1}310 \end{array}$$



$$\begin{array}{r} 9. \quad \boxed{6}02 \\ + \quad 880 \\ \hline \boxed{1}482 \end{array}$$



$$\begin{array}{r} 10. \quad 4\boxed{2}9 \\ + \quad 963 \\ \hline \boxed{1}392 \end{array}$$



$$\begin{array}{r} 11. \quad 296 \\ + \quad \boxed{7}2\boxed{3} \\ \hline \boxed{1}019 \end{array}$$



$$\begin{array}{r} 12. \quad \boxed{2}3 \\ + \quad 983 \\ \hline \boxed{1}006 \end{array}$$



$$\begin{array}{r} 13. \quad 4\boxed{2}5 \\ + \quad \boxed{3}15 \\ \hline 740 \end{array}$$



$$\begin{array}{r} 14. \quad 882 \\ + \quad \boxed{2}2\boxed{6} \\ \hline \boxed{1}108 \end{array}$$



$$\begin{array}{r} 15. \quad 8\boxed{6}9 \\ + \quad \boxed{5}79 \\ \hline \boxed{1}448 \end{array}$$



$$\begin{array}{r} 16. \quad 3\boxed{6}7 \\ + \quad \boxed{4}87 \\ \hline 854 \end{array}$$



$$\begin{array}{r} 17. \quad \boxed{9}4 \\ + \quad 389 \\ \hline \boxed{4}83 \end{array}$$



$$\begin{array}{r} 18. \quad \boxed{8}49 \\ + \quad 627 \\ \hline \boxed{1}476 \end{array}$$



$$\begin{array}{r} 19. \quad \boxed{2}47 \\ + \quad 3\boxed{1}9 \\ \hline 566 \end{array}$$



$$\begin{array}{r} 20. \quad \boxed{1}2 \\ + \quad \boxed{3}4\boxed{5} \\ \hline 357 \end{array}$$

