

GHOSTLY FIGURES MISSING DIGITS DIVISION (A)

Name: _____

Date: _____

Score: _____

Fill in the digits that have mysteriously disappeared.

1.
$$\begin{array}{r} 5 \\ 11 \overline{) 5} \end{array}$$



2.
$$\begin{array}{r} 4 \\ \overline{) 12} \end{array}$$



3.
$$\begin{array}{r} \\ 8 \overline{) 64} \end{array}$$



4.
$$\begin{array}{r} 4 \\ 3 \overline{) 1} \end{array}$$



5.
$$\begin{array}{r} 11 \\ \overline{) 99} \end{array}$$



6.
$$\begin{array}{r} 5 \\ 3 \overline{) 1} \end{array}$$



7.
$$\begin{array}{r} \\ 4 \overline{) 32} \end{array}$$



8.
$$\begin{array}{r} 1 \\ 7 \overline{) 77} \end{array}$$



9.
$$\begin{array}{r} 4 \\ 1 \overline{) 40} \end{array}$$



10.
$$\begin{array}{r} \\ 10 \overline{) 70} \end{array}$$



11.
$$\begin{array}{r} 10 \\ 6 \overline{) 6} \end{array}$$



12.
$$\begin{array}{r} 7 \\ 8 \overline{) 5} \end{array}$$



13.
$$\begin{array}{r} 10 \\ 12 \overline{) 2} \end{array}$$



14.
$$\begin{array}{r} 2 \\ \overline{) 10} \end{array}$$



15.
$$\begin{array}{r} 2 \\ 7 \overline{) 1} \end{array}$$



16.
$$\begin{array}{r} 12 \\ 3 \overline{) 3} \end{array}$$



17.
$$\begin{array}{r} 4 \\ 9 \overline{) 3} \end{array}$$



18.
$$\begin{array}{r} 9 \\ \overline{) 63} \end{array}$$



19.
$$\begin{array}{r} \\ 7 \overline{) 49} \end{array}$$



20.
$$\begin{array}{r} 9 \\ 6 \overline{) 5} \end{array}$$



GHOSTLY FIGURES MISSING DIGITS DIVISION (A) ANSWERS

Name: _____

Date: _____

Score: _____

Fill in the digits that have mysteriously disappeared.

1.
$$\begin{array}{r} 5 \\ 11 \overline{) 55} \end{array}$$



2.
$$\begin{array}{r} 4 \\ 3 \overline{) 12} \end{array}$$



3.
$$\begin{array}{r} 8 \\ 8 \overline{) 64} \end{array}$$



4.
$$\begin{array}{r} 4 \\ 3 \overline{) 12} \end{array}$$



5.
$$\begin{array}{r} 11 \\ 9 \overline{) 99} \end{array}$$



6.
$$\begin{array}{r} 5 \\ 3 \overline{) 15} \end{array}$$



7.
$$\begin{array}{r} 8 \\ 4 \overline{) 32} \end{array}$$



8.
$$\begin{array}{r} 11 \\ 7 \overline{) 77} \end{array}$$



9.
$$\begin{array}{r} 4 \\ 10 \overline{) 40} \end{array}$$



10.
$$\begin{array}{r} 7 \\ 10 \overline{) 70} \end{array}$$



11.
$$\begin{array}{r} 10 \\ 6 \overline{) 60} \end{array}$$



12.
$$\begin{array}{r} 7 \\ 8 \overline{) 56} \end{array}$$



13.
$$\begin{array}{r} 10 \\ 12 \overline{) 120} \end{array}$$



14.
$$\begin{array}{r} 2 \\ 5 \overline{) 10} \end{array}$$



15.
$$\begin{array}{r} 2 \\ 7 \overline{) 14} \end{array}$$



16.
$$\begin{array}{r} 12 \\ 3 \overline{) 36} \end{array}$$



17.
$$\begin{array}{r} 4 \\ 9 \overline{) 36} \end{array}$$



18.
$$\begin{array}{r} 9 \\ 7 \overline{) 63} \end{array}$$



19.
$$\begin{array}{r} 7 \\ 7 \overline{) 49} \end{array}$$



20.
$$\begin{array}{r} 9 \\ 6 \overline{) 54} \end{array}$$



GHOSTLY FIGURES MISSING DIGITS DIVISION (B)

Name: _____

Date: _____

Score: _____

Fill in the digits that have mysteriously disappeared.

1.
$$\begin{array}{r} \square \\ \square \overline{) 10} \end{array}$$



2.
$$\begin{array}{r} 4 \\ \square \overline{) 24} \end{array}$$



3.
$$\begin{array}{r} 7 \\ 2 \overline{) 1\square} \end{array}$$



4.
$$\begin{array}{r} 4 \\ 12 \overline{) 4\square} \end{array}$$



5.
$$\begin{array}{r} \square \\ 2 \overline{) 12} \end{array}$$



6.
$$\begin{array}{r} 7 \\ 3 \overline{) 2\square} \end{array}$$



7.
$$\begin{array}{r} 4 \\ \square \overline{) 12} \end{array}$$



8.
$$\begin{array}{r} 9 \\ \square \overline{) 45} \end{array}$$



9.
$$\begin{array}{r} \square \\ 10 \overline{) 70} \end{array}$$



10.
$$\begin{array}{r} 4 \\ \square \overline{) 24} \end{array}$$



11.
$$\begin{array}{r} 10 \\ \square \overline{) 90} \end{array}$$



12.
$$\begin{array}{r} 9 \\ \square \overline{) 54} \end{array}$$



13.
$$\begin{array}{r} 3 \\ \square \overline{) 21} \end{array}$$



14.
$$\begin{array}{r} 11 \\ \square \overline{) 22} \end{array}$$



15.
$$\begin{array}{r} \square \\ 9 \overline{) 63} \end{array}$$



16.
$$\begin{array}{r} 3 \\ \square \overline{) 18} \end{array}$$



17.
$$\begin{array}{r} 6 \\ 9 \overline{) 5\square} \end{array}$$



18.
$$\begin{array}{r} 12 \\ 1\square \overline{) \square 20} \end{array}$$



19.
$$\begin{array}{r} 10 \\ 1\square \overline{) \square 20} \end{array}$$



20.
$$\begin{array}{r} \square \\ 5 \overline{) 20} \end{array}$$



GHOSTLY FIGURES MISSING DIGITS DIVISION (B) ANSWERS

Name: _____

Date: _____

Score: _____

Fill in the digits that have mysteriously disappeared.

1.
$$\begin{array}{r} 2 \\ 5 \overline{) 10} \end{array}$$



2.
$$\begin{array}{r} 4 \\ 6 \overline{) 24} \end{array}$$



3.
$$\begin{array}{r} 7 \\ 2 \overline{) 14} \end{array}$$



4.
$$\begin{array}{r} 4 \\ 12 \overline{) 48} \end{array}$$



5.
$$\begin{array}{r} 6 \\ 2 \overline{) 12} \end{array}$$



6.
$$\begin{array}{r} 7 \\ 3 \overline{) 21} \end{array}$$



7.
$$\begin{array}{r} 4 \\ 3 \overline{) 12} \end{array}$$



8.
$$\begin{array}{r} 9 \\ 5 \overline{) 45} \end{array}$$



9.
$$\begin{array}{r} 7 \\ 10 \overline{) 70} \end{array}$$



10.
$$\begin{array}{r} 4 \\ 6 \overline{) 24} \end{array}$$



11.
$$\begin{array}{r} 10 \\ 9 \overline{) 90} \end{array}$$



12.
$$\begin{array}{r} 9 \\ 6 \overline{) 54} \end{array}$$



13.
$$\begin{array}{r} 3 \\ 7 \overline{) 21} \end{array}$$



14.
$$\begin{array}{r} 11 \\ 2 \overline{) 22} \end{array}$$



15.
$$\begin{array}{r} 7 \\ 9 \overline{) 63} \end{array}$$



16.
$$\begin{array}{r} 3 \\ 6 \overline{) 18} \end{array}$$



17.
$$\begin{array}{r} 6 \\ 9 \overline{) 54} \end{array}$$



18.
$$\begin{array}{r} 12 \\ 10 \overline{) 120} \end{array}$$



19.
$$\begin{array}{r} 10 \\ 12 \overline{) 120} \end{array}$$



20.
$$\begin{array}{r} 4 \\ 5 \overline{) 20} \end{array}$$



GHOSTLY FIGURES MISSING DIGITS DIVISION (C)

Name: _____

Date: _____

Score: _____

Fill in the digits that have mysteriously disappeared.

1.
$$\begin{array}{r} \square \overline{) 63} \end{array}$$



2.
$$\begin{array}{r} \square \overline{) 96} \\ 12 \end{array}$$



3.
$$\begin{array}{r} \square \overline{) 20} \end{array}$$



4.
$$\begin{array}{r} \square \overline{) 9\square} \\ 10 \end{array}$$



5.
$$\begin{array}{r} \square \overline{) 4\square} \\ 8 \end{array}$$



6.
$$\begin{array}{r} \square \overline{) 25} \\ 5 \end{array}$$



7.
$$\begin{array}{r} \square \overline{) 32} \\ 8 \end{array}$$



8.
$$\begin{array}{r} \square \overline{) 1\square} \\ 4 \end{array}$$



9.
$$\begin{array}{r} \square \overline{) 84} \\ 12 \end{array}$$



10.
$$\begin{array}{r} \square \overline{) 30} \\ 13 \end{array}$$



11.
$$\begin{array}{r} \square \overline{) 80} \\ 18 \end{array}$$



12.
$$\begin{array}{r} \square \overline{) 2\square} \\ 45 \end{array}$$



13.
$$\begin{array}{r} \square \overline{) 1\square} \\ 72 \end{array}$$



14.
$$\begin{array}{r} \square \overline{) 2\square} \\ 37 \end{array}$$



15.
$$\begin{array}{r} \square \overline{) \square} \\ 3 \end{array}$$



16.
$$\begin{array}{r} \square \overline{) 24} \\ 6 \end{array}$$



17.
$$\begin{array}{r} \square \overline{) 6} \end{array}$$



18.
$$\begin{array}{r} \square \overline{) 4\square} \\ 412 \end{array}$$



19.
$$\begin{array}{r} \square \overline{) 16} \\ 2 \end{array}$$



20.
$$\begin{array}{r} \square \overline{) \square 44} \\ 112 \end{array}$$



GHOSTLY FIGURES MISSING DIGITS DIVISION (C) ANSWERS

Name: _____

Date: _____

Score: _____

Fill in the digits that have mysteriously disappeared.

1.
$$\begin{array}{r} 9 \\ \boxed{7} \overline{) 63} \end{array}$$



2.
$$\begin{array}{r} \boxed{8} \\ 12 \overline{) 96} \end{array}$$



3.
$$\begin{array}{r} 5 \\ \boxed{4} \overline{) 20} \end{array}$$



4.
$$\begin{array}{r} 9 \\ 10 \overline{) 90} \end{array}$$



5.
$$\begin{array}{r} 6 \\ 8 \overline{) 48} \end{array}$$



6.
$$\begin{array}{r} \boxed{5} \\ 5 \overline{) 25} \end{array}$$



7.
$$\begin{array}{r} \boxed{4} \\ 8 \overline{) 32} \end{array}$$



8.
$$\begin{array}{r} 3 \\ 4 \overline{) 12} \end{array}$$



9.
$$\begin{array}{r} \boxed{7} \\ 12 \overline{) 84} \end{array}$$



10.
$$\begin{array}{r} 3 \\ 1 \boxed{0} \overline{) 30} \end{array}$$



11.
$$\begin{array}{r} 8 \\ 1 \boxed{0} \overline{) 80} \end{array}$$



12.
$$\begin{array}{r} 5 \\ 4 \overline{) 20} \end{array}$$



13.
$$\begin{array}{r} 2 \\ 7 \overline{) 14} \end{array}$$



14.
$$\begin{array}{r} 7 \\ 3 \overline{) 21} \end{array}$$



15.
$$\begin{array}{r} 3 \\ 3 \overline{) 9} \end{array}$$



16.
$$\begin{array}{r} 6 \\ \boxed{4} \overline{) 24} \end{array}$$



17.
$$\begin{array}{r} 2 \\ \boxed{3} \overline{) 6} \end{array}$$



18.
$$\begin{array}{r} 12 \\ 4 \overline{) 48} \end{array}$$



19.
$$\begin{array}{r} \boxed{8} \\ 2 \overline{) 16} \end{array}$$



20.
$$\begin{array}{r} 12 \\ 1 \boxed{2} \overline{) 144} \end{array}$$



GHOSTLY FIGURES MISSING DIGITS DIVISION (D)

Name: _____

Date: _____

Score: _____

Fill in the digits that have mysteriously disappeared.

1.
$$\begin{array}{r} \square \\ \square \overline{) 24} \end{array}$$



2.
$$\begin{array}{r} 2 \\ \square \overline{) 18} \end{array}$$



3.
$$\begin{array}{r} 8 \\ 9 \overline{) 7\square} \end{array}$$



4.
$$\begin{array}{r} 3 \\ \square \overline{) 15} \end{array}$$



5.
$$\begin{array}{r} 3 \\ 10 \overline{) 3\square} \end{array}$$



6.
$$\begin{array}{r} \square \\ 4 \overline{) 16} \end{array}$$



7.
$$\begin{array}{r} 9 \\ 6 \overline{) 5\square} \end{array}$$



8.
$$\begin{array}{r} 9 \\ \square \overline{) 72} \end{array}$$



9.
$$\begin{array}{r} 4 \\ \square \overline{) 36} \end{array}$$




10.
$$\begin{array}{r} 3 \\ 9 \overline{) 2\square} \end{array}$$



11.
$$\begin{array}{r} \square \\ 9 \overline{) 81} \end{array}$$



12.
$$\begin{array}{r} 11 \\ \square \overline{) 22} \end{array}$$



13.
$$\begin{array}{r} 8 \\ \square \overline{) 64} \end{array}$$



14.
$$\begin{array}{r} 5 \\ \square \overline{) 45} \end{array}$$



15.
$$\begin{array}{r} 1\square \\ 6 \overline{) 60} \end{array}$$



16.
$$\begin{array}{r} 1\square \\ 12 \overline{) \square 20} \end{array}$$



17.
$$\begin{array}{r} 7 \\ 1\square \overline{) 77} \end{array}$$



18.
$$\begin{array}{r} 7 \\ 5 \overline{) 3\square} \end{array}$$



19.
$$\begin{array}{r} 11 \\ 2 \overline{) 2\square} \end{array}$$



20.
$$\begin{array}{r} \square \\ 6 \overline{) 54} \end{array}$$



GHOSTLY FIGURES MISSING DIGITS DIVISION (D) ANSWERS

Name: _____

Date: _____

Score: _____

Fill in the digits that have mysteriously disappeared.

1.
$$\begin{array}{r} 4 \\ \boxed{6} \overline{) 24} \end{array}$$



2.
$$\begin{array}{r} 2 \\ \boxed{9} \overline{) 18} \end{array}$$



3.
$$\begin{array}{r} 8 \\ 9 \overline{) 7\boxed{2}} \end{array}$$



4.
$$\begin{array}{r} 3 \\ \boxed{5} \overline{) 15} \end{array}$$



5.
$$\begin{array}{r} 3 \\ 10 \overline{) 3\boxed{0}} \end{array}$$



6.
$$\begin{array}{r} \boxed{4} \\ 4 \overline{) 16} \end{array}$$



7.
$$\begin{array}{r} 9 \\ 6 \overline{) 5\boxed{4}} \end{array}$$



8.
$$\begin{array}{r} 9 \\ \boxed{8} \overline{) 72} \end{array}$$



9.
$$\begin{array}{r} 4 \\ \boxed{9} \overline{) 36} \end{array}$$




10.
$$\begin{array}{r} 3 \\ 9 \overline{) 2\boxed{7}} \end{array}$$



11.
$$\begin{array}{r} \boxed{9} \\ 9 \overline{) 81} \end{array}$$



12.
$$\begin{array}{r} 11 \\ \boxed{2} \overline{) 22} \end{array}$$



13.
$$\begin{array}{r} 8 \\ \boxed{8} \overline{) 64} \end{array}$$



14.
$$\begin{array}{r} 5 \\ \boxed{9} \overline{) 45} \end{array}$$



15.
$$\begin{array}{r} 10 \\ 6 \overline{) 60} \end{array}$$



16.
$$\begin{array}{r} 10 \\ 12 \overline{) 120} \end{array}$$



17.
$$\begin{array}{r} 7 \\ 1\boxed{1} \overline{) 77} \end{array}$$



18.
$$\begin{array}{r} 7 \\ 5 \overline{) 3\boxed{5}} \end{array}$$



19.
$$\begin{array}{r} 11 \\ 2 \overline{) 2\boxed{2}} \end{array}$$



20.
$$\begin{array}{r} \boxed{9} \\ 6 \overline{) 54} \end{array}$$



GHOSTLY FIGURES MISSING DIGITS DIVISION (E)

Name: _____

Date: _____

Score: _____

Fill in the digits that have mysteriously disappeared.

1.
$$\begin{array}{r} 1 \square \\ 4 \overline{) 44} \end{array}$$



2.
$$\begin{array}{r} 10 \\ 9 \overline{) 9\square} \end{array}$$



3.
$$\begin{array}{r} \square \\ 4 \overline{) 12} \end{array}$$



4.
$$\begin{array}{r} \square \\ 11 \overline{) 33} \end{array}$$



5.
$$\begin{array}{r} 1 \square \\ 5 \overline{) 55} \end{array}$$



6.
$$\begin{array}{r} \square \\ 5 \overline{) 45} \end{array}$$




7.
$$\begin{array}{r} \square \\ 6 \overline{) 36} \end{array}$$



8.
$$\begin{array}{r} 3 \\ 7 \overline{) 2\square} \end{array}$$



9.
$$\begin{array}{r} 9 \\ \square \overline{) 81} \end{array}$$



10.
$$\begin{array}{r} \square \\ 11 \overline{) 88} \end{array}$$



11.
$$\begin{array}{r} 8 \\ \square \overline{) 24} \end{array}$$



12.
$$\begin{array}{r} 6 \\ 8 \overline{) 4\square} \end{array}$$



13.
$$\begin{array}{r} 10 \\ 1 \square \overline{) \square 10} \end{array}$$



14.
$$\begin{array}{r} 7 \\ 4 \overline{) 2\square} \end{array}$$



15.
$$\begin{array}{r} 8 \\ \square \overline{) 56} \end{array}$$



16.
$$\begin{array}{r} \square \\ 3 \overline{) 12} \end{array}$$



17.
$$\begin{array}{r} 7 \\ 11 \overline{) 7\square} \end{array}$$



18.
$$\begin{array}{r} 1 \square \\ 12 \overline{) \square 32} \end{array}$$



19.
$$\begin{array}{r} 10 \\ 1 \square \overline{) \square 00} \end{array}$$



20.
$$\begin{array}{r} 2 \\ 2 \overline{) \square} \end{array}$$



GHOSTLY FIGURES MISSING DIGITS DIVISION (E) ANSWERS

Name: _____

Date: _____

Score: _____

Fill in the digits that have mysteriously disappeared.

1.
$$\begin{array}{r} 1 \boxed{1} \\ 4 \overline{) 44} \end{array}$$



2.
$$\begin{array}{r} 10 \\ 9 \overline{) 9 \boxed{0}} \end{array}$$



3.
$$\begin{array}{r} \boxed{3} \\ 4 \overline{) 12} \end{array}$$



4.
$$\begin{array}{r} \boxed{3} \\ 11 \overline{) 33} \end{array}$$



5.
$$\begin{array}{r} 1 \boxed{1} \\ 5 \overline{) 55} \end{array}$$



6.
$$\begin{array}{r} \boxed{9} \\ 5 \overline{) 45} \end{array}$$



7.
$$\begin{array}{r} \boxed{6} \\ 6 \overline{) 36} \end{array}$$



8.
$$\begin{array}{r} 3 \\ 7 \overline{) 2 \boxed{1}} \end{array}$$



9.
$$\begin{array}{r} 9 \\ \boxed{9} \overline{) 81} \end{array}$$



10.
$$\begin{array}{r} \boxed{8} \\ 11 \overline{) 88} \end{array}$$



11.
$$\begin{array}{r} 8 \\ \boxed{3} \overline{) 24} \end{array}$$



12.
$$\begin{array}{r} 6 \\ 8 \overline{) 4 \boxed{8}} \end{array}$$



13.
$$\begin{array}{r} 10 \\ 1 \boxed{1} \overline{) \boxed{1} 10} \end{array}$$



14.
$$\begin{array}{r} 7 \\ 4 \overline{) 2 \boxed{8}} \end{array}$$



15.
$$\begin{array}{r} 8 \\ \boxed{7} \overline{) 56} \end{array}$$



16.
$$\begin{array}{r} \boxed{4} \\ 3 \overline{) 12} \end{array}$$



17.
$$\begin{array}{r} 7 \\ 11 \overline{) 7 \boxed{7}} \end{array}$$



18.
$$\begin{array}{r} 1 \boxed{1} \\ 12 \overline{) \boxed{1} 32} \end{array}$$



19.
$$\begin{array}{r} 10 \\ 1 \boxed{0} \overline{) \boxed{1} 00} \end{array}$$



20.
$$\begin{array}{r} 2 \\ 2 \overline{) \boxed{4}} \end{array}$$



GHOSTLY FIGURES MISSING DIGITS DIVISION (F)

Name: _____

Date: _____

Score: _____

Fill in the digits that have mysteriously disappeared.

1.
$$\begin{array}{r} \square \\ 12 \overline{) \square 08} \end{array}$$

2.
$$\begin{array}{r} 10 \\ 1 \square \overline{) \square 20} \end{array}$$

3.
$$\begin{array}{r} 3 \\ \square \overline{) 18} \end{array}$$

4.
$$\begin{array}{r} 1 \square \\ 11 \overline{) \square 21} \end{array}$$



5.
$$\begin{array}{r} 11 \\ \square \overline{) 55} \end{array}$$

6.
$$\begin{array}{r} 4 \\ \square \overline{) 20} \end{array}$$

7.
$$\begin{array}{r} 5 \\ 8 \overline{) 4 \square} \end{array}$$

8.
$$\begin{array}{r} \square \\ 2 \overline{) 18} \end{array}$$




9.
$$\begin{array}{r} 2 \\ \square \overline{) 14} \end{array}$$

10.
$$\begin{array}{r} \square \\ 12 \overline{) 96} \end{array}$$

11.
$$\begin{array}{r} 7 \\ 9 \overline{) 6 \square} \end{array}$$

12.
$$\begin{array}{r} \square \\ 11 \overline{) 55} \end{array}$$



13.
$$\begin{array}{r} \square \\ 6 \overline{) 18} \end{array}$$

14.
$$\begin{array}{r} \square \\ 2 \overline{) 12} \end{array}$$

15.
$$\begin{array}{r} 9 \\ 12 \overline{) \square 0 \square} \end{array}$$

16.
$$\begin{array}{r} \square \\ 9 \overline{) 63} \end{array}$$



17.
$$\begin{array}{r} 1 \square \\ 5 \overline{) 60} \end{array}$$

18.
$$\begin{array}{r} 2 \\ 2 \overline{) \square} \end{array}$$

19.
$$\begin{array}{r} 4 \\ \square \overline{) 8} \end{array}$$

20.
$$\begin{array}{r} 4 \\ 3 \overline{) 1 \square} \end{array}$$



GHOSTLY FIGURES MISSING DIGITS DIVISION (F) ANSWERS

Name: _____

Date: _____

Score: _____

Fill in the digits that have mysteriously disappeared.

1.
$$\begin{array}{r} 9 \\ 12 \overline{)108} \end{array}$$

2.
$$\begin{array}{r} 10 \\ 12 \overline{)120} \end{array}$$

3.
$$\begin{array}{r} 3 \\ 6 \overline{)18} \end{array}$$

4.
$$\begin{array}{r} 11 \\ 11 \overline{)121} \end{array}$$



5.
$$\begin{array}{r} 11 \\ 5 \overline{)55} \end{array}$$

6.
$$\begin{array}{r} 4 \\ 5 \overline{)20} \end{array}$$

7.
$$\begin{array}{r} 5 \\ 8 \overline{)40} \end{array}$$

8.
$$\begin{array}{r} 9 \\ 2 \overline{)18} \end{array}$$




9.
$$\begin{array}{r} 2 \\ 7 \overline{)14} \end{array}$$

10.
$$\begin{array}{r} 8 \\ 12 \overline{)96} \end{array}$$

11.
$$\begin{array}{r} 7 \\ 9 \overline{)63} \end{array}$$

12.
$$\begin{array}{r} 5 \\ 11 \overline{)55} \end{array}$$



13.
$$\begin{array}{r} 3 \\ 6 \overline{)18} \end{array}$$

14.
$$\begin{array}{r} 6 \\ 2 \overline{)12} \end{array}$$

15.
$$\begin{array}{r} 9 \\ 12 \overline{)108} \end{array}$$

16.
$$\begin{array}{r} 7 \\ 9 \overline{)63} \end{array}$$



17.
$$\begin{array}{r} 12 \\ 5 \overline{)60} \end{array}$$

18.
$$\begin{array}{r} 2 \\ 2 \overline{)4} \end{array}$$

19.
$$\begin{array}{r} 4 \\ 2 \overline{)8} \end{array}$$

20.
$$\begin{array}{r} 4 \\ 3 \overline{)12} \end{array}$$



GHOSTLY FIGURES MISSING DIGITS DIVISION (Q)

Name: _____

Date: _____

Score: _____

Fill in the digits that have mysteriously disappeared.

1.
$$\begin{array}{r} 4 \\ 1 \square \overline{) 48} \end{array}$$



2.
$$\begin{array}{r} 6 \\ 6 \overline{) 3\square} \end{array}$$



3.
$$\begin{array}{r} 1 \square \\ 3 \overline{) 36} \end{array}$$



4.
$$\begin{array}{r} \square \\ 11 \overline{) 33} \end{array}$$



5.
$$\begin{array}{r} \square \\ 3 \overline{) 12} \end{array}$$



6.
$$\begin{array}{r} \square \\ 12 \overline{) 24} \end{array}$$



7.
$$\begin{array}{r} \square \\ 2 \overline{) 16} \end{array}$$



8.
$$\begin{array}{r} \square \\ 12 \overline{) 84} \end{array}$$



9.
$$\begin{array}{r} 1 \square \\ 3 \overline{) 36} \end{array}$$



10.
$$\begin{array}{r} \square \\ 12 \overline{) 36} \end{array}$$



11.
$$\begin{array}{r} \square \\ 7 \overline{) 63} \end{array}$$



12.
$$\begin{array}{r} \square \\ 5 \overline{) 20} \end{array}$$



13.
$$\begin{array}{r} 2 \\ \square \overline{) 18} \end{array}$$



14.
$$\begin{array}{r} 12 \\ \square \overline{) 72} \end{array}$$



15.
$$\begin{array}{r} 9 \\ 11 \overline{) 9\square} \end{array}$$



16.
$$\begin{array}{r} \square \\ 11 \overline{) 66} \end{array}$$



17.
$$\begin{array}{r} 7 \\ \square \overline{) 28} \end{array}$$



18.
$$\begin{array}{r} 11 \\ 6 \overline{) 6\square} \end{array}$$



19.
$$\begin{array}{r} 1 \square \\ 7 \overline{) 70} \end{array}$$



20.
$$\begin{array}{r} 3 \\ 11 \overline{) 3\square} \end{array}$$



GHOSTLY FIGURES MISSING DIGITS DIVISION (Q) ANSWERS

Name: _____

Date: _____

Score: _____

Fill in the digits that have mysteriously disappeared.

1.
$$\begin{array}{r} 4 \\ 1 \boxed{2} \overline{) 48} \end{array}$$



2.
$$\begin{array}{r} 6 \\ 6 \overline{) 3 \boxed{6}} \end{array}$$



3.
$$\begin{array}{r} 1 \boxed{2} \\ 3 \overline{) 36} \end{array}$$



4.
$$\begin{array}{r} \boxed{3} \\ 11 \overline{) 33} \end{array}$$



5.
$$\begin{array}{r} \boxed{4} \\ 3 \overline{) 12} \end{array}$$



6.
$$\begin{array}{r} \boxed{2} \\ 12 \overline{) 24} \end{array}$$



7.
$$\begin{array}{r} \boxed{8} \\ 2 \overline{) 16} \end{array}$$



8.
$$\begin{array}{r} \boxed{7} \\ 12 \overline{) 84} \end{array}$$



9.
$$\begin{array}{r} 1 \boxed{2} \\ 3 \overline{) 36} \end{array}$$



10.
$$\begin{array}{r} \boxed{3} \\ 12 \overline{) 36} \end{array}$$



11.
$$\begin{array}{r} \boxed{9} \\ 7 \overline{) 63} \end{array}$$



12.
$$\begin{array}{r} \boxed{4} \\ 5 \overline{) 20} \end{array}$$



13.
$$\begin{array}{r} 2 \\ \boxed{9} \overline{) 18} \end{array}$$



14.
$$\begin{array}{r} 12 \\ \boxed{6} \overline{) 72} \end{array}$$



15.
$$\begin{array}{r} 9 \\ 11 \overline{) 99} \end{array}$$



16.
$$\begin{array}{r} \boxed{6} \\ 11 \overline{) 66} \end{array}$$



17.
$$\begin{array}{r} 7 \\ \boxed{4} \overline{) 28} \end{array}$$



18.
$$\begin{array}{r} 11 \\ 6 \overline{) 6 \boxed{6}} \end{array}$$



19.
$$\begin{array}{r} 1 \boxed{0} \\ 7 \overline{) 70} \end{array}$$



20.
$$\begin{array}{r} 3 \\ 11 \overline{) 3 \boxed{3}} \end{array}$$



GHOSTLY FIGURES MISSING DIGITS DIVISION (H)

Name: _____

Date: _____

Score: _____

Fill in the digits that have mysteriously disappeared.

1.
$$\begin{array}{r} \square \overline{) 15} \end{array}$$



2.
$$\begin{array}{r} \square \overline{) 72} \end{array}$$



3.
$$\begin{array}{r} 9 \overline{) 8\square} \end{array}$$



4.
$$\begin{array}{r} 5 \overline{) 3\square} \end{array}$$



5.
$$\begin{array}{r} \square \overline{) 64} \end{array}$$



6.
$$\begin{array}{r} 3 \overline{) 1\square} \end{array}$$



7.
$$\begin{array}{r} 1 \square \overline{) 44} \end{array}$$



8.
$$\begin{array}{r} \square \overline{) 72} \end{array}$$



9.
$$\begin{array}{r} \square \overline{) 14} \end{array}$$



10.
$$\begin{array}{r} \square \overline{) 48} \end{array}$$



11.
$$\begin{array}{r} \square \overline{) 36} \end{array}$$



12.
$$\begin{array}{r} 10 \overline{) 8\square} \end{array}$$



13.
$$\begin{array}{r} 8 \overline{) 6\square} \end{array}$$



14.
$$\begin{array}{r} 2 \overline{) 1\square} \end{array}$$



15.
$$\begin{array}{r} 11 \overline{) 9\square} \end{array}$$



16.
$$\begin{array}{r} \square \overline{) 36} \end{array}$$



17.
$$\begin{array}{r} \square \overline{) 40} \end{array}$$



18.
$$\begin{array}{r} 12 \overline{) 2\square} \end{array}$$



19.
$$\begin{array}{r} 11 \overline{) 4\square} \end{array}$$



20.
$$\begin{array}{r} 7 \overline{) 2\square} \end{array}$$



GHOSTLY FIGURES MISSING DIGITS DIVISION (H) ANSWERS

Name: _____

Date: _____

Score: _____

Fill in the digits that have mysteriously disappeared.

1.
$$\begin{array}{r} 5 \\ \boxed{3} \overline{) 15} \end{array}$$



2.
$$\begin{array}{r} 12 \\ \boxed{6} \overline{) 72} \end{array}$$



3.
$$\begin{array}{r} 9 \\ 9 \overline{) 8\boxed{1}} \end{array}$$



4.
$$\begin{array}{r} 6 \\ 5 \overline{) 3\boxed{0}} \end{array}$$



5.
$$\begin{array}{r} \boxed{8} \\ 8 \overline{) 64} \end{array}$$



6.
$$\begin{array}{r} 5 \\ 3 \overline{) 1\boxed{5}} \end{array}$$



7.
$$\begin{array}{r} 1\boxed{1} \\ 4 \overline{) 44} \end{array}$$



8.
$$\begin{array}{r} \boxed{8} \\ 9 \overline{) 72} \end{array}$$



9.
$$\begin{array}{r} 7 \\ \boxed{2} \overline{) 14} \end{array}$$



10.
$$\begin{array}{r} \boxed{6} \\ 8 \overline{) 48} \end{array}$$



11.
$$\begin{array}{r} \boxed{4} \\ 9 \overline{) 36} \end{array}$$



12.
$$\begin{array}{r} 10 \\ 8 \overline{) 8\boxed{0}} \end{array}$$



13.
$$\begin{array}{r} 8 \\ 8 \overline{) 6\boxed{4}} \end{array}$$



14.
$$\begin{array}{r} 6 \\ 2 \overline{) 1\boxed{2}} \end{array}$$



15.
$$\begin{array}{r} 9 \\ 11 \overline{) 9\boxed{9}} \end{array}$$



16.
$$\begin{array}{r} 6 \\ \boxed{6} \overline{) 36} \end{array}$$



17.
$$\begin{array}{r} \boxed{5} \\ 8 \overline{) 40} \end{array}$$



18.
$$\begin{array}{r} 12 \\ 2 \overline{) 2\boxed{4}} \end{array}$$



19.
$$\begin{array}{r} 4 \\ 11 \overline{) 4\boxed{4}} \end{array}$$



20.
$$\begin{array}{r} 3 \\ 7 \overline{) 2\boxed{1}} \end{array}$$



GHOSTLY FIGURES MISSING DIGITS DIVISION (1)

Name: _____

Date: _____

Score: _____

Fill in the digits that have mysteriously disappeared.

1.
$$\begin{array}{r} 2 \\ 6 \overline{) 1 \square} \end{array}$$



2.
$$\begin{array}{r} \square \\ 8 \overline{) 4 0} \end{array}$$



3.
$$\begin{array}{r} \square \\ 5 \overline{) 4 5} \end{array}$$



4.
$$\begin{array}{r} 11 \\ 12 \overline{) \square 3 \square} \end{array}$$



5.
$$\begin{array}{r} 12 \\ \square \overline{) 6 0} \end{array}$$



6.
$$\begin{array}{r} 6 \\ 5 \overline{) 3 \square} \end{array}$$



7.
$$\begin{array}{r} 5 \\ 6 \overline{) 3 \square} \end{array}$$



8.
$$\begin{array}{r} 9 \\ \square \overline{) 4 5} \end{array}$$



9.
$$\begin{array}{r} \square \\ 10 \overline{) 8 0} \end{array}$$



10.
$$\begin{array}{r} 4 \\ 12 \overline{) 4 \square} \end{array}$$



11.
$$\begin{array}{r} \square \\ 4 \overline{) 3 2} \end{array}$$



12.
$$\begin{array}{r} 4 \\ 9 \overline{) 3 \square} \end{array}$$



13.
$$\begin{array}{r} \square \\ 11 \overline{) 6 6} \end{array}$$



14.
$$\begin{array}{r} 5 \\ \square \overline{) 4 0} \end{array}$$



15.
$$\begin{array}{r} 9 \\ 8 \overline{) 7 \square} \end{array}$$



16.
$$\begin{array}{r} \square \\ 12 \overline{) 3 6} \end{array}$$



17.
$$\begin{array}{r} 9 \\ 4 \overline{) 3 \square} \end{array}$$



18.
$$\begin{array}{r} 11 \\ \square \overline{) 3 3} \end{array}$$



19.
$$\begin{array}{r} 3 \\ 5 \overline{) 1 \square} \end{array}$$



20.
$$\begin{array}{r} 9 \\ \square \overline{) 7 2} \end{array}$$



GHOSTLY FIGURES MISSING DIGITS DIVISION (D) ANSWERS

Name: _____

Date: _____

Score: _____

Fill in the digits that have mysteriously disappeared.

1.
$$\begin{array}{r} 2 \\ 6 \overline{) 1 \square 2} \end{array}$$



2.
$$\begin{array}{r} \square 5 \\ 8 \overline{) 4 0} \end{array}$$



3.
$$\begin{array}{r} \square 9 \\ 5 \overline{) 4 5} \end{array}$$



4.
$$\begin{array}{r} 11 \\ 12 \overline{) \square 3 \square} \end{array}$$



5.
$$\begin{array}{r} 12 \\ \square 5 \overline{) 6 0} \end{array}$$



6.
$$\begin{array}{r} 6 \\ 5 \overline{) 3 \square 0} \end{array}$$



7.
$$\begin{array}{r} 5 \\ 6 \overline{) 3 \square 0} \end{array}$$



8.
$$\begin{array}{r} 9 \\ \square 5 \overline{) 4 5} \end{array}$$



9.
$$\begin{array}{r} \square 8 \\ 10 \overline{) 8 0} \end{array}$$



10.
$$\begin{array}{r} 4 \\ 12 \overline{) 4 \square 8} \end{array}$$



11.
$$\begin{array}{r} \square 8 \\ 4 \overline{) 3 2} \end{array}$$



12.
$$\begin{array}{r} 4 \\ 9 \overline{) 3 \square 6} \end{array}$$



13.
$$\begin{array}{r} \square 6 \\ 11 \overline{) 6 6} \end{array}$$



14.
$$\begin{array}{r} 5 \\ \square 8 \overline{) 4 0} \end{array}$$



15.
$$\begin{array}{r} 9 \\ 8 \overline{) 7 \square 2} \end{array}$$



16.
$$\begin{array}{r} \square 3 \\ 12 \overline{) 3 6} \end{array}$$



17.
$$\begin{array}{r} 9 \\ 4 \overline{) 3 \square 6} \end{array}$$



18.
$$\begin{array}{r} 11 \\ \square 3 \overline{) 3 3} \end{array}$$



19.
$$\begin{array}{r} 3 \\ 5 \overline{) 1 \square 5} \end{array}$$



20.
$$\begin{array}{r} 9 \\ \square 8 \overline{) 7 2} \end{array}$$



GHOSTLY FIGURES MISSING DIGITS DIVISION (J)

Name: _____

Date: _____

Score: _____

Fill in the digits that have mysteriously disappeared.

1.
$$\begin{array}{r} 6 \\ 1 \square \overline{) 60} \end{array}$$



2.
$$\begin{array}{r} \square \\ 9 \overline{) 18} \end{array}$$



3.
$$\begin{array}{r} \square \\ 10 \overline{) 90} \end{array}$$



4.
$$\begin{array}{r} \square \\ 9 \overline{) 36} \end{array}$$



5.
$$\begin{array}{r} \square \\ 7 \overline{) 21} \end{array}$$



6.
$$\begin{array}{r} 9 \\ \square \overline{) 18} \end{array}$$



7.
$$\begin{array}{r} 3 \\ 11 \overline{) 3\square} \end{array}$$



8.
$$\begin{array}{r} 5 \\ 3 \overline{) 1\square} \end{array}$$



9.
$$\begin{array}{r} 12 \\ \square \overline{) 96} \end{array}$$




10.
$$\begin{array}{r} 9 \\ 2 \overline{) 1\square} \end{array}$$



11.
$$\begin{array}{r} 4 \\ 1\square \overline{) 40} \end{array}$$



12.
$$\begin{array}{r} \square \\ 3 \overline{) 24} \end{array}$$



13.
$$\begin{array}{r} 7 \\ 12 \overline{) 8\square} \end{array}$$



14.
$$\begin{array}{r} 1\square \\ 7 \overline{) 77} \end{array}$$



15.
$$\begin{array}{r} 1\square \\ 3 \overline{) 36} \end{array}$$



16.
$$\begin{array}{r} 12 \\ \square \overline{) \square 08} \end{array}$$



17.
$$\begin{array}{r} 3 \\ \square \overline{) 12} \end{array}$$



18.
$$\begin{array}{r} 3 \\ \square \overline{) 21} \end{array}$$



19.
$$\begin{array}{r} 10 \\ 10 \overline{) \square 0 \square} \end{array}$$



20.
$$\begin{array}{r} \square \\ 5 \overline{) 25} \end{array}$$



GHOSTLY FIGURES MISSING DIGITS DIVISION (J) ANSWERS

Name: _____

Date: _____

Score: _____

Fill in the digits that have mysteriously disappeared.

1.
$$\begin{array}{r} 6 \\ 1 \boxed{0} \overline{) 60} \end{array}$$



2.
$$\begin{array}{r} \boxed{2} \\ 9 \overline{) 18} \end{array}$$



3.
$$\begin{array}{r} \boxed{9} \\ 10 \overline{) 90} \end{array}$$



4.
$$\begin{array}{r} \boxed{4} \\ 9 \overline{) 36} \end{array}$$



5.
$$\begin{array}{r} \boxed{3} \\ 7 \overline{) 21} \end{array}$$



6.
$$\begin{array}{r} 9 \\ \boxed{2} \overline{) 18} \end{array}$$



7.
$$\begin{array}{r} 3 \\ 11 \overline{) 33} \end{array}$$



8.
$$\begin{array}{r} 5 \\ 3 \overline{) 15} \end{array}$$



9.
$$\begin{array}{r} 12 \\ \boxed{8} \overline{) 96} \end{array}$$



10.
$$\begin{array}{r} 9 \\ 2 \overline{) 18} \end{array}$$



11.
$$\begin{array}{r} 4 \\ 1 \boxed{0} \overline{) 40} \end{array}$$



12.
$$\begin{array}{r} \boxed{8} \\ 3 \overline{) 24} \end{array}$$



13.
$$\begin{array}{r} 7 \\ 12 \overline{) 84} \end{array}$$



14.
$$\begin{array}{r} 1 \boxed{1} \\ 7 \overline{) 77} \end{array}$$



15.
$$\begin{array}{r} 1 \boxed{2} \\ 3 \overline{) 36} \end{array}$$



16.
$$\begin{array}{r} 12 \\ \boxed{9} \overline{) 108} \end{array}$$



17.
$$\begin{array}{r} 3 \\ \boxed{4} \overline{) 12} \end{array}$$



18.
$$\begin{array}{r} 3 \\ \boxed{7} \overline{) 21} \end{array}$$



19.
$$\begin{array}{r} 10 \\ 10 \overline{) 100} \end{array}$$



20.
$$\begin{array}{r} \boxed{5} \\ 5 \overline{) 25} \end{array}$$

