

GHOSTLY FIGURES MISSING DIGITS ADDITION AND SUBTRACTION (A)

Name: _____

Date: _____


Score: _____

Fill in the digits that have mysteriously disappeared.

1.
$$\begin{array}{r} \square 1 5 5 \square \\ - 7 \square 9 7 \\ \hline \square 6 \square 8 \end{array}$$




2.
$$\begin{array}{r} 1 1 5 \square \\ + 6 \square \square 8 \\ \hline \square 5 8 0 \end{array}$$



3.
$$\begin{array}{r} \square 6 5 6 0 \\ - 9 \square 0 \square \\ \hline \square 8 \square 1 \end{array}$$



4.
$$\begin{array}{r} 8 \square 2 \square \\ - \square 9 \square 8 \\ \hline 5 0 3 5 \end{array}$$



5.
$$\begin{array}{r} \square \square \square 2 \\ - 7 6 5 \square \\ \hline 1 0 3 5 \end{array}$$



6.
$$\begin{array}{r} 6 \square 8 8 \\ + 6 5 \square \square \\ \hline \square \square 5 0 2 \end{array}$$



7.
$$\begin{array}{r} \square 9 3 \square \\ + 9 \square \square 2 \\ \hline \square 1 9 2 0 \end{array}$$



8.
$$\begin{array}{r} 6 8 \square 6 \\ + 6 6 4 5 \\ \hline \square \square \square 0 \square \end{array}$$



9.
$$\begin{array}{r} \square 1 \square 0 4 \\ - 3 3 \square \square \\ \hline \square 9 6 4 \end{array}$$



10.
$$\begin{array}{r} \square \square 7 5 6 \\ - 7 7 \square 8 \\ \hline 2 \square 8 \square \end{array}$$



11.
$$\begin{array}{r} 2 \square 3 \square \\ + 4 0 9 0 \\ \hline \square 2 \square 2 \end{array}$$



12.
$$\begin{array}{r} \square 3 7 8 2 \\ - 9 \square 9 2 \\ \hline \square 8 \square \square \end{array}$$



13.
$$\begin{array}{r} 2 5 4 7 \\ + 6 6 7 1 \\ \hline \square \square \square \square \end{array}$$



14.
$$\begin{array}{r} \square \square \square 7 \\ + 9 7 5 6 \\ \hline \square 2 9 2 \square \end{array}$$



15.
$$\begin{array}{r} \square \square 9 2 \\ + 3 1 \square 3 \\ \hline 5 7 0 \square \end{array}$$



16.
$$\begin{array}{r} \square \square \square 6 \\ - 5 4 5 0 \\ \hline 2 4 3 \square \end{array}$$



17.
$$\begin{array}{r} \square \square 3 8 7 \\ - 3 5 \square \square \\ \hline 7 \square 8 8 \end{array}$$



18.
$$\begin{array}{r} 5 0 8 9 \\ + \square 0 9 9 \\ \hline 8 \square \square \square \end{array}$$



19.
$$\begin{array}{r} \square \square \square 4 \square \\ - 9 3 \square 6 \\ \hline 9 7 3 4 \end{array}$$



20.
$$\begin{array}{r} 6 4 \square 2 \\ + \square \square 3 \square \\ \hline \square 3 9 0 3 \end{array}$$



GHOSTLY FIGURES MISSING DIGITS ADDITION AND SUBTRACTION (A) ANSWERS

Name: _____

Date: _____


Score: _____

Fill in the digits that have mysteriously disappeared.

$$\begin{array}{r} 1. \quad \boxed{1}155\boxed{5} \\ - \quad 7\boxed{8}97 \\ \hline \quad \boxed{3}6\boxed{5}8 \end{array}$$




$$\begin{array}{r} 2. \quad 115\boxed{2} \\ + \quad 6\boxed{4}28 \\ \hline \quad \boxed{7}580 \end{array}$$



$$\begin{array}{r} 3. \quad \boxed{1}6560 \\ - \quad 9\boxed{7}0\boxed{9} \\ \hline \quad \boxed{6}8\boxed{5}1 \end{array}$$



$$\begin{array}{r} 4. \quad 8\boxed{0}2\boxed{3} \\ - \quad \boxed{2}9\boxed{8}8 \\ \hline \quad 5035 \end{array}$$



$$\begin{array}{r} 5. \quad \boxed{8}692 \\ - \quad 765\boxed{7} \\ \hline \quad 1035 \end{array}$$



$$\begin{array}{r} 6. \quad 6\boxed{9}88 \\ + \quad 65\boxed{1}4 \\ \hline \quad \boxed{1}3502 \end{array}$$



$$\begin{array}{r} 7. \quad \boxed{1}93\boxed{8} \\ + \quad 99\boxed{8}2 \\ \hline \quad \boxed{1}1920 \end{array}$$



$$\begin{array}{r} 8. \quad 68\boxed{5}6 \\ + \quad 6645 \\ \hline \quad \boxed{1}3501 \end{array}$$



$$\begin{array}{r} 9. \quad \boxed{1}1\boxed{3}04 \\ - \quad 33\boxed{4}0 \\ \hline \quad \boxed{7}964 \end{array}$$



$$\begin{array}{r} 10. \quad \boxed{1}0756 \\ - \quad 77\boxed{6}8 \\ \hline \quad 2\boxed{9}88 \end{array}$$



$$\begin{array}{r} 11. \quad 2\boxed{1}3\boxed{2} \\ + \quad 4090 \\ \hline \quad \boxed{6}222 \end{array}$$



$$\begin{array}{r} 12. \quad \boxed{1}3782 \\ - \quad 9\boxed{8}92 \\ \hline \quad \boxed{3}890 \end{array}$$



$$\begin{array}{r} 13. \quad 2547 \\ + \quad 6671 \\ \hline \quad \boxed{9}218 \end{array}$$



$$\begin{array}{r} 14. \quad \boxed{3}167 \\ + \quad 9756 \\ \hline \quad \boxed{1}2923 \end{array}$$



$$\begin{array}{r} 15. \quad \boxed{2}592 \\ + \quad 31\boxed{1}3 \\ \hline \quad 570\boxed{5} \end{array}$$



$$\begin{array}{r} 16. \quad \boxed{7}886 \\ - \quad 5450 \\ \hline \quad 243\boxed{6} \end{array}$$



$$\begin{array}{r} 17. \quad \boxed{1}1387 \\ - \quad 3599 \\ \hline \quad 7\boxed{7}88 \end{array}$$



$$\begin{array}{r} 18. \quad 5089 \\ + \quad \boxed{3}099 \\ \hline \quad 8\boxed{1}88 \end{array}$$



$$\begin{array}{r} 19. \quad \boxed{1}9040 \\ - \quad 9306 \\ \hline \quad 9734 \end{array}$$



$$\begin{array}{r} 20. \quad 64\boxed{7}2 \\ + \quad \boxed{7}431 \\ \hline \quad \boxed{1}3903 \end{array}$$

