

ORDERING DECIMAL TENTHS (A)

INSTRUCTIONS: SPIDERS HAVE MIXED UP FIVE LISTS OF NUMBERS. RE-WRITE EACH SET OF NUMBERS FROM LEAST TO GREATEST.




6.2 6.5 1.5 6.8 3.4 2.1 9.1 9.9




8.9 4.2 3.3 7.7 6.9 9.1 0.6 2.7



4.8 9.4 8.1 9.8 1.2 5.4 9.8 9.3



5 0.6 4.8 6.2 0.7 6.8 6.4 4.8



10 2.1 4.5 2.3 0.6 3.6 6.5 6.7

ORDERING DECIMAL TENTHS (A) ANSWERS

INSTRUCTIONS: SPIDERS HAVE MIXED UP FIVE LISTS OF NUMBERS. RE-WRITE EACH SET OF NUMBERS FROM LEAST TO GREATEST.



6.2 6.5 1.5 6.8 3.4 2.1 9.1 9.9

1.5 2.1 3.4 6.2 6.5 6.8 9.1 9.9




8.9 4.2 3.3 7.7 6.9 9.1 0.6 2.7

0.6 2.7 3.3 4.2 6.9 7.7 8.9 9.1




4.8 9.4 8.1 9.8 1.2 5.4 9.8 9.3

1.2 4.8 5.4 8.1 9.3 9.4 9.8 9.8



5 0.6 4.8 6.2 0.7 6.8 6.4 4.8

0.6 0.7 4.8 4.8 5 6.2 6.4 6.8



10 2.1 4.5 2.3 0.6 3.6 6.5 6.7

0.6 2.1 2.3 3.6 4.5 6.5 6.7 10