

ORDERING DECIMAL TENTHS (B)

INSTRUCTIONS: SPIDERS HAVE MIXED UP FIVE LISTS OF NUMBERS. RE-WRITE EACH SET OF NUMBERS FROM LEAST TO GREATEST.




2.7 4.8 5.6 5.5 3.6 7.9 3 0.9




8.7 1.3 9.4 6.8 8.1 7.4 0 8.3



8.5 9 5.6 10 1.8 9.4 2.7 0.3



5.2 8.8 3.8 7.5 1.9 8.5 6.8 6.1



2.2 8.9 7.5 4.8 9.9 5.1 4 6.2

ORDERING DECIMAL TENTHS (B) ANSWERS

INSTRUCTIONS: SPIDERS HAVE MIXED UP FIVE LISTS OF NUMBERS. RE-WRITE EACH SET OF NUMBERS FROM LEAST TO GREATEST.



2.7 4.8 5.6 5.5 3.6 7.9 3 0.9

0.9 2.7 3 3.6 4.8 5.5 5.6 7.9




8.7 1.3 9.4 6.8 8.1 7.4 0 8.3

0 1.3 6.8 7.4 8.1 8.3 8.7 9.4




8.5 9 5.6 10 1.8 9.4 2.7 0.3

0.3 1.8 2.7 5.6 8.5 9 9.4 10



5.2 8.8 3.8 7.5 1.9 8.5 6.8 6.1

1.9 3.8 5.2 6.1 6.8 7.5 8.5 8.8



2.2 8.9 7.5 4.8 9.9 5.1 4 6.2

2.2 4 4.8 5.1 6.2 7.5 8.9 9.9