

HALLOWEEN COUNTING (B)

Name: _____

Date: _____


Score: _____ /4

Count the number of items in each group, if you dare!

1. There are jack-o'-lanterns.




2. There are ghosts.



3. There are witches.



4. There are bats.



HALLOWEEN COUNTING (B) ANSWERS

Name: _____

Date: _____


Score: _____ /4

Count the number of items in each group, if you dare!

1. There are jack-o'-lanterns.



2. There are ghosts.



3. There are witches.



4. There are bats.

