

HALLOWEEN COUNTING (F)


Name: _____

Date: _____


Score: _____ /4

Count the number of items in each group, if you dare!

1. There are ghosts.



2. There are bats.



3. There are witches.



4. There are jack-o'-lanterns.



HALLOWEEN COUNTING (F) ANSWERS


Name: _____

Date: _____


Score: _____ /4

Count the number of items in each group, if you dare!

1. There are ghosts.



2. There are bats.



3. There are witches.



4. There are jack-o'-lanterns.

